

Duilleagan Sgoileir

Àireamhan gu 10 000

- 1 Luach a rèir àite
- 2 A' cur-ris/toirt air falbh 1, 10, 100, 1000
- 3 Àireamhan letheach slighe eadar
- 4 Faclan àireamh agus figearan
- 5 A' tuairmseachadh

Cur-ris gu 1000

- 6 Àireamhan dà/tri-figear agus iomadan de 10
- 7 A' dùblachadh iomadan de 50, paidhrichean a' tighinn gu 1000
- 8 Leudachadh clàradh, na figearan as brìghmhoire an toiseach
- 9 Leudachadh clàradh, na figearan as neo-bhrìghmhoire an toiseach
- 10 CDA + DA/CDA, gun a bhith a' dol thairis/a' dol thairis 10
- 11 Samhail
- 12 CDA + DA/CDA, a' dol thairis iomad de 100

Toirt air falbh gu 1000

- 13 Leudachadh clàradh, àireamhan dà/tri-figear, gun iomlaid
- 14 Leudachadh clàradh
- 15 Leudachadh clàradh, àireamhan dà/tri-figear, ag iomlaid 10
- 16 Leudachadh clàradh
- 17 Leudachadh clàradh, àireamhan dà/tri-figear, ag iomlaid 100
- 18 Àireamhan dà/tri-figear, gun iomlaid
- 19 Samhail
- 20 Àireamhan dà/tri-figear, ag iomlaid 10
- 21 Àireamhan dà/tri-figear, ag iomlaid 100

Roinneadh

- 22 A' roinn le 8
- 23 Samhail geama
- 24 A' roinn le 9

Bloighean

- 25 Treasan
- 26 Deicheamhan, treasan, còigeamhan
- 27 Deicheamhan, treasan, còigeamhan
- 28 Treas, còigeamh de sheata
- 29 Lethean, cairtealan, treasan, còigeamhan agus deicheamhan
- 30 Àireamhan measgaichte
- 31 Àireamhan measgaichte

Airgead

- 32 Iomlaid à £1 agus £2

Tomhas

- 33 Comas-lionaidh: milliotairean

An Uair

- 34 A' leughadh agus a' sgrìobhadh uairean
- 35 Mionaidean gu agus an dèidh (figearach)
- 36 m., f.
- 37 m., f.

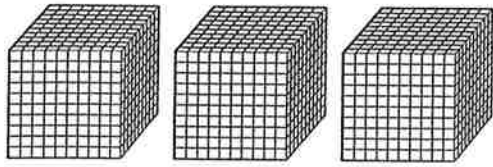
A' làimhseachadh dàta

- 38 Clàran-colbh
- 39 Clàran-colbh
- 40 Diagraman Carroll
- 41 Diagraman Venn

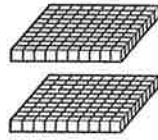
Samhail

- 42 Samhail cairt Domino

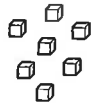
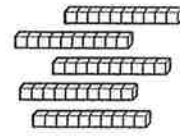
1



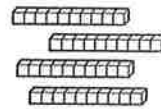
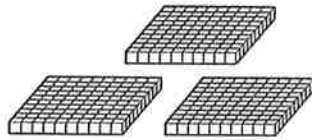
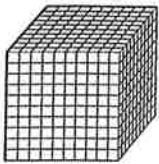
3 mìle



2 cheud 5 deichean agus 7 aonadan



$$3000 + \underline{\quad\quad\quad} + 50 + \underline{\quad\quad\quad} = 3257$$



 mìle ceudan deichean agus aonadan

$$\underline{\quad\quad\quad} + \underline{\quad\quad\quad} + \underline{\quad\quad\quad} + \underline{\quad\quad\quad} = \underline{\quad\quad\quad}$$

2

$$5000 + 900 + 80 + 4 = \underline{\quad\quad\quad}$$

$$9000 + 100 + 0 + 3 = \underline{\quad\quad\quad}$$

$$2000 + 500 + 90 + 0 = \underline{\quad\quad\quad}$$

$$6000 + 0 + 40 + 1 = \underline{\quad\quad\quad}$$

$$3742 = 3000 + \underline{\quad\quad\quad} + 40 + \underline{\quad\quad\quad}$$

$$4819 = \underline{\quad\quad\quad} + 800 + \underline{\quad\quad\quad} + 9$$

$$7035 = \underline{\quad\quad\quad} + \underline{\quad\quad\quad} + 30 + \underline{\quad\quad\quad}$$

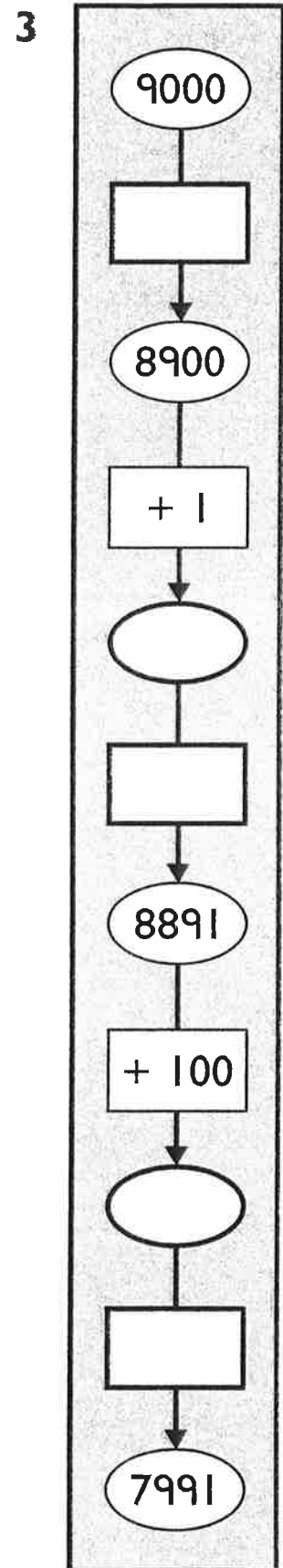
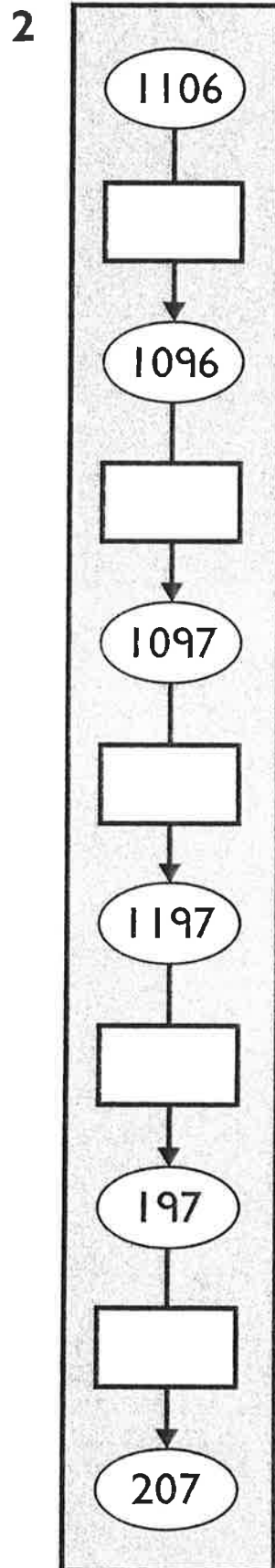
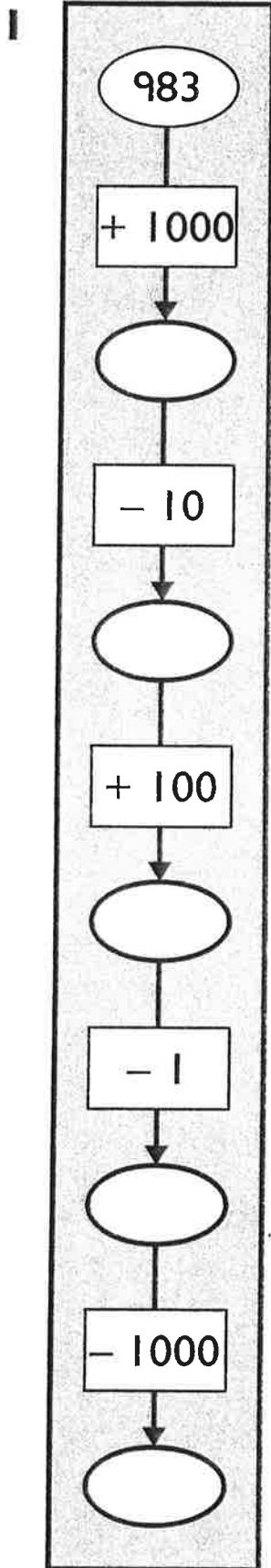
$$8888 = \underline{\quad\quad\quad} + \underline{\quad\quad\quad} + \underline{\quad\quad\quad} + \underline{\quad\quad\quad}$$

$$1406 = \underline{\quad\quad\quad} + \underline{\quad\quad\quad} + \underline{\quad\quad\quad} + \underline{\quad\quad\quad}$$

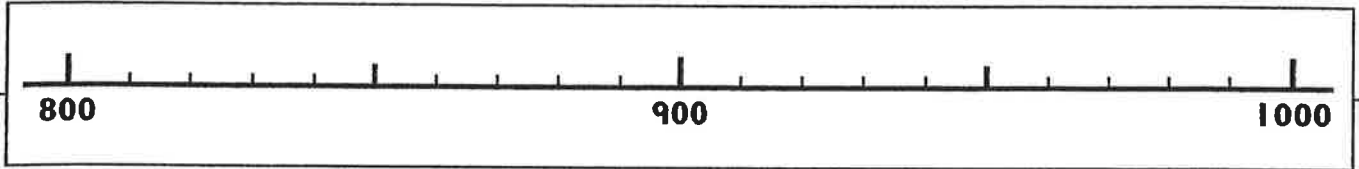
$$5050 = \underline{\quad\quad\quad} + \underline{\quad\quad\quad} + \underline{\quad\quad\quad} + \underline{\quad\quad\quad}$$

$$2000 = \underline{\quad\quad\quad} + \underline{\quad\quad\quad} + \underline{\quad\quad\quad} + \underline{\quad\quad\quad}$$

Crìochnaich gach sreath àireamh.



1



Sgrìobh an àireamh a tha **letheach** slighe eadar:

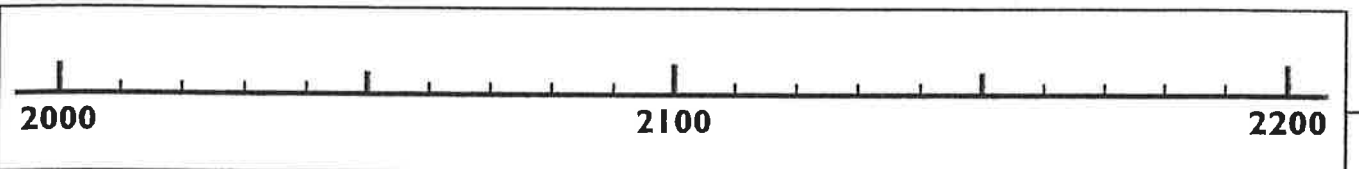
800 agus 1000 _____

800 agus 900 _____

900 agus 1000 _____

850 agus 950 _____

2



Sgrìobh an àireamh a tha **letheach** slighe eadar:

2200 agus 2000 _____

2000 agus 2100 _____

2200 agus 2100 _____

2050 agus 2150 _____

3 Sgrìobh an àireamh a tha **letheach** slighe eadar:

3000 agus 5000 _____

1000 agus 2000 _____

2000 agus 8000 _____

10 000 agus 4000 _____

7500 agus 7600 _____

9500 agus 8500 _____

4800 agus 5000 _____

5220 agus 5240 _____

3400 agus 3480 _____

7800 agus 8200 _____

7500 agus 8000 _____

10 000 agus 9950 _____

Ainm:

Maidis iad seo.



Sia mìle.

990



Trì mìle 's
ceithir cheud.

8001



Ochd mìle
's a h-aon.

6000



Naoi ceud
agus naochad.

10 000



Ceithir mìle dà
cheud agus
seasgad.

3400



Naoi mìle
agus naochad.

4216



Ceithir mìle
dà cheud agus
sia-deug.

5821



Deich mìle.

4260

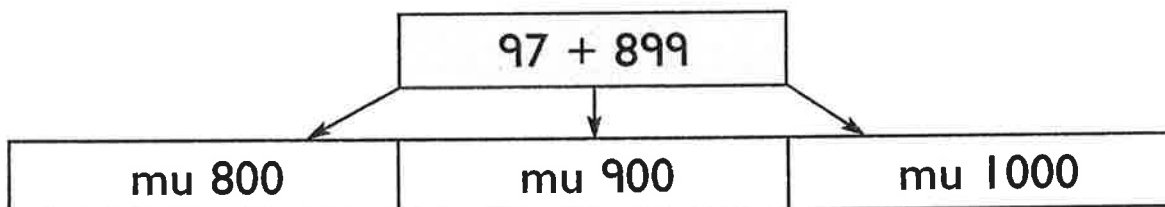
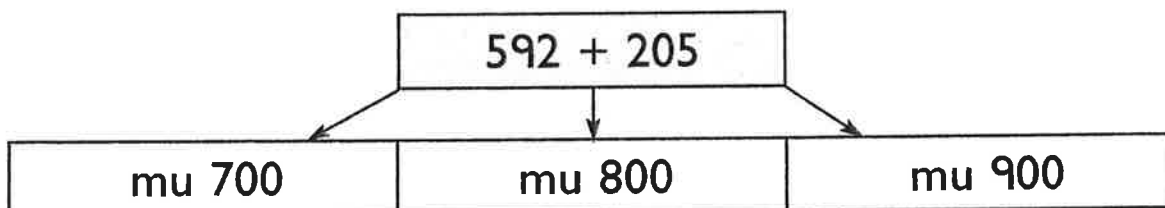
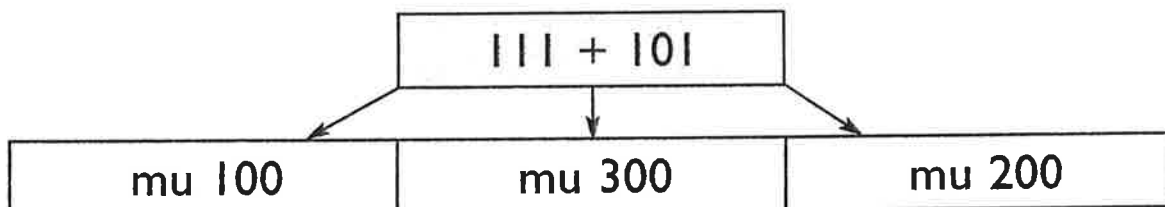
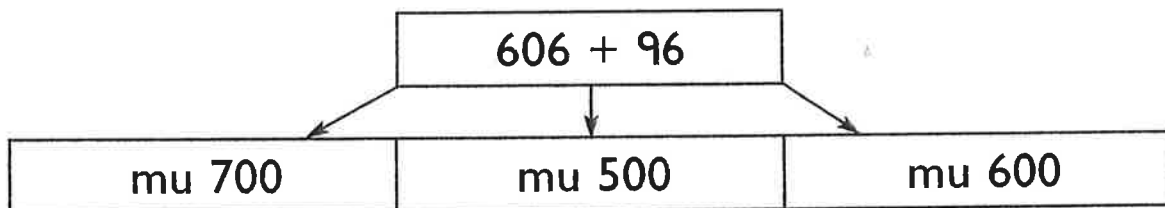
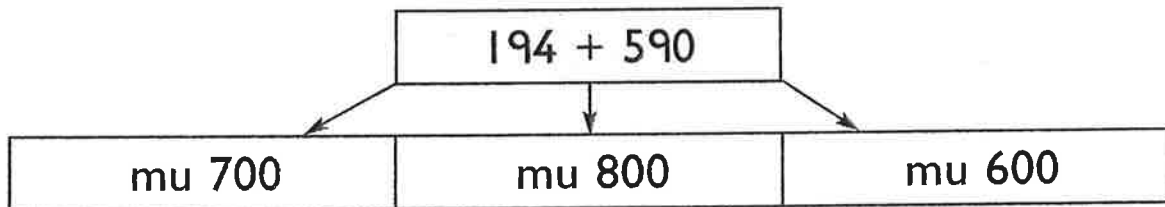
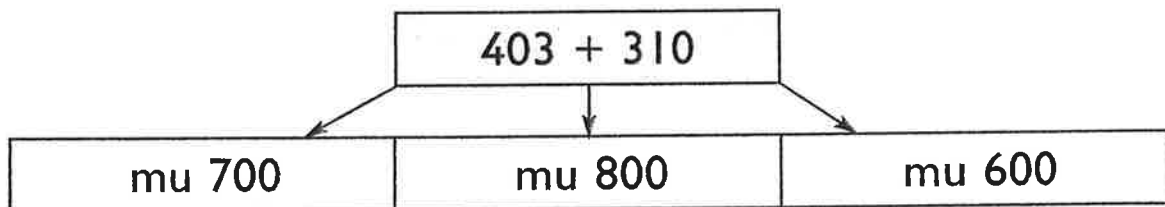
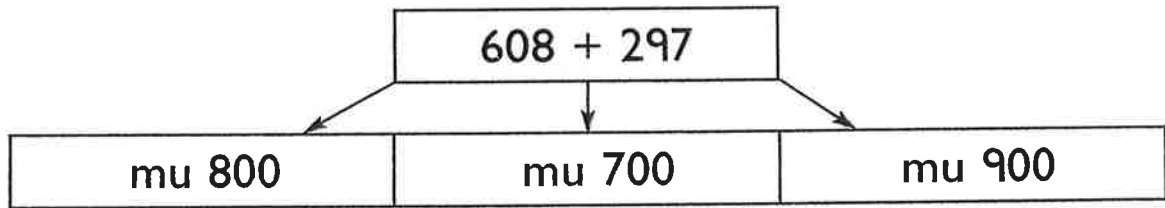


Còig mìle ochd
ceud agus fichead
's a h-aon.

9090

Ainm:

Cuir dath air an àireamh thuairmsich as fheàrr.



Ainm: _____

1	340	+ 37	=	_____	720	+ 26	=	_____
	280	+ 13	=	_____	310	+ 62	=	_____
	760	+ 32	=	_____	220	+ 78	=	_____
	450	+ 19	=	_____	540	+ 14	=	_____
	530	+ 45	=	_____	830	+ 57	=	_____
	350	+	=	393	240	+	=	271
	_____	+ 48	=	668	_____	+ 75	=	885

2

300 + 512 =

205 + 600 =

200 + 763 =

439 + 300 =

600 + 244 =

538 + 400 =

400 + 307 =

640 + 200 =


500 + 430 =

311 + 500 =

200 + = 542

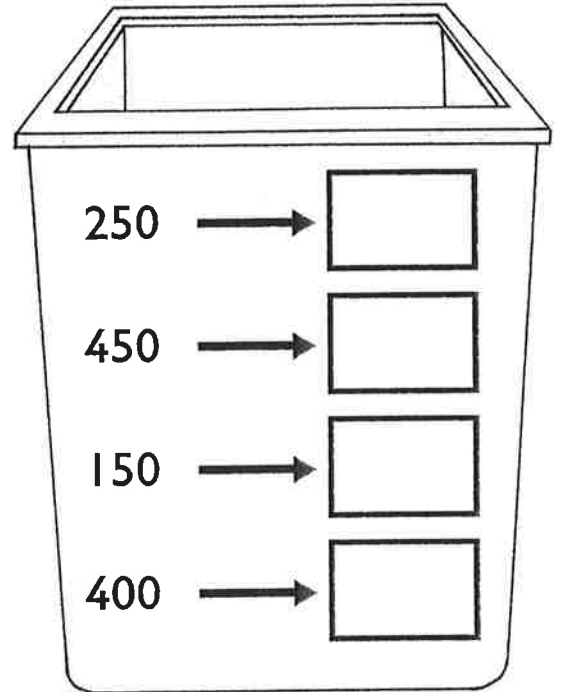
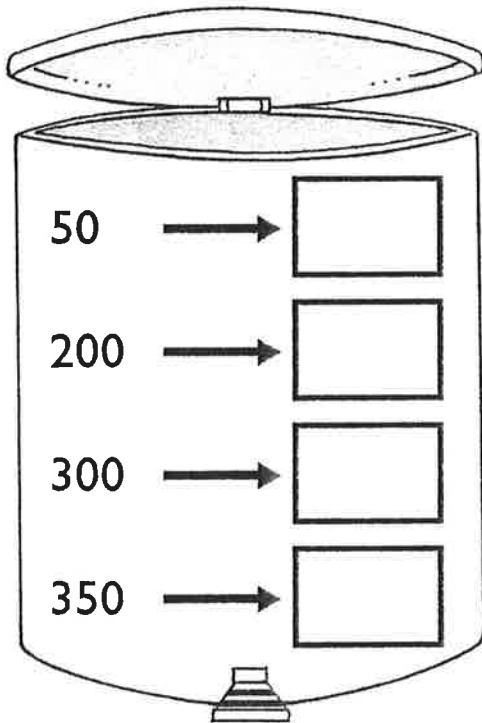
375 + = 975

+ 400 = 812




Ainm:

1 Dùblaich gach àireamh.



2 Maids paidhrichean a bheir dhut 1000.



3

Dèan 1000.

$150 + \square$

$200 + \square$

$100 + \square$

$\square + 500$

$\square + 1000$

$\square + 750$

Ainm:

$$428 + 53 \longrightarrow \begin{array}{r} 428 \\ + 53 \\ \hline 400 \\ 70 \\ 11 \\ \hline \end{array}$$

$428 + 53 = \underline{\hspace{2cm}}$

$$584 + 65 \longrightarrow \begin{array}{r} 584 \\ + 65 \\ \hline 500 \\ \hline \end{array}$$

$584 + 65 = \underline{\hspace{2cm}}$

$$367 + 58 \longrightarrow \begin{array}{r} + \\ \hline \\ \hline \end{array}$$

$367 + 58 = \underline{\hspace{2cm}}$

$$719 + 164 \longrightarrow \begin{array}{r} + \\ \hline \\ \hline \end{array}$$

$719 + 164 = \underline{\hspace{2cm}}$

$$262 + 597 \longrightarrow \begin{array}{r} + \\ \hline \\ \hline \end{array}$$

$262 + 597 = \underline{\hspace{2cm}}$

$$338 + 268 \longrightarrow \begin{array}{r} + \\ \hline \\ \hline \end{array}$$

$338 + 268 = \underline{\hspace{2cm}}$

Ainm:

$$\begin{array}{r} 835 + 28 \longrightarrow \\ \begin{array}{r} 835 \\ + 28 \\ \hline 13 \\ 50 \\ 800 \\ \hline \\ \hline \end{array} \end{array}$$

$835 + 28 = \underline{\hspace{2cm}}$

$$\begin{array}{r} 465 + 63 \longrightarrow \\ \begin{array}{r} 465 \\ + 63 \\ \hline 8 \\ \hline \\ \hline \end{array} \end{array}$$

$465 + 63 = \underline{\hspace{2cm}}$

$$\begin{array}{r} 697 + 87 \longrightarrow \\ \begin{array}{r} + \\ \hline \\ \hline \\ \hline \end{array} \end{array}$$

$697 + 87 = \underline{\hspace{2cm}}$

$$\begin{array}{r} 357 + 419 \longrightarrow \\ \begin{array}{r} + \\ \hline \\ \hline \\ \hline \end{array} \end{array}$$

$357 + 419 = \underline{\hspace{2cm}}$

$$\begin{array}{r} 253 + 554 \longrightarrow \\ \begin{array}{r} + \\ \hline \\ \hline \\ \hline \end{array} \end{array}$$

$253 + 554 = \underline{\hspace{2cm}}$

$$\begin{array}{r} 196 + 397 \longrightarrow \\ \begin{array}{r} + \\ \hline \\ \hline \\ \hline \end{array} \end{array}$$

$196 + 397 = \underline{\hspace{2cm}}$

Ainm:

$$516 + 43 \quad \longrightarrow \quad \begin{array}{r} 516 \\ + 43 \\ \hline \end{array}$$

$516 + 43 = \underline{\hspace{2cm}}$

$67 + 423 \quad \longrightarrow$

$67 + 423 = \underline{\hspace{2cm}}$

$148 + 24 \quad \longrightarrow$

$148 + 24 = \underline{\hspace{2cm}}$

$36 + 838 \quad \longrightarrow$

$36 + 838 = \underline{\hspace{2cm}}$

$$714 + 174 \quad \longrightarrow \quad \begin{array}{r} 714 \\ + 174 \\ \hline \end{array}$$

$714 + 174 = \underline{\hspace{2cm}}$

$529 + 228 \quad \longrightarrow$

$529 + 228 = \underline{\hspace{2cm}}$

$357 + 405 \quad \longrightarrow$

$357 + 405 = \underline{\hspace{2cm}}$

$818 + 137 \quad \longrightarrow$

$818 + 137 = \underline{\hspace{2cm}}$

Ainm:



$$+ \quad \longrightarrow \quad \underline{\hspace{2cm}}$$
$$\underline{\hspace{2cm}}$$

$$+ \quad = \quad \underline{\hspace{2cm}}$$

$$+ \quad \longrightarrow \quad \underline{\hspace{2cm}}$$
$$\underline{\hspace{2cm}}$$

$$+ \quad = \quad \underline{\hspace{2cm}}$$

$$+ \quad \longrightarrow \quad \underline{\hspace{2cm}}$$
$$\underline{\hspace{2cm}}$$

$$+ \quad = \quad \underline{\hspace{2cm}}$$

$$+ \quad \longrightarrow \quad \underline{\hspace{2cm}}$$
$$\underline{\hspace{2cm}}$$

$$+ \quad = \quad \underline{\hspace{2cm}}$$

$$+ \quad \longrightarrow \quad \underline{\hspace{2cm}}$$
$$\underline{\hspace{2cm}}$$

$$+ \quad = \quad \underline{\hspace{2cm}}$$

$$+ \quad \longrightarrow \quad \underline{\hspace{2cm}}$$
$$\underline{\hspace{2cm}}$$

$$+ \quad = \quad \underline{\hspace{2cm}}$$

$$+ \quad \longrightarrow \quad \underline{\hspace{2cm}}$$
$$\underline{\hspace{2cm}}$$

$$+ \quad = \quad \underline{\hspace{2cm}}$$

$$+ \quad \longrightarrow \quad \underline{\hspace{2cm}}$$
$$\underline{\hspace{2cm}}$$

$$+ \quad = \quad \underline{\hspace{2cm}}$$

Ainm: _____

$$736 + 82 \quad \longrightarrow \quad \begin{array}{r} 736 \\ + 82 \\ \hline \end{array}$$

$$736 + 82 = \underline{\hspace{2cm}}$$

$$73 + 393 \quad \longrightarrow \quad \begin{array}{r} \\ \\ \hline \end{array}$$

$$73 + 393 = \underline{\hspace{2cm}}$$

$$882 + 24 \quad \longrightarrow \quad \begin{array}{r} \\ \\ \hline \end{array}$$

$$882 + 24 = \underline{\hspace{2cm}}$$

$$57 + 191 \quad \longrightarrow \quad \begin{array}{r} \\ \\ \hline \end{array}$$

$$57 + 191 = \underline{\hspace{2cm}}$$

$$642 + 273 \quad \longrightarrow \quad \begin{array}{r} 642 \\ + 273 \\ \hline \end{array}$$

$$642 + 273 = \underline{\hspace{2cm}}$$

$$295 + 531 \quad \longrightarrow \quad \begin{array}{r} \\ \\ \hline \end{array}$$

$$295 + 531 = \underline{\hspace{2cm}}$$

$$121 + 798 \quad \longrightarrow \quad \begin{array}{r} \\ \\ \hline \end{array}$$

$$121 + 798 = \underline{\hspace{2cm}}$$

$$317 + 492 \quad \longrightarrow \quad \begin{array}{r} \\ \\ \hline \end{array}$$

$$317 + 492 = \underline{\hspace{2cm}}$$

Ainm: _____

$$468 - 15 \longrightarrow \begin{array}{r} 468 \\ - 15 \\ \hline \\ \hline \end{array}$$

$$468 - 15 = \underline{\hspace{2cm}}$$

$$739 - 23 \longrightarrow \begin{array}{r} \\ \\ \hline \\ \hline \end{array}$$

$$739 - 23 = \underline{\hspace{2cm}}$$

$$856 - 44 \longrightarrow \begin{array}{r} \\ \\ \hline \\ \hline \end{array}$$

$$856 - 44 = \underline{\hspace{2cm}}$$

$$697 - 56 \longrightarrow \begin{array}{r} \\ \\ \hline \\ \hline \end{array}$$

$$697 - 56 = \underline{\hspace{2cm}}$$

$$684 - 462 \longrightarrow \begin{array}{r} 684 \\ - 462 \\ \hline \\ \hline \end{array}$$

$$684 - 462 = \underline{\hspace{2cm}}$$

$$975 - 631 \longrightarrow \begin{array}{r} \\ \\ \hline \\ \hline \end{array}$$

$$975 - 631 = \underline{\hspace{2cm}}$$

$$543 - 140 \longrightarrow \begin{array}{r} \\ \\ \hline \\ \hline \end{array}$$

$$543 - 140 = \underline{\hspace{2cm}}$$

$$883 - 353 \longrightarrow \begin{array}{r} \\ \\ \hline \\ \hline \end{array}$$

$$883 - 353 = \underline{\hspace{2cm}}$$

Ainm:

- →
 -

- = _____

- →

- = _____

- →
 -

- = _____

- →

- = _____

- →
 -

- = _____

- →

- = _____

- →
 -

- = _____

- →

- = _____

$$752 - 28 \longrightarrow \begin{array}{r} 4 \ 12 \\ 7 \cancel{5} \cancel{2} \\ - \quad 28 \\ \hline \\ \hline \end{array}$$

$$752 - 28 = \underline{\hspace{2cm}}$$

$$285 - 37 \longrightarrow \begin{array}{r} \\ \\ \\ \hline \\ \hline \end{array}$$

$$285 - 37 = \underline{\hspace{2cm}}$$

$$974 - 46 \longrightarrow \begin{array}{r} \\ \\ \\ \hline \\ \hline \end{array}$$

$$974 - 46 = \underline{\hspace{2cm}}$$

$$490 - 53 \longrightarrow \begin{array}{r} \\ \\ \\ \hline \\ \hline \end{array}$$

$$490 - 53 = \underline{\hspace{2cm}}$$

$$631 - 214 \longrightarrow \begin{array}{r} 2 \ 11 \\ 6 \cancel{3} \cancel{1} \\ - \quad 214 \\ \hline \\ \hline \end{array}$$

$$631 - 214 = \underline{\hspace{2cm}}$$

$$866 - 529 \longrightarrow \begin{array}{r} \\ \\ \\ \hline \\ \hline \end{array}$$

$$866 - 529 = \underline{\hspace{2cm}}$$

$$555 - 148 \longrightarrow \begin{array}{r} \\ \\ \\ \hline \\ \hline \end{array}$$

$$555 - 148 = \underline{\hspace{2cm}}$$

$$343 - 235 \longrightarrow \begin{array}{r} \\ \\ \\ \hline \\ \hline \end{array}$$

$$343 - 235 = \underline{\hspace{2cm}}$$

$$638 - 84 \longrightarrow \begin{array}{r} 5 \ 13 \\ \cancel{6} \cancel{3} 8 \\ - \quad 84 \\ \hline \\ \hline \end{array}$$

$$638 - 84 = \underline{\hspace{2cm}}$$

$$964 - 92 \longrightarrow \begin{array}{r} \\ \\ \\ \hline \\ \hline \end{array}$$

$$964 - 92 = \underline{\hspace{2cm}}$$

$$256 - 73 \longrightarrow \begin{array}{r} \\ \\ \\ \hline \\ \hline \end{array}$$

$$256 - 73 = \underline{\hspace{2cm}}$$

$$522 - 42 \longrightarrow \begin{array}{r} \\ \\ \\ \hline \\ \hline \end{array}$$

$$522 - 42 = \underline{\hspace{2cm}}$$

$$749 - 468 \longrightarrow \begin{array}{r} 6 \ 14 \\ \cancel{7} \cancel{4} 9 \\ - \quad 468 \\ \hline \\ \hline \end{array}$$

$$749 - 468 = \underline{\hspace{2cm}}$$

$$413 - 193 \longrightarrow \begin{array}{r} \\ \\ \\ \hline \\ \hline \end{array}$$

$$413 - 193 = \underline{\hspace{2cm}}$$

$$875 - 681 \longrightarrow \begin{array}{r} \\ \\ \\ \hline \\ \hline \end{array}$$

$$875 - 681 = \underline{\hspace{2cm}}$$

$$357 - 275 \longrightarrow \begin{array}{r} \\ \\ \\ \hline \\ \hline \end{array}$$

$$357 - 275 = \underline{\hspace{2cm}}$$

Ainm:

Dhachaigh

7	9	5	10	4
10	8	2	1	7
6	4	9	3	0
1	7	5	2	10
3	8	0	6	4

Tòisich

Ainm:

Dhachaigh

Tòisich

5

9 air a
roinneadh
le 9

0

Roinn
72 gu
cothromach
eadar 9.

9

Roinn
45 gu
cothromach
eadar 9.

7

Cia mheud
naoi a tha
ann an 27?

4

81 air a
roinn le 9

3

Roinn 0
le 9.

8

Cuir 36
ann am
buidhnean
de
naoidhean.

1

Roinn
63 gu
cothromach
eadar 9.

Ainm: _____

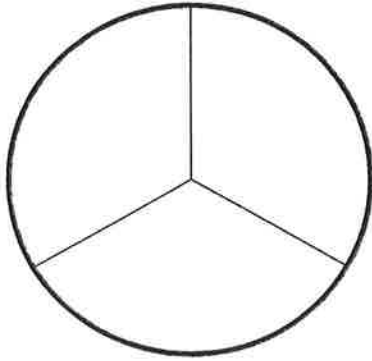
Cluicheadair 2: _____

Cluicheadair 1: _____

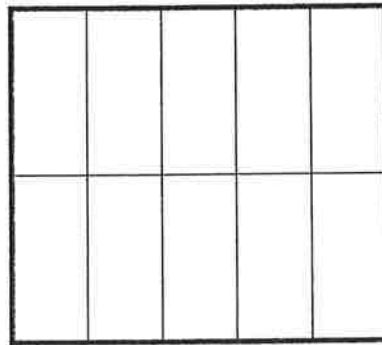
Ainm:

Cuir dath air.

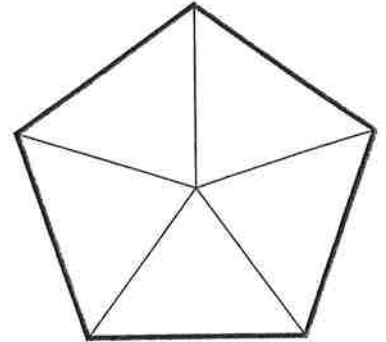
aon treas



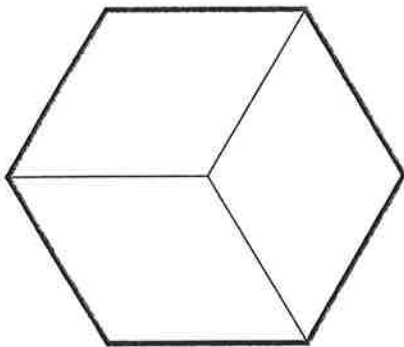
aon deicheamh



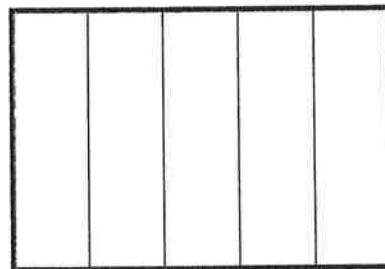
aon chòigeamh



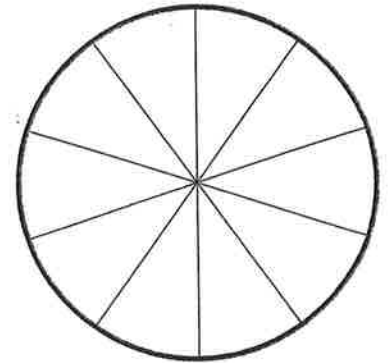
dà threas



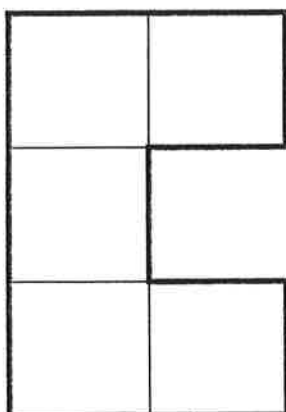
ceithir còigeamhan



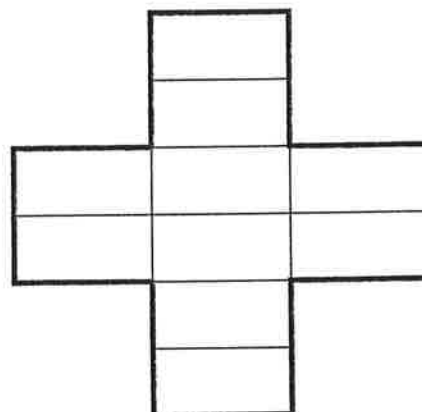
seachd deicheamhan



trì còigeamhan




còig deicheamhan




Ainm:

Dè a' bhloigh de gach cruth a tha • dathte • gun dath?




dathte _____

gun dath _____




dathte _____

gun dath _____




dathte _____

gun dath _____



dathte _____

gun dath _____



dathte _____

gun dath _____

Ainm: _____

Lorg.

aon chòigeamh de 35 = _____

aon treas de 9 = _____

aon chòigeamh de 50 = _____

aon treas de 15 = _____

$\frac{1}{5}$ de 20 = _____

$\frac{1}{3}$ de 21 = _____

$\frac{1}{5}$ de 45 = _____

$\frac{1}{3}$ de 6 = _____

$\frac{1}{5}$ de 5 = _____

$\frac{1}{3}$ de 30 = _____

Maids.

$\frac{1}{5}$ de 10

6

aon treas de 27

$\frac{1}{3}$ de 15

4

aon chòigeamh de 20

aon chòigeamh de 30

9

$\frac{1}{3}$ de 18

aon treas de 12

2

$\frac{1}{5}$ de 25

5

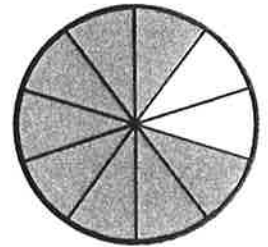
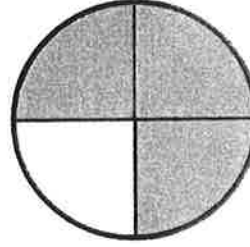
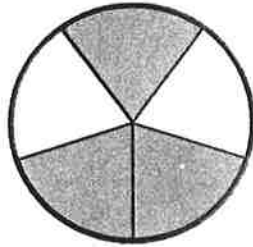
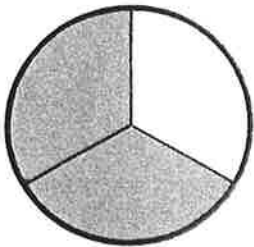


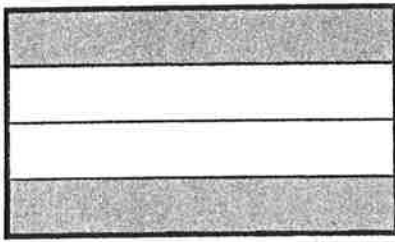
Cuir ✓ air an tè as lugha.

$\frac{1}{3}$ de 24

$\frac{1}{5}$ de 15

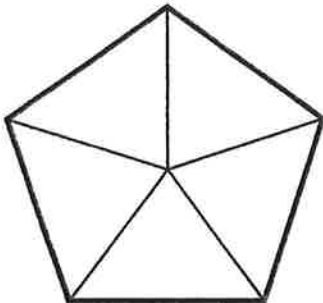
Ainm:

1 Dè a' bhloigh de gach cruth a tha dathte?




2 Cuir dath air

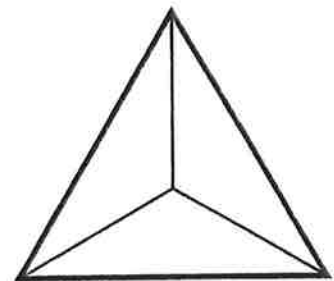
$$\frac{2}{5}$$



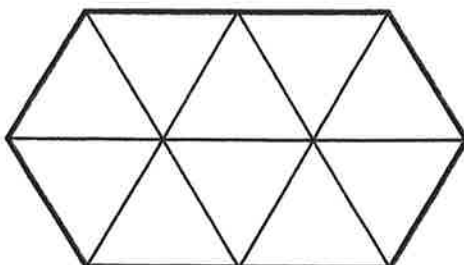
$$\frac{7}{10}$$




$$\frac{3}{3}$$



$\frac{4}{10}$ gorm agus $\frac{6}{10}$ dearg



$\frac{1}{5}$ uaine agus $\frac{4}{5}$ buidhe.



Ainm:

Cuir dath air.

$4\frac{1}{2}$	<input type="text"/>	<input type="text"/>	<input type="text"/>	<input type="text"/>	<input type="text"/>	<input type="text"/>	<input type="text"/>	<input type="text"/>
	<input type="text"/>	<input type="text"/>	<input type="text"/>	<input type="text"/>	<input type="text"/>	<input type="text"/>	<input type="text"/>	<input type="text"/>

$3\frac{3}{4}$	<input type="text"/>	<input type="text"/>	<input type="text"/>	<input type="text"/>	<input type="text"/>	<input type="text"/>	<input type="text"/>	<input type="text"/>	<input type="text"/>	<input type="text"/>	<input type="text"/>	<input type="text"/>
	<input type="text"/>	<input type="text"/>	<input type="text"/>	<input type="text"/>	<input type="text"/>	<input type="text"/>	<input type="text"/>	<input type="text"/>	<input type="text"/>	<input type="text"/>	<input type="text"/>	<input type="text"/>

$2\frac{2}{3}$	<input type="text"/>	<input type="text"/>	<input type="text"/>	<input type="text"/>	<input type="text"/>	<input type="text"/>	<input type="text"/>	<input type="text"/>	<input type="text"/>
	<input type="text"/>	<input type="text"/>	<input type="text"/>	<input type="text"/>	<input type="text"/>	<input type="text"/>	<input type="text"/>	<input type="text"/>	<input type="text"/>

$5\frac{4}{5}$	<input type="text"/>	<input type="text"/>	<input type="text"/>	<input type="text"/>	<input type="text"/>	<input type="text"/>	<input type="text"/>	<input type="text"/>	<input type="text"/>	<input type="text"/>	<input type="text"/>	<input type="text"/>	<input type="text"/>	<input type="text"/>	<input type="text"/>
	<input type="text"/>	<input type="text"/>	<input type="text"/>	<input type="text"/>	<input type="text"/>	<input type="text"/>	<input type="text"/>	<input type="text"/>	<input type="text"/>	<input type="text"/>	<input type="text"/>	<input type="text"/>	<input type="text"/>	<input type="text"/>	<input type="text"/>

$1\frac{9}{10}$	<input type="text"/>	<input type="text"/>	<input type="text"/>	<input type="text"/>	<input type="text"/>	<input type="text"/>	<input type="text"/>	<input type="text"/>	<input type="text"/>	<input type="text"/>	<input type="text"/>	<input type="text"/>	<input type="text"/>	<input type="text"/>	<input type="text"/>	<input type="text"/>	<input type="text"/>	<input type="text"/>	<input type="text"/>	<input type="text"/>
	<input type="text"/>	<input type="text"/>	<input type="text"/>	<input type="text"/>	<input type="text"/>	<input type="text"/>	<input type="text"/>	<input type="text"/>	<input type="text"/>	<input type="text"/>	<input type="text"/>	<input type="text"/>	<input type="text"/>	<input type="text"/>	<input type="text"/>	<input type="text"/>	<input type="text"/>	<input type="text"/>	<input type="text"/>	<input type="text"/>

Ainm:

Cuir dath air.



Tha £1 agam.
Chosg mi
45 sgillinn.

Buinn-airgid ann an iomlaid Zoe.

Na tha air fhàgail _____



Tha £2 agam.
Chosg mi
76 sgillinn.

Buinn-airgid ann an iomlaid Bob.

Na tha air fhàgail _____



Tha £1 agam.
Chosg mi
22 sgillinn.

Buinn-airgid ann an iomlaid Leela.

Na tha air fhàgail _____



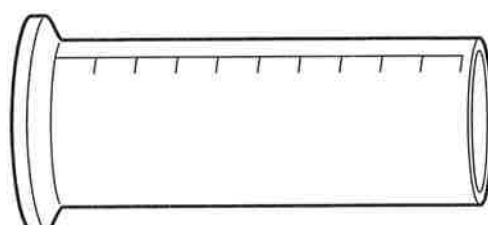
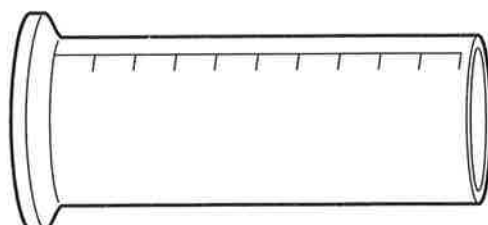
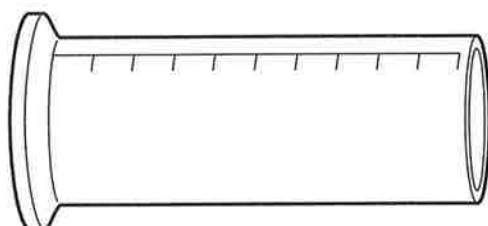
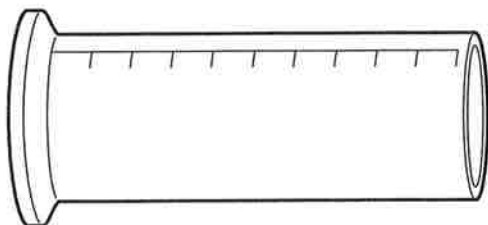
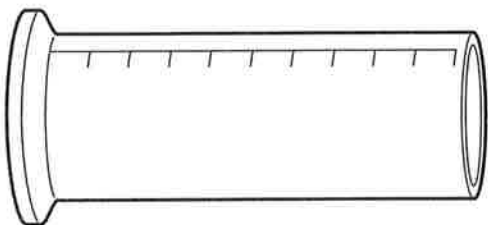
Tha £2 agam.
Chosg mi
37 sgillinn.

Buinn-airgid ann an iomlaid Mel.

Na tha air fhàgail _____

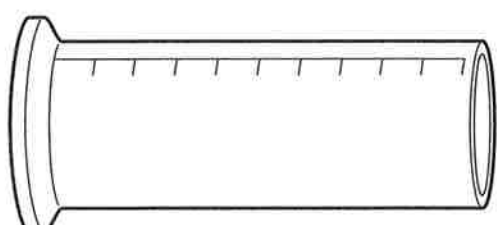
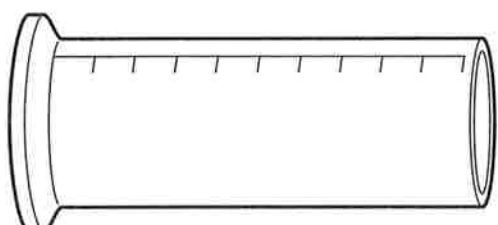
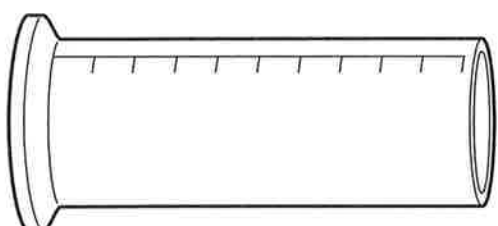
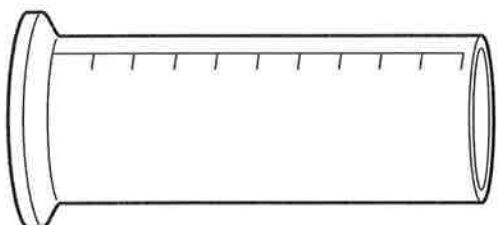
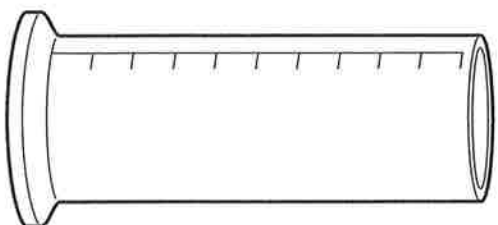
Ainm:









Cia mheud milliotair a tha anns gach sileagan?



Cuir dath air na sileagain agus seall gach meud.

milliotairean





Ainm:

:

:

:

:

:

:

:

:

:

:

Ainm:

1 Sgrìobh na h-uairean seo. Cleachd m. no f.



Leth-uair an dèidh
trì feasgar.



Cairteal gu ochd
sa mhadainn.



Còig mionaidean
an dèidh naoi sa
mhadainn.



Deich mionaidean
gu sia feasgar.



Ochd uairean
feasgar.



Fichead mionaid
an dèidh dhà sa
mhadainn.



Cairteal an dèidh
aon uair deug sa
mhadainn.



Còig mionaidean
air fhichead gu
uair feasgar.


2 Innis mu aon rud a bhios **tusa** a dèanamh:


eadar 7.00 m. agus 9.00 m.


eadar 6.15 f. agus 8.00 f.


Ainm:


Sgrìobh an h-uairean seo. Cleachd m. no f.

























Ainm:

1 Crìochnaich an clàr-sràc.

Suim

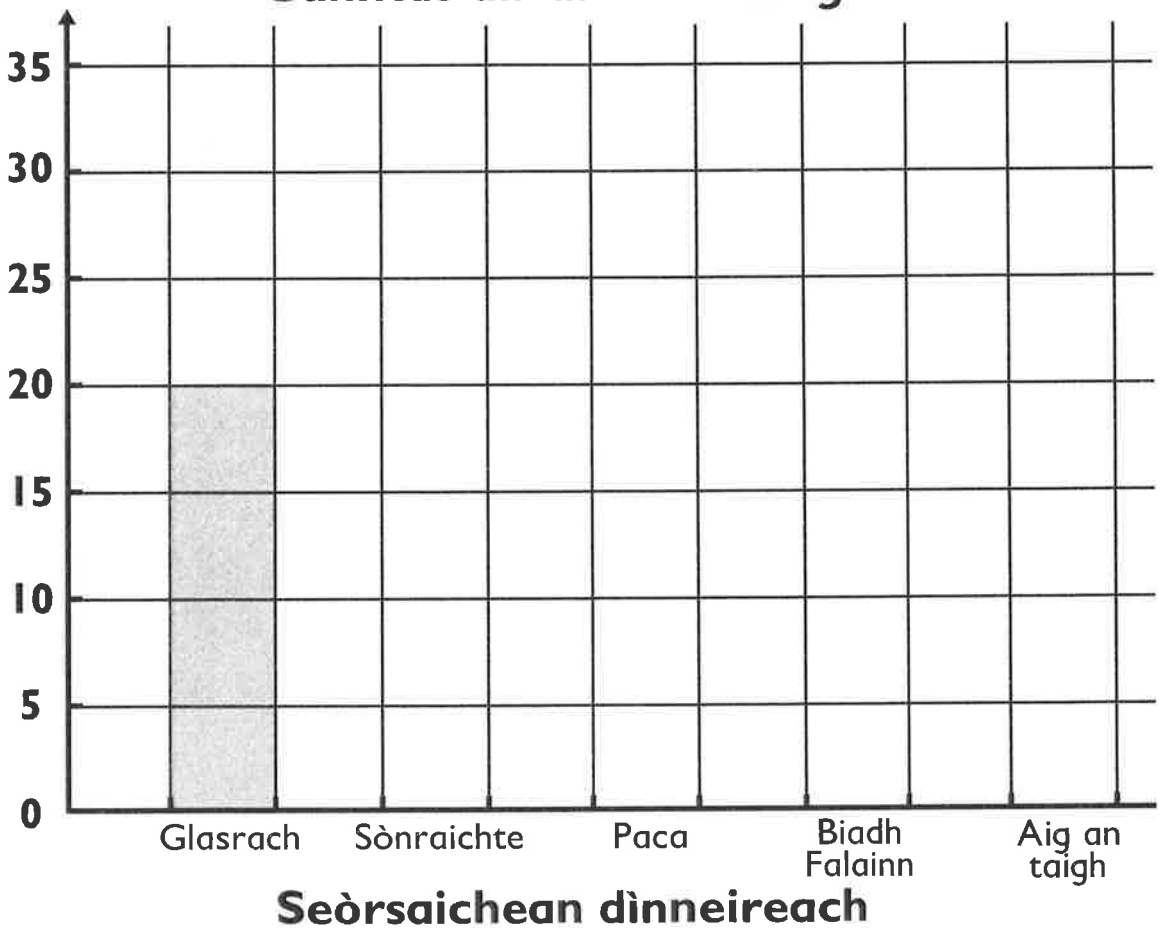
Glasrach		20
Sònraichte		
Paca		
Biadh Falainn		
Aig an taigh		

Cunntas air dinnearan sgoile

2 Crìochnaich an clàr-colbh.

Cunntas air dinnearan sgoile

An Àireamh Chloinne



Ainm:

1 Crìochnaich an clàr-sràc.

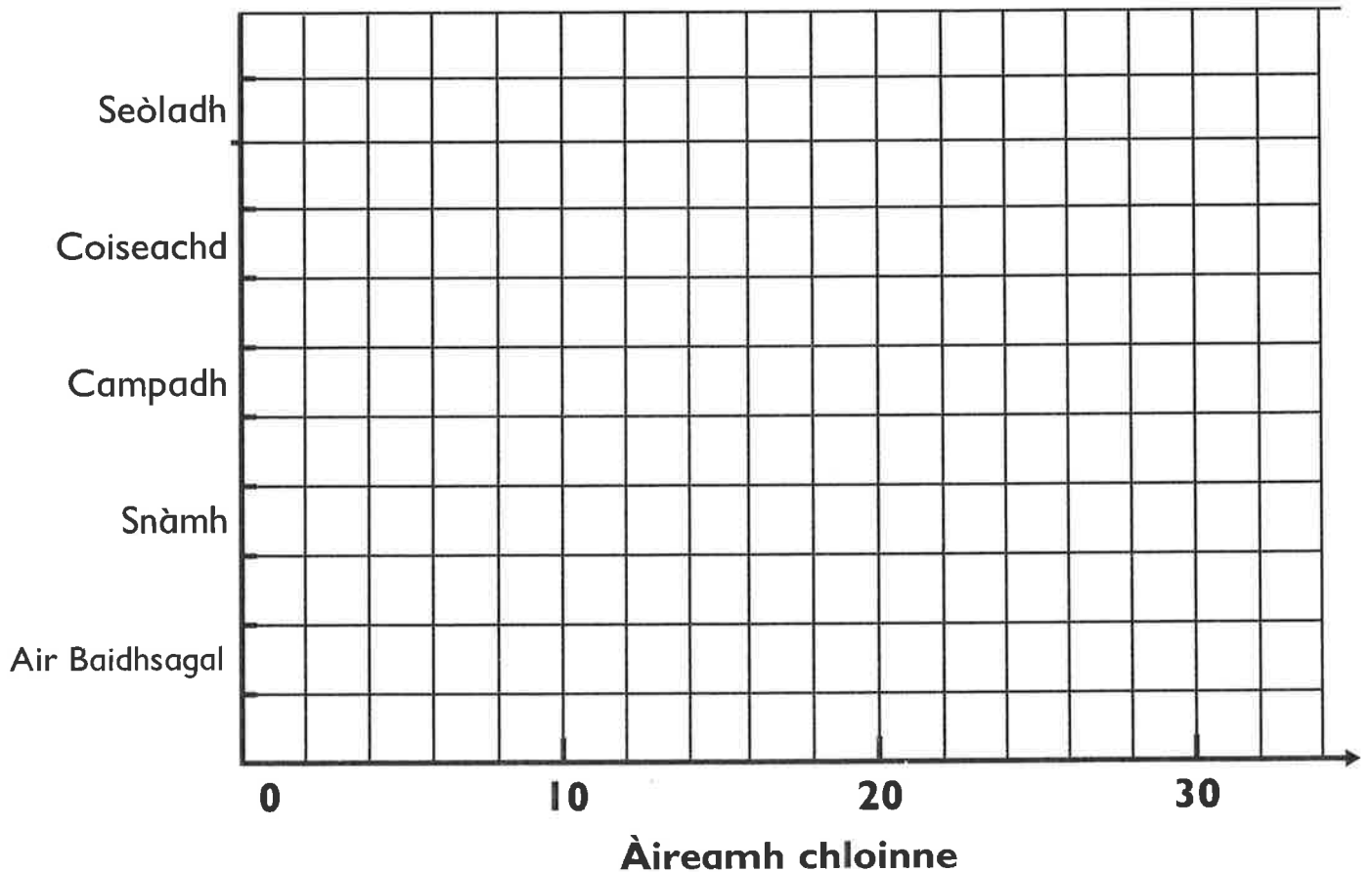
Suim

Cur-seachadan nan làithean-saora

Seòladh	###	
Coiseachd	### ### ### ###	
Campadh	### ### ###	
Snàmh	### ### ### ### ### ###	
Baidhsagalan	### ### ###	

2 Crìochnaich an clàr-colbh

Cur-seachadan nan làithean-saora

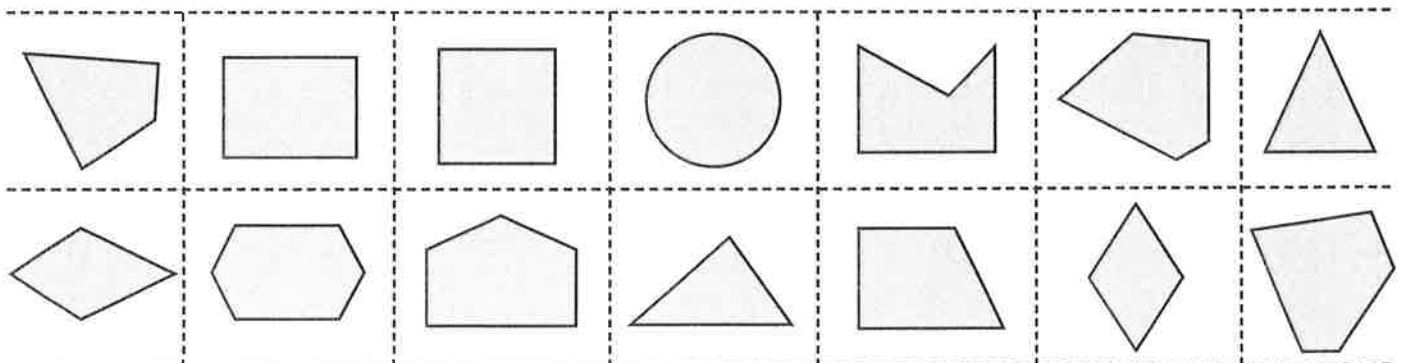


Ainm:

Geàrr a-mach na cruthan aig bonn na duilleig seo.
Steig iad air an diagram Carroll.

	Le co-dhiù aon loidhne cothromachaidh	Le co-dhiù aon loidhne cothromachaidh
4 taobhan		
4 taobhan		

A' làimhseachadh dàta • Diagraman Carroll



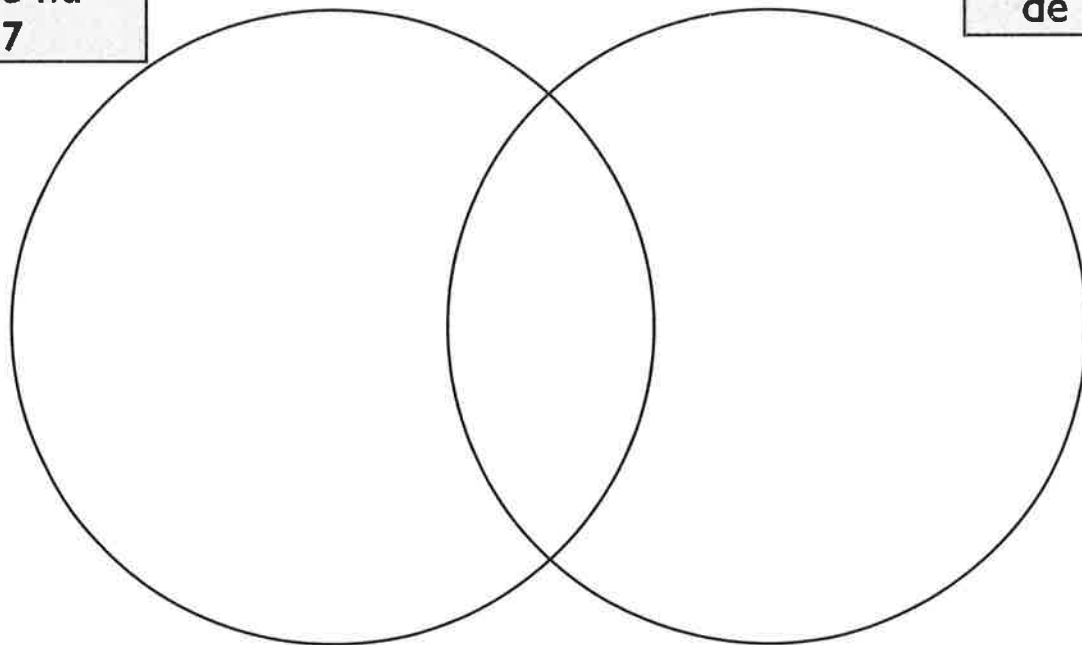
Ainm:

1 Sgrìobh na h-àireamhan seo anns an diagram Venn.

21 5 30 33 25 45 49 15 35 28

Àireamhan
corra nas
àirde na
17

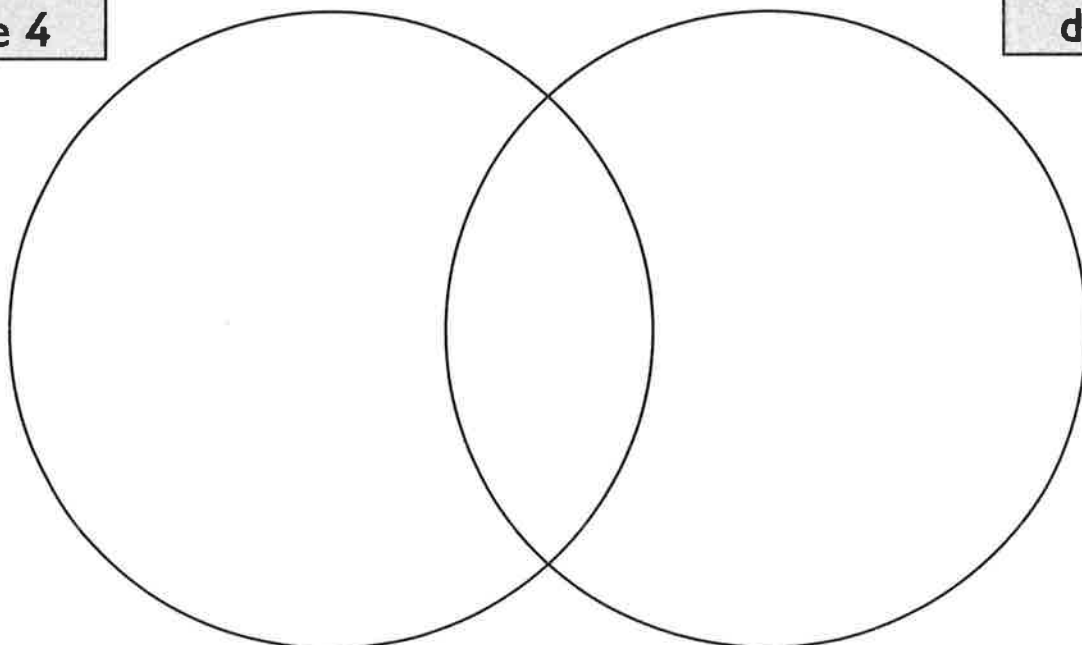
Iomadan
de 5



2 Sgrìobh trì àireamhan eadar 10 agus 50 anns gach pàirt den diagram Venn seo.

Iomadan
de 4

Iomadan
de 6



Ainm:

