



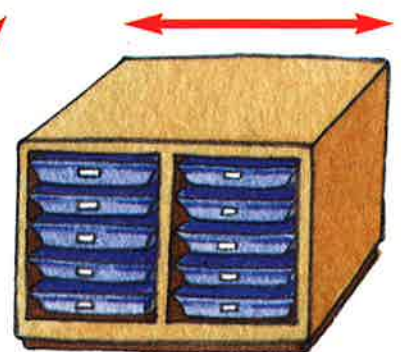
Cleachd maide meatair.  
Tomhais, agus an uair sin maids.



nas giorra na  
l mheatair

mu  
l mheatair

nas fhaide na  
l mheatair




Cleachd



Dèan



mu mheatair a dh'fhaid.



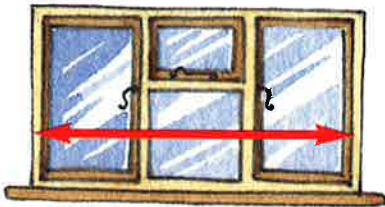
I mheatair | I mheatair | I mheatair | I mheatair | I mheatair

Tha an siorc mu 5 meatairean a dh'fhaid.



Cleachd maidean meatair.

Dèan tuairmse air an fhaid, agus an uair sin tomhais e.




Tuairmse

mu \_\_\_\_\_ meatairean

Tomhas

mu \_\_\_\_\_ meatairean



Tuairmse

mu \_\_\_\_\_ meatairean

Tomhas

mu \_\_\_\_\_ meatairean




Tuairmse

mu \_\_\_\_\_ meatairean

Tomhas

mu \_\_\_\_\_ meatairean



Tuairmse

mu \_\_\_\_\_ meatairean

Tomhas

mu \_\_\_\_\_ meatairean







mu \_\_\_\_\_ ceudameatairean







Cleachd rùilear. Tomhais.

a  \_\_\_\_\_ mu \_\_\_\_\_ ceudameatairean

a  \_\_\_\_\_ mu \_\_\_\_\_ ceudameatairean

a  \_\_\_\_\_ mu \_\_\_\_\_ ceudameatairean

Dèan tuairmse, agus an uair sin tomhais do làimhe.

	Tuairmse	Tomhas
	mu _____ ceudameatairean	mu _____ ceudameatairean
	mu _____ ceudameatairean	mu _____ ceudameatairean
	mu _____ ceudameatairean	mu _____ ceudameatairean
	mu _____ ceudameatairean	mu _____ ceudameatairean

Lorg rudeigin a tha mu 14 ceudameatairean a dh'fhaid.

Dèan tuairmse air, agus an uair sin tomhais.



### Tuairmse

mu \_\_\_\_\_ ceudameatairean



mu \_\_\_\_\_ ceudameatairean



mu \_\_\_\_\_ ceudameatairean



mu \_\_\_\_\_ ceudameatairean



mu \_\_\_\_\_ ceudameatairean



mu \_\_\_\_\_ ceudameatairean



### Tomhas

mu \_\_\_\_\_ ceudameatairean

mu \_\_\_\_\_ ceudameatairean

mu \_\_\_\_\_ ceudameatairean


mu \_\_\_\_\_ ceudameatairean

mu \_\_\_\_\_ ceudameatairean

mu \_\_\_\_\_ ceudameatairean

Dealbh boiteag a tha mu 9 ceudameatairean a dh'fhaid.





Tha mu 6 ciùban a chuideam anns a' bhruis.

Cothromaich.



mu \_\_\_\_\_ ciùban



mu \_\_\_\_\_ ciùban



mu \_\_\_\_\_ ciùban



mu \_\_\_\_\_ ciùban

Cuir ✓ air an fhear as truime.

Cuir ✗ air an fhear as aotruime.

Cuir ✓ air an fhear as truime.

Cuir ✗ air an fhear as aotruime.



Cia mheud ciùb a bharrachd? \_\_\_\_\_



Cia mheud nas lugha? \_\_\_\_\_ ciùban

Cleachd  . Maids iad seo.



nas truime na 1 chileagram



nas aotruime na 1 chileagram



mu 1 chileagram



Cleachd  . Maids iad seo.



nas truime na  $\frac{1}{2}$  cileagram



nas aotruime na  $\frac{1}{2}$  cileagram




mu  $\frac{1}{2}$  cileagram



Lorg agus dèan dealbh de rudeigin anns a bheil cuideam:

mu 1 chileagram

mu  $\frac{1}{2}$  cileagram



Tha cuideam mu thimcheall 2 chileagram anns a' bhreige.

Cleachd . Cothromaich iad ann an cileagraman.




mu \_\_\_\_\_ cg



mu \_\_\_\_\_ cg



mu \_\_\_\_\_ cg



mu \_\_\_\_\_ cg


Cothromaich

- 1 cg de ghainmheach
- $\frac{1}{2}$  cg de dh'uisge.





Cleachd  agus  .  
Dòirt agus maids.



nas lugha na liotair






timcheall air liotair



barrachd air liotair



Dèan tuairmse orra seo, agus an uair sin tomhais iad ann an liotairean.

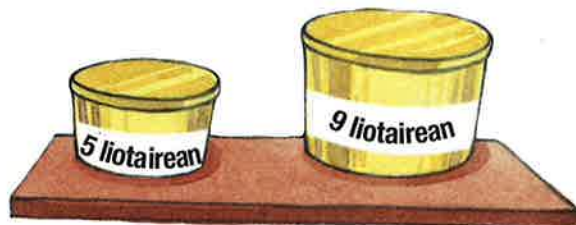
	Tuairmse	Tomhas
	mu _____ liotairean	mu _____ liotairean
	mu _____ liotairean	mu _____ liotairean
	mu _____ liotairean	mu _____ liotairean



Cia mheud liotair a tha ann gu lèir?



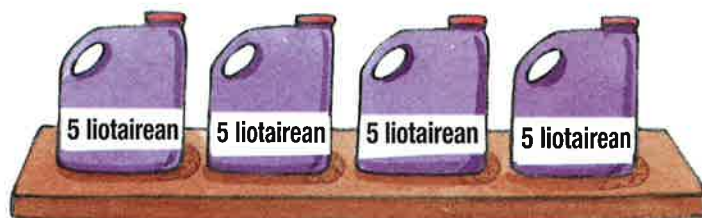
\_\_\_\_\_ liotairean



\_\_\_\_\_ liotairean



\_\_\_\_\_ liotairean



\_\_\_\_\_ liotairean

Dè na liotairean a ghabhas



a bharrachd air



\_\_\_\_\_ liotairean a bharrachd



a bharrachd air



\_\_\_\_\_ liotairean a bharrachd

16 liotairean gu lèir.

Cia mheud liotair tha ann an seo?



Cia mheud



a gheibh thu à



?

Muids.



cairteal an dèidh 2



cairteal an dèidh 8


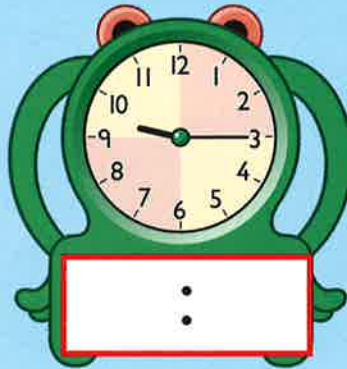
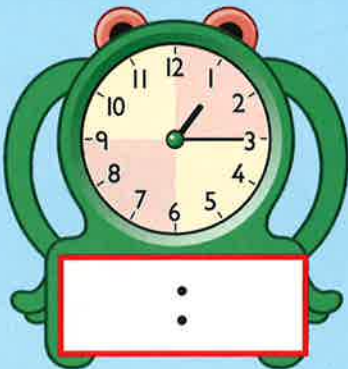


cairteal an dèidh 12

cairteal an dèidh 10



Sgrìobh gach uair.



Cuir dathan orra seo airson am maidseadh.



cairteal an dèidh 11



cairteal an dèidh 6



cairteal an dèidh 3





Crìochnaich.



cairteal gu \_\_\_\_\_



cairteal gu \_\_\_\_\_



cairteal gu \_\_\_\_\_



cairteal gu \_\_\_\_\_



cairteal gu \_\_\_\_\_



cairteal gu \_\_\_\_\_

Muids.



cairteal gu 11



cairteal gu 3



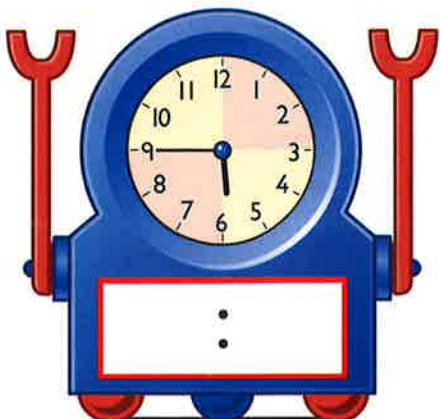


cairteal gu 5



cairteal gu 1

Sgrìobh gach uair.



Maids.

2:00

leth-uair  
an dèidh 1

7:15

cairteal gu 11



1:30

cairteal an dèidh 7

2 uair

10:45

Sgrìobh gach uair.



:



leth-uair an dèidh \_\_\_\_\_

leth-uair  
an dèidh \_\_\_\_\_

\_\_\_\_\_ uairean

cairteal gu 6

:


cairteal an dèidh 5



:




Campa na Tràghad. ☺


Dè an ùine?



An toiseach  A' chrìoch


 




\_\_\_\_\_ mionaid



An toiseach  A' chrìoch


 




\_\_\_\_\_ uair a thìde



An toiseach  A' chrìoch


 




\_\_\_\_\_ mionaid



An toiseach  A' chrìoch


 




\_\_\_\_\_ mionaidean



A-steach  A-mach


 



\_\_\_\_\_ uairean a thìde

A-steach  A-mach


 



\_\_\_\_\_ mionaidean



## Maids.



cruinne




ciùbaid



pioramaid



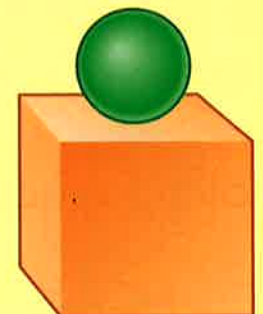
còn



siolandair




pioramaid agus siolandair



ciùbaid agus pioramaid



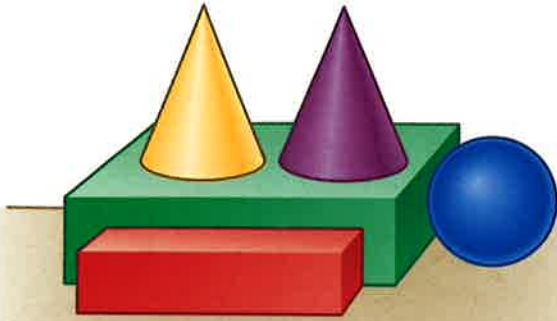
siolandair agus còn



ciùb agus cruinne



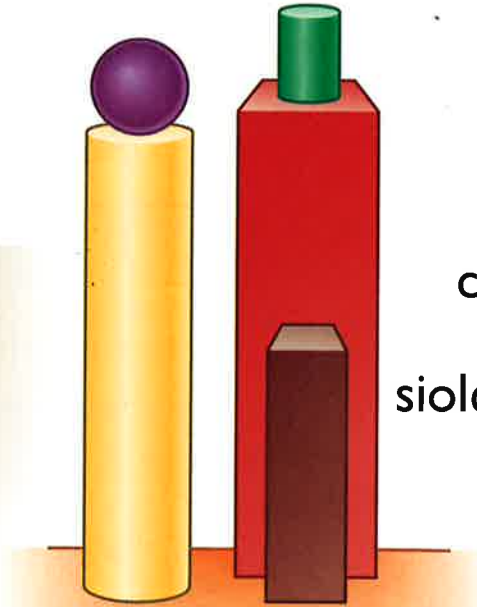
Cia mhead a tha ann?



ciùbaidean \_\_\_\_\_

cruinnean \_\_\_\_\_

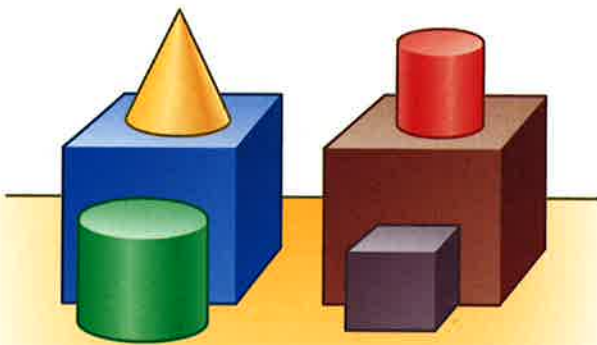
cònaichean \_\_\_\_\_



cruinnean \_\_\_\_\_

ciùbaidean \_\_\_\_\_

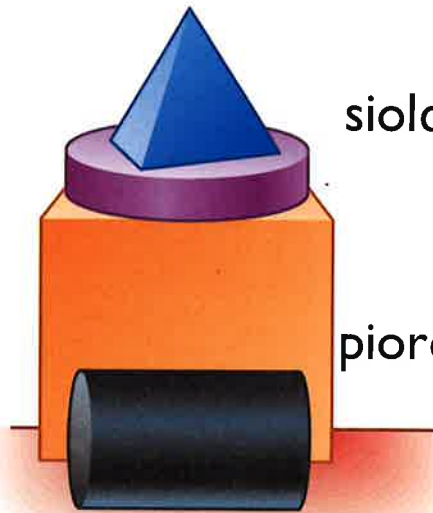
siolandairean \_\_\_\_\_



ciùban \_\_\_\_\_

cònaichean \_\_\_\_\_

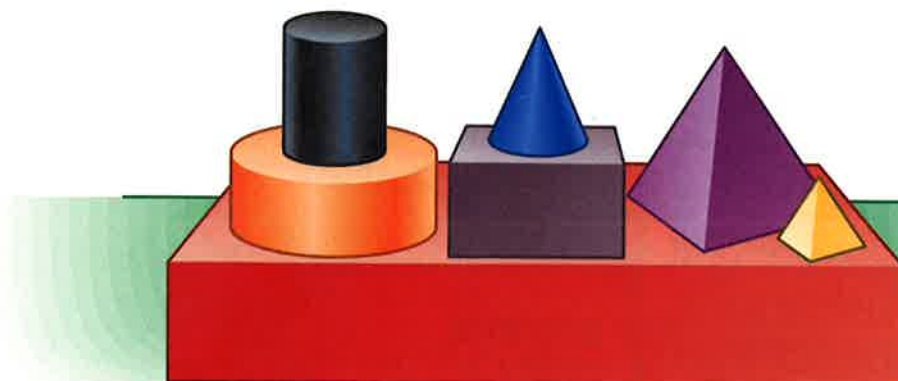
siolandairean \_\_\_\_\_



siolandairean \_\_\_\_\_

ciùban \_\_\_\_\_

pioramaidean \_\_\_\_\_



cònaichean \_\_\_\_\_

pioramaidean \_\_\_\_\_

siolandairean \_\_\_\_\_


ciùbaidean \_\_\_\_\_

Cia mheud a tha ann?



\_\_\_ aodainn

\_\_\_ oirean



\_\_\_ aodainn

\_\_\_ oirean



\_\_\_ aodainn

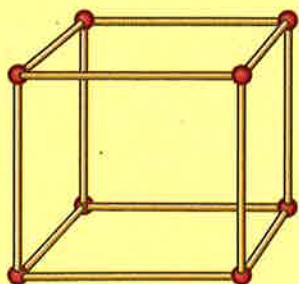
\_\_\_ oirean



\_\_\_ aodainn

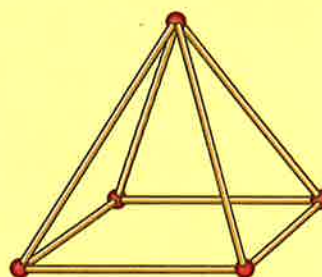
\_\_\_ oirean

Cia mheud a tha ann?



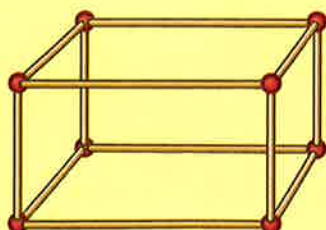
\_\_\_ oiseanan

\_\_\_ oirean




\_\_\_ oiseanan

\_\_\_ oirean




\_\_\_ oiseanan

\_\_\_ oirean





Cuir dath:





Còig-cheàrnach





sia-cheàrnach



ochd-cheàrnach



Maids.



ceàrnag

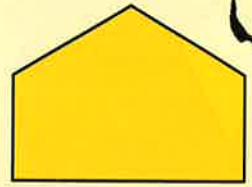


ochd-cheàrnach

triantan

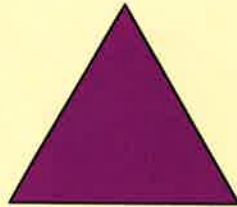

còig-cheàrnach

ceart-cheàrnach

còig-cheàrnach



Crìochnaich iad seo.



taobhan \_\_\_\_\_



taobhan \_\_\_\_\_

taobhan \_\_\_\_\_

oiseanan \_\_\_\_\_

oiseanan \_\_\_\_\_

oiseanan \_\_\_\_\_



taobhan \_\_\_\_\_

taobhan \_\_\_\_\_

taobhan \_\_\_\_\_

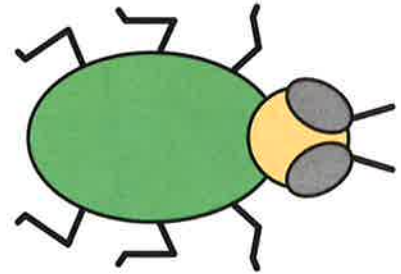

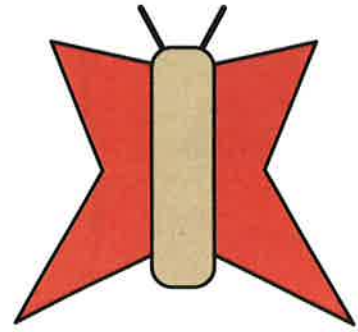
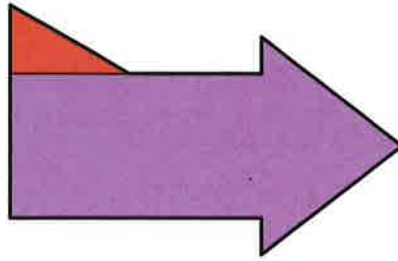
oiseanan \_\_\_\_\_

oiseanan \_\_\_\_\_






oiseanan \_\_\_\_\_









Cuir ✓ air na dealbhan a tha cothromaichte.




Dèan dealbh den loidhne chothromachaidh.




3						
2						
1						
	A	B	C	D	E	F

Dèan dealbh den rud a tha aig:


D2



A1




B3





Dealbh  aig **F1** agus  aig **B2**.

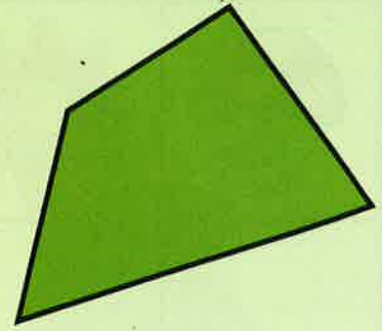
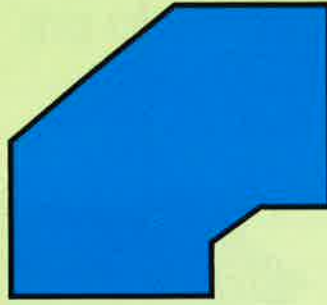

Sgrìobh suidheachadh:



Dealbh gach rud a tha air a' chliath, agus sgrìobh a shuidheachadh.

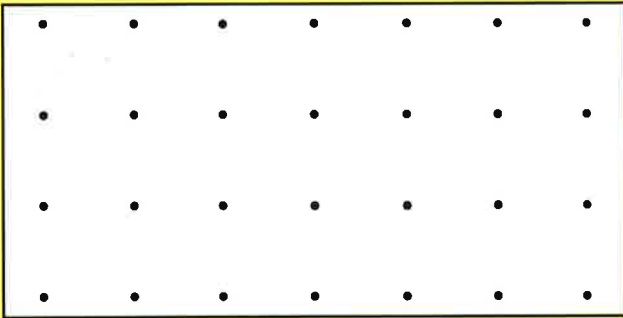







Cia mheud ceàrn ceart a tha anns a'  
chumadh dhearg \_\_\_\_\_ chumadh ghorm \_\_\_\_\_ chumadh uaine? \_\_\_\_\_

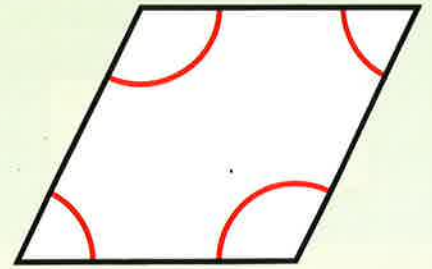
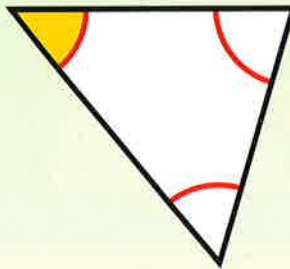
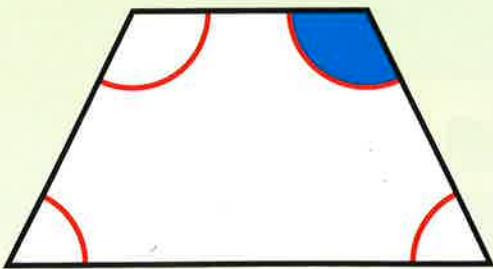
Dealbh cumadh le **3**  
ceàrnan cearta **a-mhàin**.



Dealbh cumadh **gun**  
cheàrnan cearta idir.

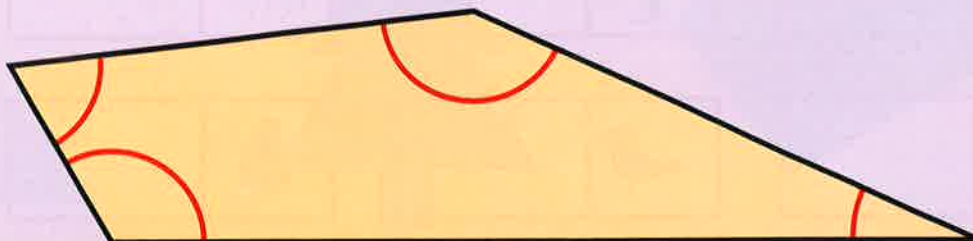


Cuir dath gorm air ceàrnan a tha **nas motha** na ceàrn ceart.  
Cuir dath buidhe air ceàrnan a tha **nas lugha** na ceàrn ceart.



Cuir ✓ air a' cheàrn as motha.

Cuir ✗ air a' cheàrn as lugha.



Dealbh slighean nan tursan seo.  
Sgrìobh far a bheil gach bàta a' crìochnachadh.  
(A=air adhart, D=deas, C=clì)



A4, D, A1

A' crìochnachadh aig \_\_\_\_\_



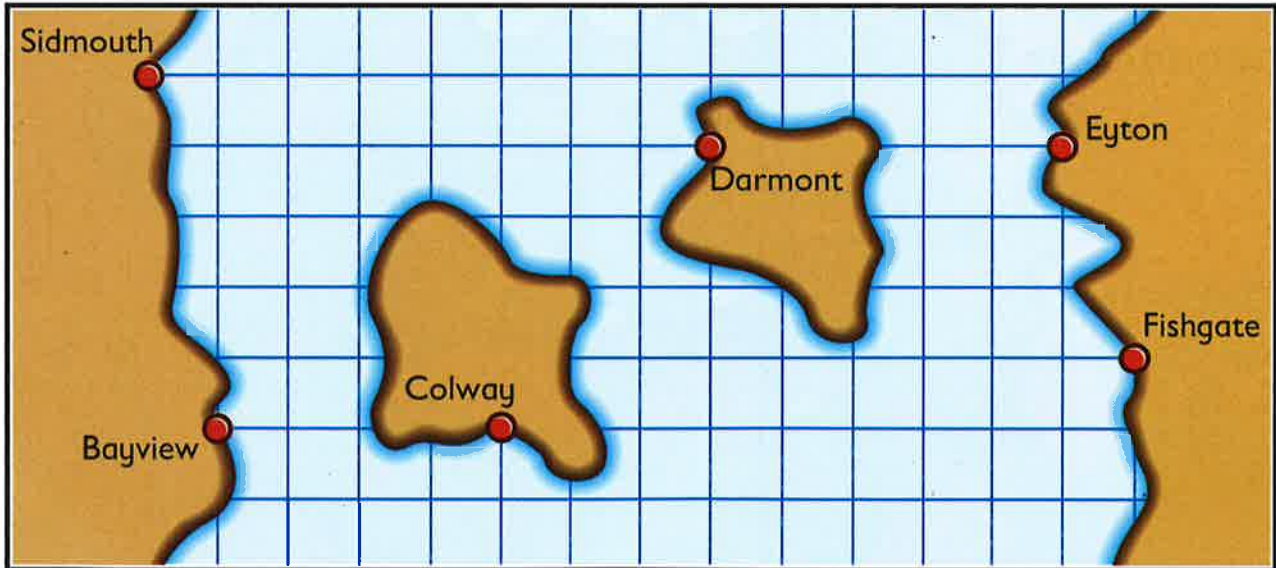
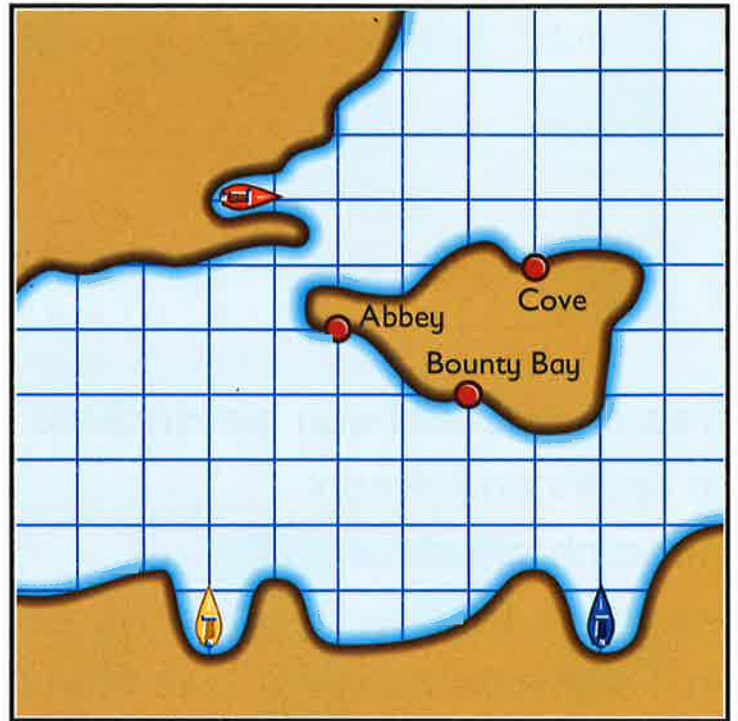
A3, D, A2, C, A1

A' crìochnachadh aig \_\_\_\_\_



A1, C, A2, D, A2

A' crìochnachadh aig \_\_\_\_\_



Dealbh, agus an uair sin sgrìobh an cùrsa airson turas bho:

Bayview gu Darmont

\_\_\_\_\_

Fishgate gu Sidmouth

\_\_\_\_\_

Eyton gu Colway.

\_\_\_\_\_



Cunnt na bhòtaichean airson nan cleasachdan a b' fheàrr le Clas 3.

Cleachd duilleag nan ✓ Suim

Bàtaichean Thaibhsean		
Sruthan na h-Aibhne		
An Lùib Fhiadhaich		

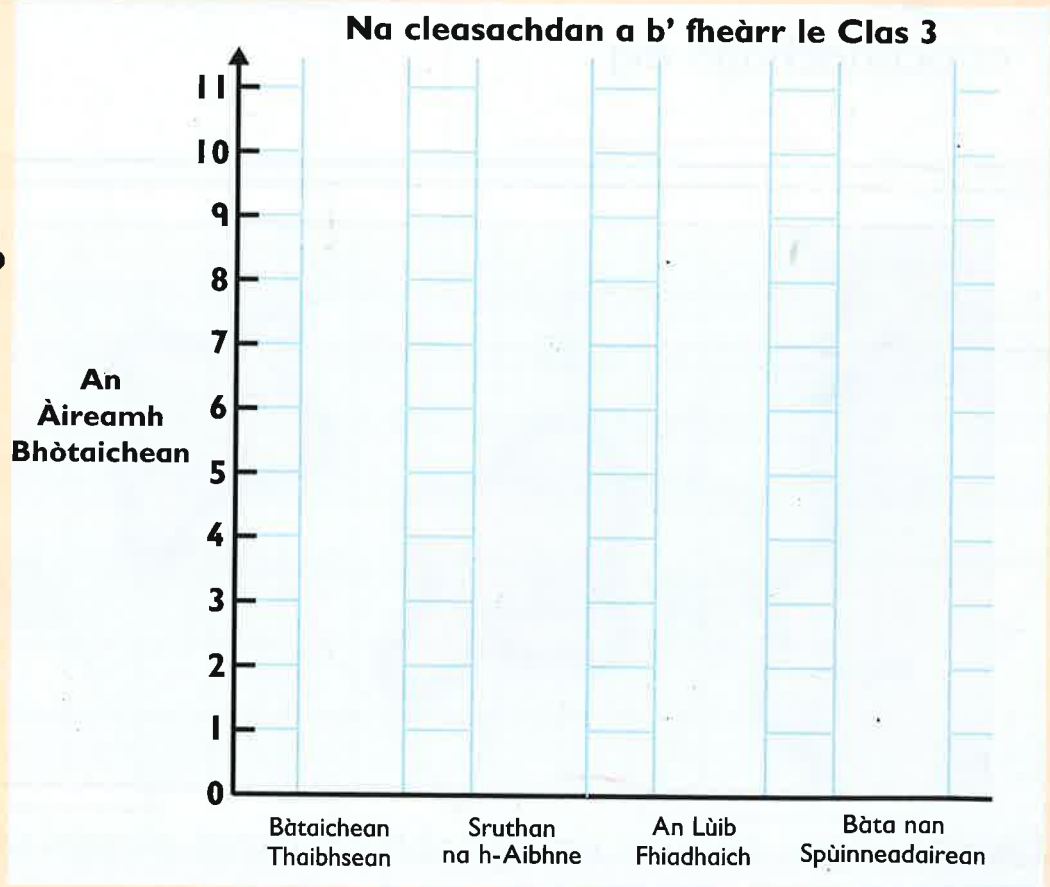


Àireamh bhòtaichean airson Bàta nan Spùinneadairean:

- àireamh chothromach
- eadar na h-àireamhan airson Bàtaichean nan Taibhsean agus An Lùib Fhiadhaich.

Cia mheud leanabh a bhòt airson Bàta nan Spùinneadairean?

Crìochnaich an clàr-colbh.



Tha 32 leanabh ann an Clas 3. Cia mheud nach do bhòt? \_\_\_\_\_