




M H A


2

Matamataig Heinemann Alba

Cur-ris agus Toirt-air-Falbh gu 20



Ainm _____



Maids.

$7 + 1$

$5 + 2$

$3 + 5$

$5 + 5$




$3 + 6$

$7 + 0$


$1 + 9$

$2 + 7$

Cia mhead uile-gu-lèir?





$4 + 3 =$




$7 + 2 =$ <input type="text"/>	5 cuir-ris 1 = <input type="text"/>	3 agus 7 = <input type="text"/>
6 agus 3 = <input type="text"/>	$0 + 7 =$ <input type="text"/>	2 cuir-ris 6 = <input type="text"/>
5 cuir-ris 3 = <input type="text"/>	4 agus 6 = <input type="text"/>	$8 + 2 =$ <input type="text"/>

Cuir dath air 3 
gus 10 a dhèanamh.



Cuir dath air 3 
gus 9 a dhèanamh.



$3 + \square = 5$

$\square + 1 = 10$

$8 + \square = 9$

$\square + 5 = 7$

$6 + \square = 6$

$\square + 4 = 6$



$$10 + 3 = \underline{\quad}$$

$$3 + 10 = \underline{\quad}$$



$$\underline{\quad} + \underline{\quad} = \underline{\quad}$$

$$\underline{\quad} + \underline{\quad} = \underline{\quad}$$

$$10 + 6 = \square$$

$$10 + 4 = \square$$

$$5 + 10 = \square$$

$$10 + 9 = \square$$

$$6 + 10 = \square$$

$$10 + 5 = \square$$

$$1 + 10 = \square$$

$$9 + 10 = \square$$

$$10 + \square = 12$$

$$10 + \square = 17$$

$$\square + 10 = 14$$

$$\square + 10 = 20$$



$$16 \longrightarrow \square$$

$$13 \longrightarrow \square$$

$$19 \longrightarrow \square$$




$$14 \longrightarrow \square$$

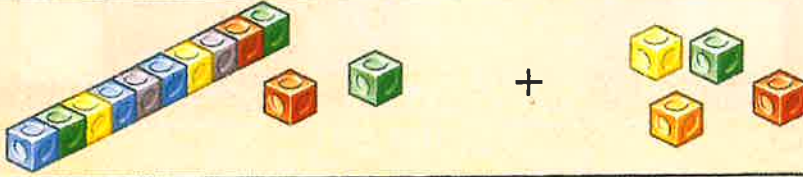
$$11 \longrightarrow \square$$

$$18 \longrightarrow \square$$

Cleachd ciùban.



$14 + 3 =$



$12 + 4 =$

$14 + 4 =$

$16 + 3 =$

$11 + 4 =$

$15 + 5 =$

$2 + 17 =$

$12 + 6 =$



$4 + 5 =$

$14 + 5 =$

$2 + 7 =$

$12 + 7 =$



$13 + 2 =$

$17 + 1 =$

$13 + 6 =$

$8 + 11 =$

$18 + 0 =$

$12 + 8 =$

$11 + 3 =$

$4 + 15 =$



$12 + 5 =$

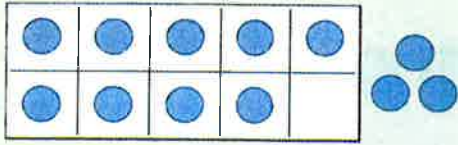
$0 + 16 =$

$11 + 9 =$

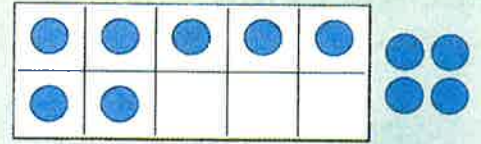
$5 + 13 =$

Maidis gus 17 a dhèanamh.





$$9 + 3 = \square$$



$$7 + 4 = \square$$

$$9 + 5 = \square$$

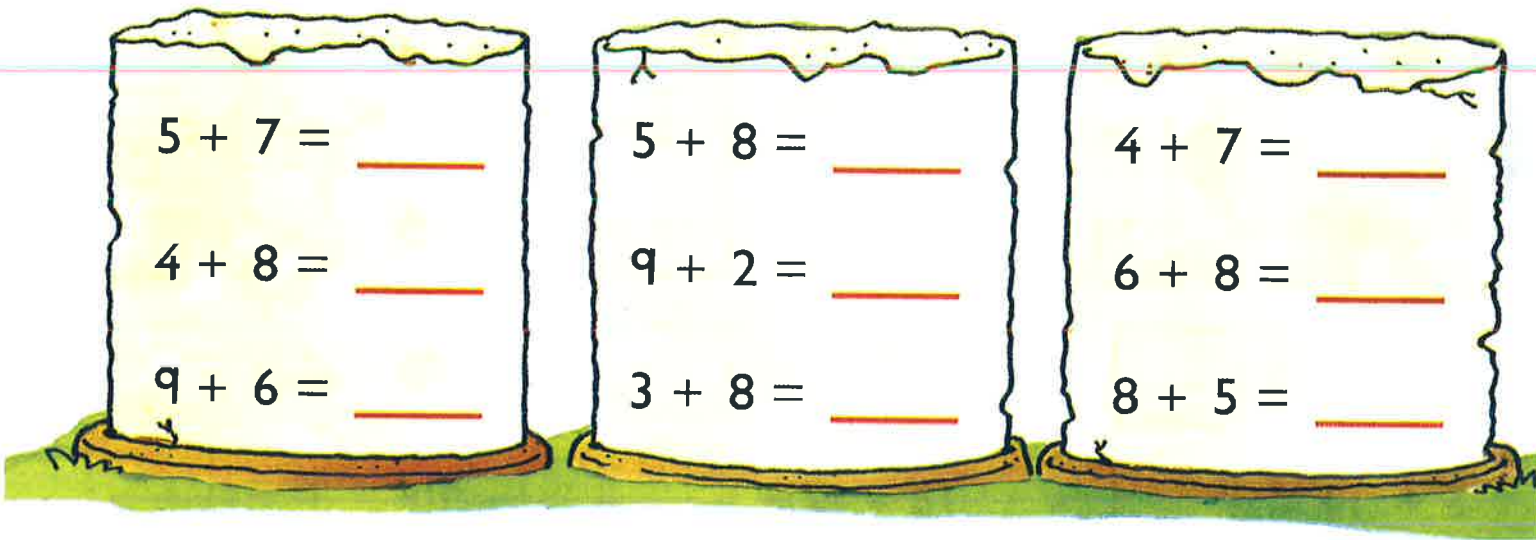
$$8 + 6 = \square$$

$$9 + 4 = \square$$

$$8 + 4 = \square$$

$$7 + 5 = \square$$

$$8 + 3 = \square$$



Cuir-ris 9.

2

5

7

8

3

6

4

11

$5 + 5 =$

$5 + 6 =$

$6 + 5 =$

$6 + 6 =$

$6 + 7 =$

$7 + 6 =$

$7 + 7 =$

$7 + 8 =$

$8 + 7 =$

$8 + 8 =$

$8 + 9 =$

$9 + 8 =$

$9 + 9 =$

$9 + 10 =$

$10 + 9 =$

$10 + 10 =$





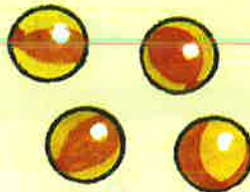

$$9 + 2 =$$

$$2 + 9 =$$



$$+ =$$

$$+ =$$



$$\square + 3 = 11$$

$$\square + 6 = 11$$

$$\square + 4 = 11$$

$$9 + \square = 11$$

$$2 + \square = 11$$

$$3 + \square = 11$$

Cuir dath air dà  gus 11 a dhèanamh.





Cleachd ciùban. Dèan 12.

$8 + \square$

$7 + \square$

$9 + \square$

$5 + \square$

$4 + \square$

$6 + \square$

$3 + \square$

$7 + 5 = \square$

$5 + 6 = \square$

$4 + 8 = \square$

$9 + 3 = \square$

$5 + 7 = \square$

$3 + 9 = \square$


Muids.

$6 + 6$

8 cuir-ris 3

9 agus 3

$8 + 4$



$3 + 9$

4 cuir-ris 8

$4 + 7$

5 agus 7

$9 + \square = 12$

$7 + \square = 12$

$\square + 6 = 12$

Cia mhead?



Cuir-ris.

$$9 + 4 =$$

$$4 + 9 =$$

$$+ =$$

$$+ =$$

$$+ =$$

$$+ =$$

$$5 + 8 = \square$$

$$7 + 5 = \square$$

$$7 + 6 = \square$$

$$9 + 4 = \square$$

$$4 + 9 = \square$$

$$8 + 5 = \square$$



$$6 + \square = 13$$

$$\square + 5 = 13$$

$$9 + \square = 13$$

$$\square + 7 = 13$$



$$7 + 7 =$$



$$9 + 5 =$$

$$+ =$$

Dèan dealbh l  eile .

$$+ =$$

$$+ =$$



$$+ =$$

$$+ =$$

Dèan dealbh l  eile .

$$+ =$$

$$+ =$$

$$5 + 9 = \square$$

$$7 + 7 = \square$$

$$9 + 6 = \square$$

$$8 + 6 = \square$$

$$9 + 4 = \square$$

$$7 + 8 = \square$$

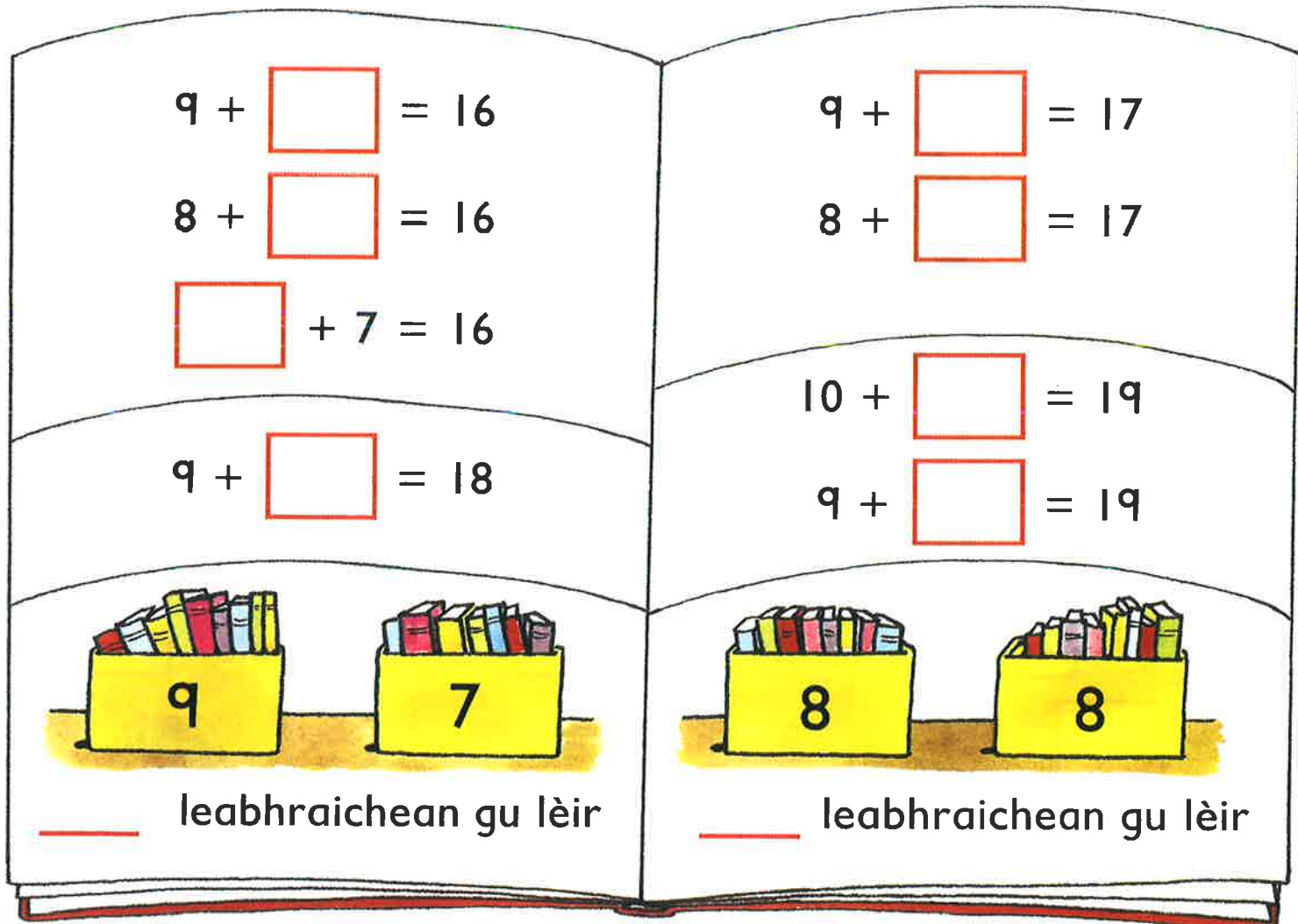
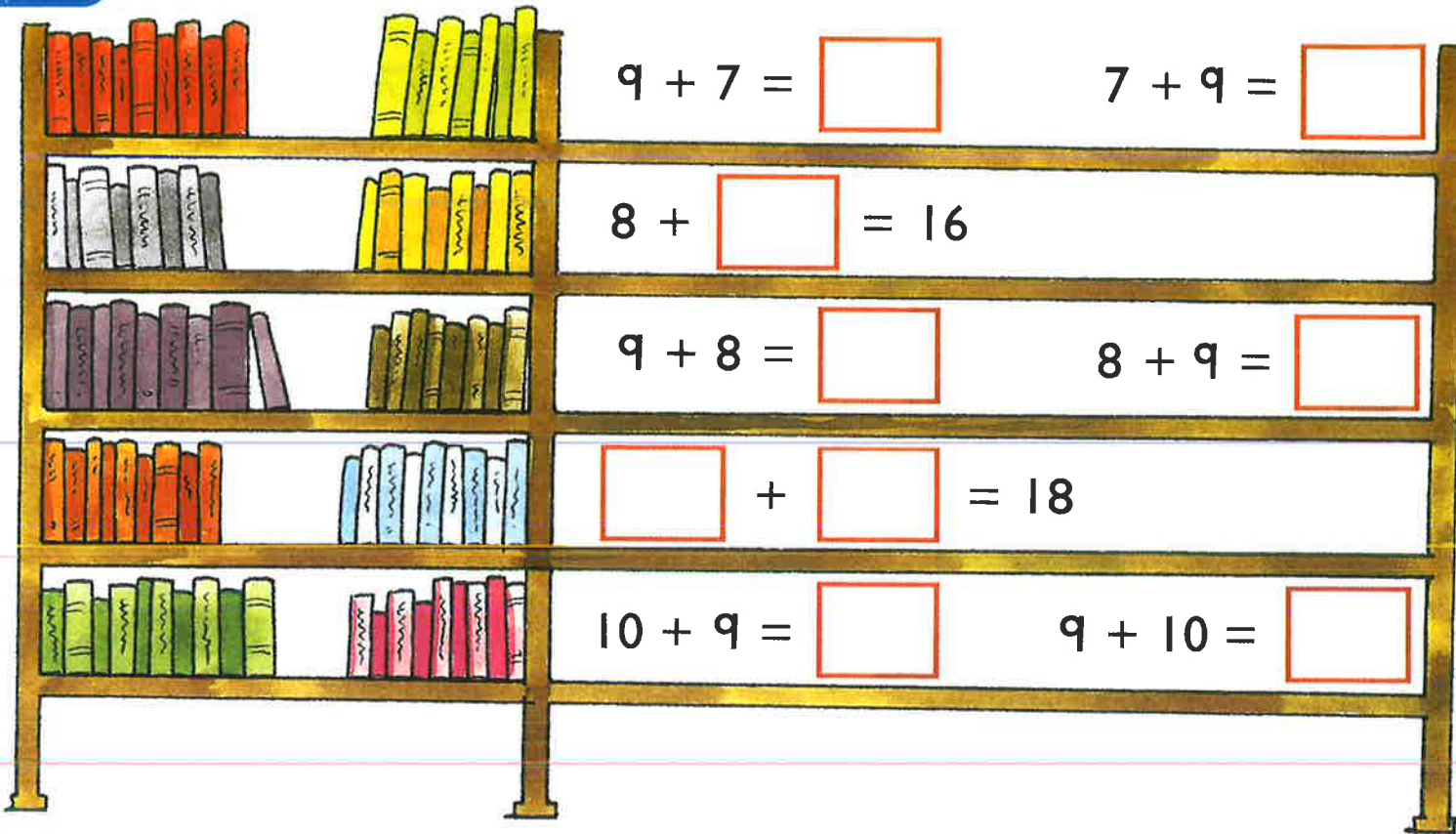
$$9 + \square = 14$$


$$8 + \square = 15$$

$$\square + 9 = 15$$


$$\square + 7 = 14$$







+



= 20



+



= 20



+



= 20

Dèan 20.



+ 10

19 +



+ 5

4 +



+ 9

8 +



+ 13

2 +




+ 3

6 +



20



$6 + 8 = \underline{\quad}$

$9 + 2 = \underline{\quad}$

$8 + 8 = \underline{\quad}$

$9 + 6 = \underline{\quad}$

$5 + 7 = \underline{\quad}$

$3 + 8 = \underline{\quad}$

$4 + 7 = \underline{\quad}$

$3 + 9 = \underline{\quad}$

$9 + 4 = \underline{\quad}$

$6 + 7 = \underline{\quad}$

$7 + 9 = \underline{\quad}$


$8 + 6 = \underline{\quad}$

$8 + \square = 11$

$16 + \square = 20$

$4 + \square = 13$

Cuir dath ■ air dhà.





$$3 + 7 + 5 = \underline{\quad}$$

$$8 + 2 + 7 = \underline{\quad}$$

$$6 + 7 + 4 = \underline{\quad}$$

$$5 + 8 + 3 = \underline{\quad}$$

$$4 + 9 + 3 = \underline{\quad}$$

$$7 + 5 + 7 = \underline{\quad}$$


$$8 + 1 + 9 = \underline{\quad}$$

$$3 + 5 + 6 = \underline{\quad}$$

$$9 + 5 + \square = 16$$

$$4 + \square + 6 = 13$$

Lorg na suimean.



Dèan 20.



Dèan 20.



Tagh trì àireamhan gach turas.
Dèan suimean eadar-dhealaichte.



$$\square + \square = \square$$


$$\square + \square = \square$$

$$\square + \square = \square$$


$$\square + \square = \square$$

Cleachd

Dèan an àireamh a tha air aon chuibhle agus cuir dath air.



Cuir dath  air àireamhan cothromach agus dath  air àireamhan corra.



Dèan 12. Cleachd dà  . _____

Dèan 12. Cleachd dà  . _____

Dèan 14. Cleachd dà  agus aon  . _____



10sg

7sg

5sg

8sg

12sg

4sg

Cia mheud sgillinn?



sg



sg

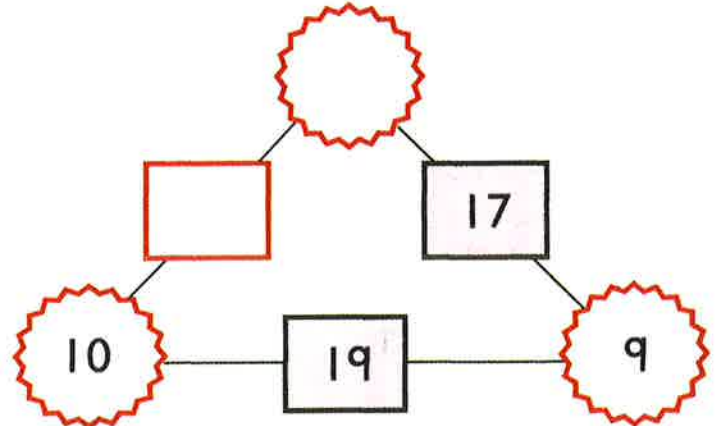
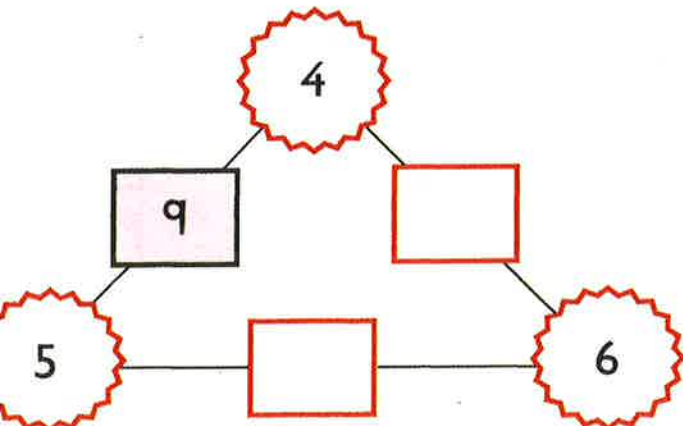


sg

Cosg 19sg. Dèan dealbh de na rudan a cheannaich thu.

Lorg trì dòighean air 15sg a chosg.

Sgrìobh na h-àireamhan a tha a dhìth.



1

$5 + 5 = \square$

$4 + 5 = \square$

$6 + 3 = \square$

$8 + 2 = \square$

$6 + 4 = \square$

$2 + 6 = \square$

$3 + 5 = \square$

$1 + 6 = \square$

$3 + 4 = \square$

2

$10 + 6 = \square$

$10 + 4 = \square$

$7 + 10 = \square$

$10 + \square = 15$

$\square + 10 = 13$

$10 + \square = 18$

$\square + 10 = 20$

3 Lorg gach suim.

$14 + 1 = \square$

$4 + 16 = \square$

$15 + 3 = \square$

$2 + 17 = \square$

$13 + 3 = \square$

$8 + 11 = \square$

$12 + 2 = \square$

$6 + 11 = \square$

$14 + 6 = \square$

4 Cia mheud uile-gu-lèir?

$5 + 8 = \square$

$9 + 4 = \square$

$7 + 5 = \square$

$8 + 3 = \square$

$6 + 7 = \square$

$3 + 9 = \square$

$6 + 5 = \square$

$4 + 8 = \square$

$6 + 6 = \square$

$4 + \square = 13$

$\square + 4 = 11$

$5 + \square = 12$

1 Cia mheud uile-gu-lèir?

$9 \text{ cuir-ris } 9 = \square$

$7 \text{ cuir-ris } 8 = \square$

$5 \text{ cuir-ris } 9 = \square$

$8 \text{ cuir-ris } 6 = \square$

$10 \text{ cuir-ris } 9 = \square$

$8 \text{ cuir-ris } 9 = \square$

$7 \text{ cuir-ris } 9 = \square$

$8 \text{ cuir-ris } 7 = \square$

$9 \text{ cuir-ris } 6 = \square$

$\square + 7 = 14$

$8 + \square = 16$

$9 + \square = 17$

2 Dèan 20.

$10 + \square$

$\square + 8$

$17 + \square$

$\square + \square$

$\square + \square$

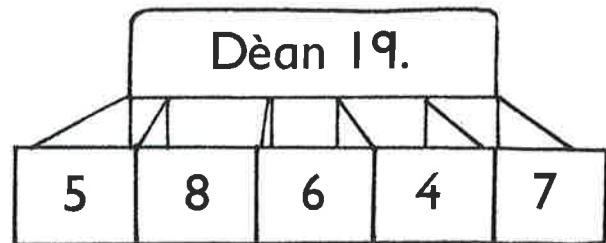
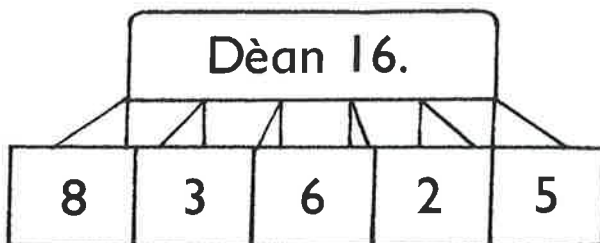
$\square + \square$

3 Lorg gach suim.


$3 + 7 + 5 = \square$

$6 + 7 + 4 = \square$

Cuir dath air trì àireamhan gach turas.



Maidis le dathan.



Maidis.

6 thoir-air-falbh 3

5 thoir-air-falbh 4

6 nas lugha na 7



6 thoir-air-falbh 4

5 nas lugha na 7

7 thoir-air-falbh 3

$$3 - 1 = \square$$

$$4 - 3 = \square$$

$$5 - 5 = \square$$

$$6 - 0 = \square$$

$$6 - 5 = \square$$

$$5 - 3 = \square$$

$$7 - 7 = \square$$

$$3 - 0 = \square$$

$$7 - 4 = \square$$

$$\square - 1 = 4$$

$$\square - 2 = 5$$

$$\square - 4 = 0$$



6 a' tuiteam.

$$\square - 6 = \square$$

3 a' tuiteam.

$$\square - \square = \square$$

Maids agus cuir dath.

9 thoir-air-falbh 2

8 thoir-air-falbh 4

Thoir 10 bho 10.


An diofar
eadar
10 agus 5.

10 thoir-air-falbh 8

Thoir 8 bho 9.

3 nas lugha na 9

An diofar
eadar
5 agus 8.

Cia mheud  a bharrachd air  ?

$$\square - \square = \square$$

 a bharrachd air  ?

$$\square - \square = \square$$

$$10 - 2 = \square$$

$$8 - 1 = \square$$

$$10 - 0 = \square$$

$$8 - 7 = \square$$

$$9 - 0 = \square$$

$$8 - 8 = \square$$

$$9 - \square = 4$$

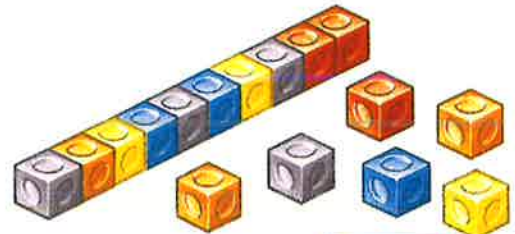
$$10 - \square = 6$$

$$\square - \square = 3$$

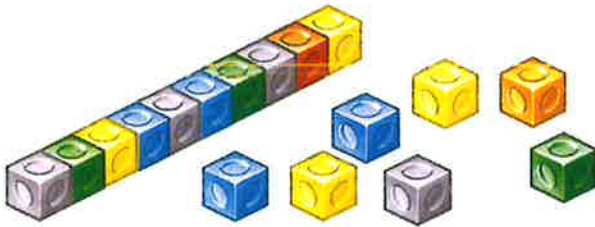
Cleachd ciùban.



$$19 - 3 = \square$$



$$16 - 4 = \square$$



$$17 - 6 = \square$$

$$18 - 7 = \underline{\hspace{2cm}}$$

$$17 - 4 = \underline{\hspace{2cm}}$$

$$19 - 8 = \underline{\hspace{2cm}}$$

$$4 - 3 =$$

$$14 - 3 =$$

$$9 - 2 =$$

$$19 - 2 =$$

$$7 - 5 =$$

$$17 - 5 =$$

$$19 - 4 = \underline{\hspace{2cm}}$$

$$17 - 3 = \underline{\hspace{2cm}}$$

$$18 - 6 = \underline{\hspace{2cm}}$$

$$14 - 2 = \underline{\hspace{2cm}}$$

$$19 - 7 = \underline{\hspace{2cm}}$$

$$15 - 0 = \underline{\hspace{2cm}}$$

$$18 - 3 = \underline{\hspace{2cm}}$$

$$12 - 2 = \underline{\hspace{2cm}}$$

$$15 - 4 = \underline{\hspace{2cm}}$$

Dèan 14.




 $10 - 7 =$

$20 - 7 =$

$10 - 9 =$

$20 - 9 =$

$10 - 4 =$

$20 - 4 =$

$20 - 2 =$

$20 - 8 =$

$20 - 1 =$

$20 - 10 =$

$20 - 3 =$

$20 - 6 =$

thoir-air-falbh 3



thoir-air-falbh 5



$14 - 1 =$

$17 - 2 =$

$19 - 6 =$

$15 - = 13$


$20 - = 20$

$18 - = 16$

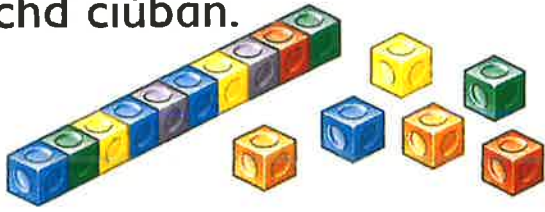
$- 1 = 16$

$- 4 = 10$

$- 2 = 11$



Cleachd ciùban.



$$16 - 11 = \square$$



$$19 - 13 = \square$$

$$18 - 15 = \square$$

$$15 - 13 = \square$$

$$17 - 12 = \square$$

$$16 - \square = 3$$

$$15 - \square = 0$$

$$12 - \square = 1$$

$$4 - 1 =$$

$$14 - 11 =$$

$$9 - 7 =$$

$$19 - 17 =$$

$$8 - 3 =$$

$$18 - 13 =$$

$$15 - 12 = \square$$

$$13 - 11 = \square$$

$$17 - 13 = \square$$

$$19 - 14 = \square$$

$$16 - 16 = \square$$

$$18 - 14 = \square$$

$$16 - 12 = \square$$

$$18 - 12 = \square$$

$$19 - 10 = \square$$

Lorg an diofar eadar

17 agus 14 _____


18 agus 16 _____

14 agus 10 _____


17 agus 15 _____




Cleachd ciùban.




$$15 - 6 =$$



$$13 - 5 =$$



$$17 - 8 =$$



$$16 - 9 =$$

$$14 - 6 = \square$$

$$17 - 9 = \square$$

$$15 - 9 = \square$$

$$11 - 6 = \square$$

$$14 - 7 = \square$$

$$15 - 8 = \square$$

$$12 - 4 = \square$$

$$12 - 7 = \square$$

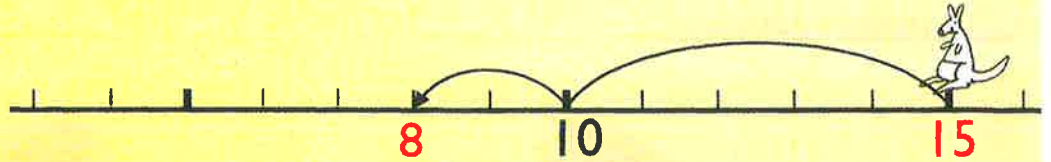
$$13 - 7 = \square$$

$$11 \text{ thoir-air-falbh } 8 = \square$$

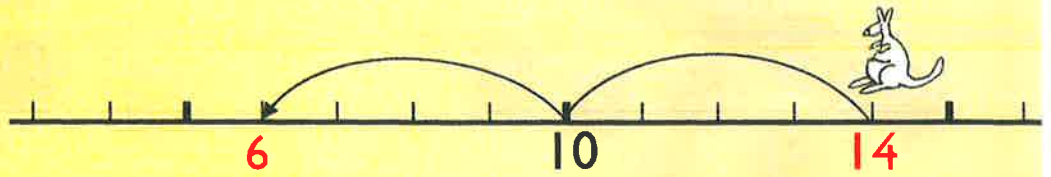
$$12 \text{ thoir-air-falbh } 5 = \square$$

$$\text{Thoir } 6 \text{ bho } 13. \square \text{ Thoir-air-falbh } 9 \text{ bho } 14. \square$$

$15 - 7 = \square$



$14 - 8 = \square$



$13 - 5 = \square$

$16 - 7 = \square$

$14 - 5 = \square$


$16 - 9 = \square$

$15 - 8 = \square$

$13 - 8 = \square$

$12 - 6 = \square$

$14 - 7 = \square$



$16 - 8 = \square$

$18 - 9 = \square$

Maidis agus cuir dath.

$12 - 3$

$12 - 4$

$11 - 5$

$11 - 2$

$11 - 4$

$12 - 5$

$13 - 4$

$11 - 3$



$11 - 8 = \square$

$13 - 9 = \square$

$11 - 7 = \square$

$12 - 9 = \square$

$11 - 9 = \square$

$12 - 8 = \square$

Cia mheud



?

$11 - 2 = \square$

$11 - 3 = \square$

$11 - 4 = \square$

$11 - 5 = \square$

$11 - 6 = \square$

$11 - 7 = \square$

$11 - 8 = \square$

$11 - 9 = \square$

Maids agus cuir dath.

$11 - 4$

11 thoir-air-falbh 2

$11 - 9$

11 thoir-air-falbh 7

$11 - 6$

Thoir 3 bho 11.



$11 - 8 = \square$

$11 - 5 = \square$

$11 - 11 = \square$

$4 \text{ nas lugha na } 11 = \square$

Thoir-air-falbh 9 bho 11. \square


$11 \text{ thoir-air-falbh } 6 = \square$

1 nas lugha na 11 = \square

$11 - \square = 7$

$11 - \square = 9$

$11 - \square = 11$



Cia mheud ad? _____

$12 - 3 = \square$

$12 - 4 = \square$

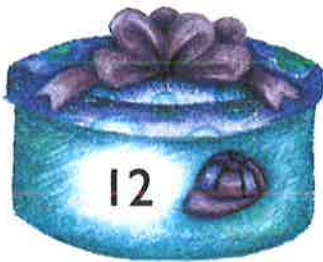
$12 - 6 = \square$

$12 - 8 = \square$

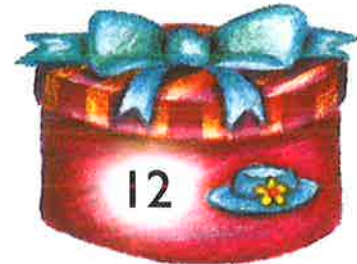
$12 - 5 = \square$

$12 - 7 = \square$

$12 - 9 = \square$



4 air an reic. Cia mheud a tha air fhàgail?



7 air an reic. Cia mheud a tha air fhàgail?

$12 - 9 = \square$

$12 - 3 = \square$

$12 - 0 = \square$

$12 \text{ thoir-air-falbh } 8 = \square$

$12 \text{ thoir-air-falbh } 5 = \square$

$9 \text{ nas lugha na } 12 = \square$

$12 \text{ thoir-air-falbh } 12 = \square$

$\text{Thoir } 6 \text{ bho } 12. \square$

$\text{Thoir-air-falbh } 4 \text{ bho } 12. \square$

$12 - \square = 5$

$12 - \square = 4$

$12 - \square = 7$



_____ sgiotailean

_____ a' tuiteam.

Cia mheud a tha air fhàgail? _____

$$13 - 4 = \square$$

$$13 - 5 = \square$$

$$13 - 6 = \square$$

$$13 - 7 = \square$$

$$13 - 8 = \square$$

$$13 - 9 = \square$$

$$13 - 10 = \square$$

13 thoir-air-falbh 5 = _____

Thoir 9 bho 13. _____

13 thoir-air-falbh 7 = _____

Thoir-air-falbh 6 bho 13. _____

13 thoir-air-falbh 8 = _____

4 nas lugha na 13 _____

$$13 - \square = 4$$

$$13 - \square = 6$$

$$13 - \square = 8$$

$$13 - \square = 9$$

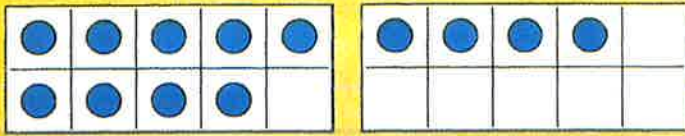
$$13 - \square = 5$$

$$13 - \square = 7$$

$$13 - \square = 10$$

$$13 - \square = 13$$

Cia mheud ● ?



$14 - 4 = \square$

$14 - 5 = \square$


$14 - 8 = \square$

$14 - 7 = \square$

$14 - 9 = \square$

$14 - 6 = \square$

Cia mheud ● ?



$15 - 6 = \square$

$15 - 9 = \square$


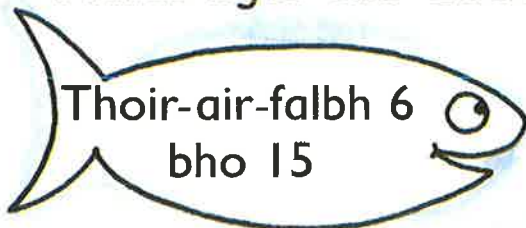
$15 - 7 = \square$

$15 - 8 = \square$

$15 - 5 = \square$

$15 - 10 = \square$

Maids agus cuir dath.



$14 - \square = 9$

$15 - \square = 8$

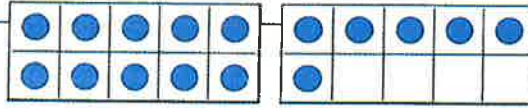
$\square - 9 = 6$

$15 - \square = 7$

$14 - \square = 5$

$\square - 6 = 8$

16



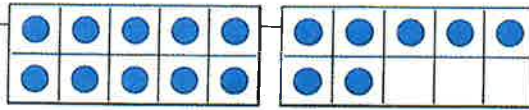
$16 - 6 =$ _____

$16 - 7 =$ _____

$16 - 8 =$ _____

$16 - 9 =$ _____

17



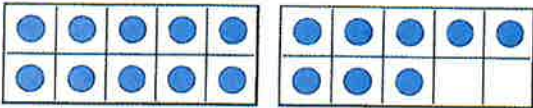
$17 - 10 =$ _____

$17 - 7 =$ _____

$17 - 8 =$ _____

$17 - 9 =$ _____

18

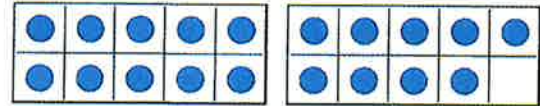


$18 - 10 =$ _____

$18 - 9 =$ _____


$18 - 8 =$ _____


19



$19 - 9 =$ _____

$19 - 10 =$ _____





$20 - 16 = \underline{\quad}$

$20 - 12 = \underline{\quad}$

$20 - 15 = \underline{\quad}$

$20 - 13 = \underline{\quad}$


$20 - 18 = \underline{\quad}$

$20 - 11 = \underline{\quad}$

$20 - 19 = \underline{\quad}$

$20 - 17 = \underline{\quad}$

$20 - 14 = \underline{\quad}$



$20 - 5 = \square$

$20 - 2 = \square$

$20 - 8 = \square$

$20 - \square = 17$

$20 - \square = 14$

$20 - \square = 16$

$20 - \square = 11$

$20 - \square = 19$


$20 - \square = 13$

Maids.

Thoir 14 bho 20

4 nas lugha na 20

20 thoir-air-falbh 17



20 thoir-air-falbh 18

8 nas lugha na 20

20 thoir-air-falbh 0

$15 - 6 =$

$13 - 8 =$

$11 - 5 =$

$13 - 7 =$

$18 - 10 =$

$14 - 9 =$

$12 - 3 =$

$16 - 6 =$

$17 - 17 =$

$15 \text{ thoir-air-falbh } 8 =$

$13 \text{ thoir-air-falbh } 4 =$

$14 \text{ thoir-air-falbh } 6 =$

$12 \text{ thoir-air-falbh } 8 =$


$6 \text{ nas lugha na } 13 =$

$9 \text{ nas lugha na } 16 =$

$\text{Thoir } 10 \text{ bho } 14.$

$\text{Thoir-air-falbh } 7 \text{ bho } 15.$

Maidis agus cuir dath.



$11 - 3 = \square$

$14 - 8 = \square$

$13 - 10 = \square$

$16 - 8 = \square$

$12 - 7 = \square$

$17 - 9 = \square$

$13 - 13 = \square$

$15 - 9 = \square$

$18 - 8 = \square$



Lorg an diofar eadar na h-aoisean.

Tha mi 13.



Tha mi 9

$$\square - \square = \square$$

Tha mi 7.



Tha mi 14.

$$\square - \square = \square$$

$11 \text{ thoir-air-falbh } 2 = \square$

$18 \text{ thoir-air-falbh } 9 = \square$

$16 \text{ thoir-air-falbh } 7 = \square$

$4 \text{ nas lugha na } 20 = \square$

$\text{Thoir } 10 \text{ bho } 16. \square$

$\text{Thoir-air-falbh } 9 \text{ bho } 11. \square$

$13 - \square = 8$

$\square - 6 = 5$

$14 - \square = 9$

$\square - 9 = 3$





$$9 + 2 = \underline{\quad}$$

$$2 + 9 = \underline{\quad}$$

$$11 - 2 = \underline{\quad}$$

$$11 - 9 = \underline{\quad}$$

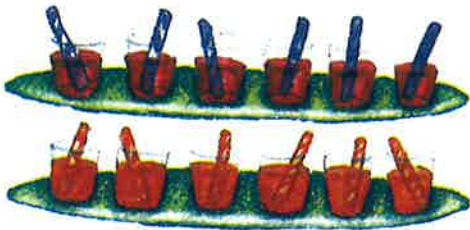


$$6 + 7 = \square$$

$$\square + 6 = 13$$

$$13 - 7 = \square$$

$$\square - 6 = 7$$




$$6 + 6 = \square$$

$$12 + 6 = \square$$



$$7 + 7 = \square$$

$$14 - \square = 7$$



$$4 + 8 = 12$$

$$\underline{\quad} + \underline{\quad} = \underline{\quad}$$

$$\underline{\quad} - \underline{\quad} = \underline{\quad}$$

$$\underline{\quad} - \underline{\quad} = \underline{\quad}$$



$$9 + 5 = 14$$

$$\underline{\quad} + \underline{\quad} = \underline{\quad}$$

$$\underline{\quad} - \underline{\quad} = \underline{\quad}$$

$$\underline{\quad} - \underline{\quad} = \underline{\quad}$$



$$8 + 7 = 15$$

	+		=	
	-		=	
	-		=	

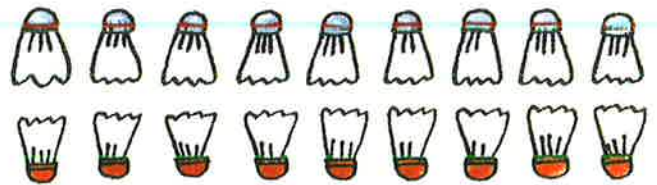


$$8 + 9 = 17$$



$$8 + \square = \square$$

$$\square - 8 = \square$$



$$9 + \square = \square$$

$$\square - 9 = \square$$





Seòrsaich.

16	8	✓
----	---	---

11	16
----	----

7	15
---	----

20	11
----	----

18	13
----	----

19	11
----	----

17	9
----	---

20	12
----	----

9	16
---	----

diofar de 8

16	8
----	---

--	--

--	--

--	--

--	--

--	--

~~diofar de 8~~

--	--

--	--

--	--

--	--

--	--

--	--

Lorg m' àireamh.



9 nas motha na 6.

--

An diofar eadar
12 agus 20.

--

Sgrìobh stòiridh airson 14.



14

Cleachd

17

16

15

7

8

Cuir crìoch.

$$\square - \square = 7$$

$$\square - \square = 8$$

$$\square - \square = 9$$

$$\square - \square = 9$$

5 nas lugha na 18



4 nas motha na 8


 Toirt-air-falbh 6
Thoir 5 bho 5 + 2 + Thoir-air-falbh bho 20

Sal



Seonaidh

Cò aig a tha dà uimhir 6 cuir-ris 1? _____

1 $6 - 3 = \square$ $7 - 5 = \square$ $5 - 2 = \square$
 $8 - 4 = \square$ $9 - 0 = \square$ $10 - 6 = \square$

Thoir-air-falbh 3 bho 9. _____ 5 nas lugha na 10 _____.

2 $19 - 4 = \square$ $18 - 6 = \square$ $15 - 4 = \square$
 $17 - 5 = \square$ $20 - 8 = \square$ $16 - 2 = \square$
 $20 - \square = 13$ $\square - 1 = 18$ $14 - \square = 11$

3 $19 - 15 = \square$ $17 - 12 = \square$ $16 - 14 = \square$
 $18 - 18 = \square$ $15 - 11 = \square$ $19 - 13 = \square$

Lorg an diofar eadar

14 agus 11 _____ 18 agus 12 _____ 17 agus 13 _____

4 $11 - 6 = \square$ $13 - 7 = \square$ $12 - 5 = \square$
 $13 - 9 = \square$ $12 - 4 = \square$ $11 - 8 = \square$

12 thoir-air-falbh 8. _____ 7 nas lugha na 11 = _____.

$13 - \square = 7$ $11 - \square = 8$ $\square - 6 = 6$

1 $14 - 6 =$

$15 - 9 =$

$14 - 8 =$

$15 - 7 =$

$14 - 5 =$

$15 - 6 =$



Cia mheud $\{$ a bharrachd air $\}$? _____

$14 - \square = 5$

$15 - \square = 7$

$15 - \square = 10$

2 $17 - 9 = \square$

$16 - 7 = \square$

$16 - 8 = \square$

$18 - 9 = \square$

$17 - 8 = \square$

$19 - 9 = \square$

Thoir-air-falbh 9 bho 16 _____

Thoir 7 bho 17. _____

3 $20 - 13 = \square$

$20 - 9 = \square$

$20 - 16 = \square$



Lorg an diofar eadar

20 agus 17 _____

20 agus 8 _____

7 agus 20 _____

4 Maids.



Toirt-air-falbh: measadh