



M H A

Matamataig Heinemann Alba

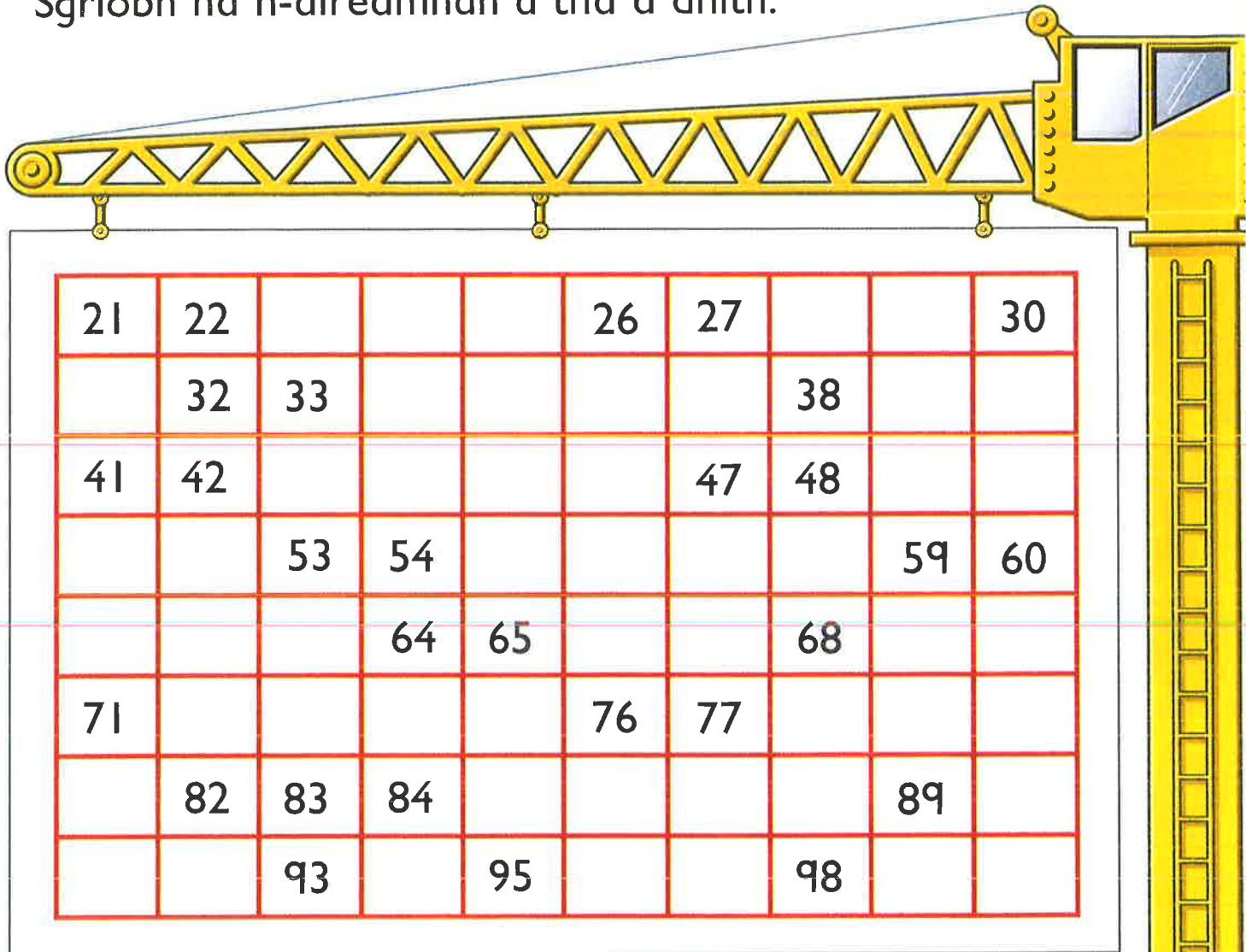
2

Àireamhan gu 100



Ainm _____

Sgrìobh na h-àireamhan a tha a dhìth.



Cuir dath dearg air an àireimh

an dèidh 31

an dèidh 84

an dèidh 50

an dèidh 99

Cuir dath gorm air an àireimh

ro 27

ro 100

ro 69

ro 41

Cuir dath uaine air an àireimh

eadar 43 agus 45


eadar 59 agus 61

Cuir dath buidhe air an àireimh


eadar 56 agus 60

eadar 88 agus 93


Sgrìobh an àireamh an dèidh




Sgrìobh an àireamh ro



Sgrìobh an àireamh eadar





Sgrìobh na h-àireamhan a tha a dhìth.





Sgrìobh an àireamh a tha


aon nas motha na




dhà nas motha na



aon nas lugha na



dhà nas lugha na



Maid.

1 nas-lugha na 40

2 nas motha na 29

2 nas lugha na 91



1 nas lugha na 88

2 nas lugha na 100

2 nas motha na 98

25	26	31	34	37	38	39
40	42	46	49	50	51	54
55	60	62	63	65	67	70
71	73	75	77	80	81	82
83	89	90	91	96	99	100

Cuir dath air an àireimh a tha

dhà nas motha na | 61 94 79 48

an dèidh | 59 76 30 53

aon nas lugha na | 47 56 84 38

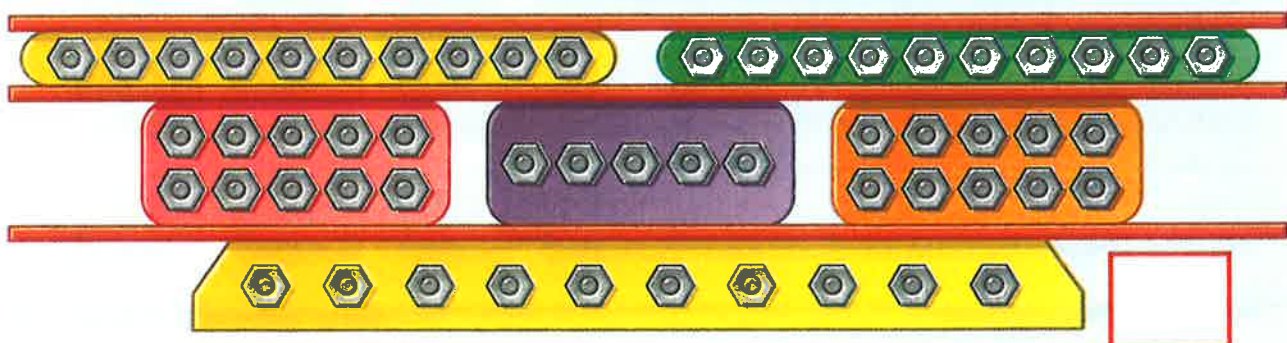


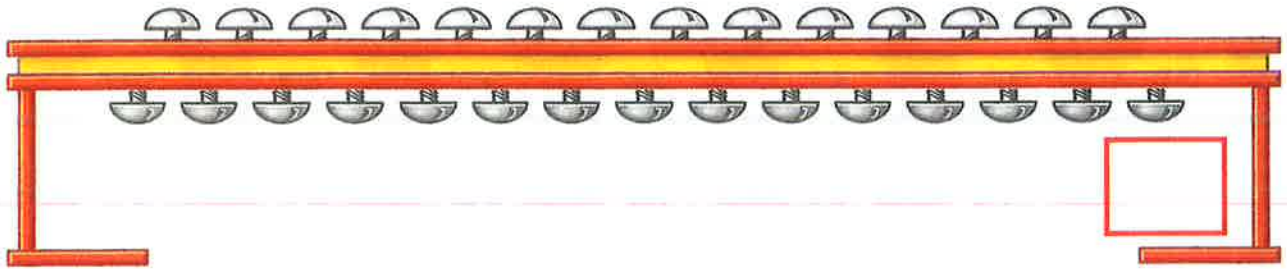
eadar | 61 agus 63 33 agus 35

aon nas motha na | 64 89 70 66


dhà nas lugha na | 93 75 41 53

ro | 39 50 43 90


Cia mhead?




Dèan 27 ✕.



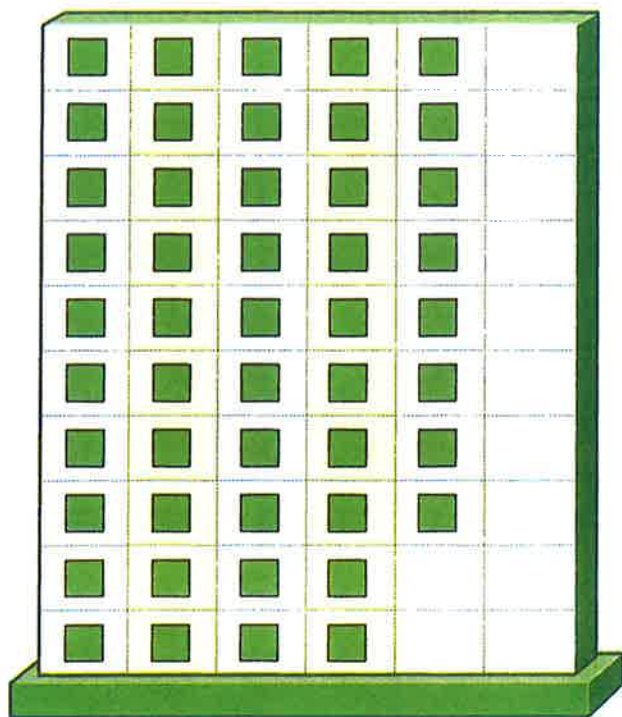
Dèan 33 ●.



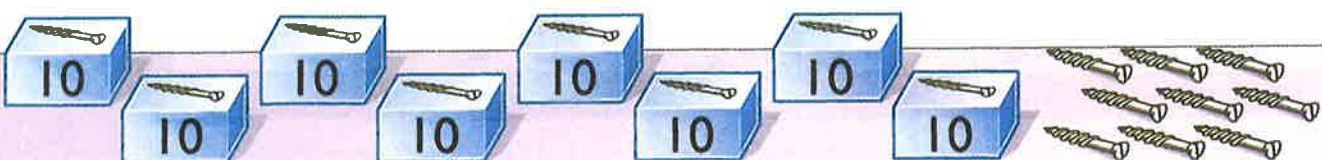


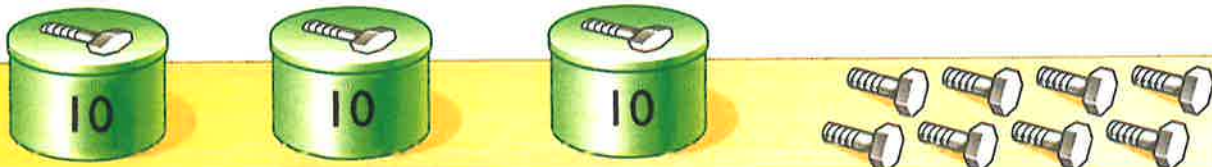
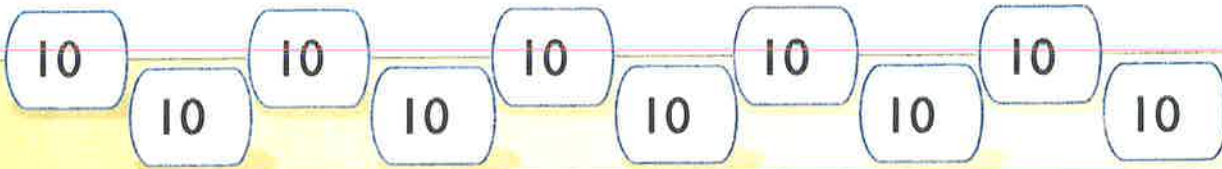


Cuir crìoch gu 46.



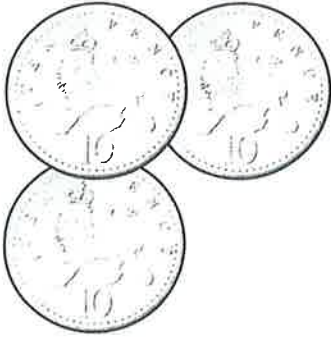
Cuir crìoch gu 54.



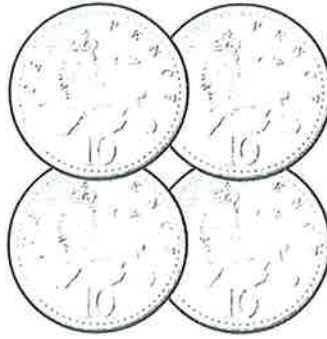
Cia mheud?



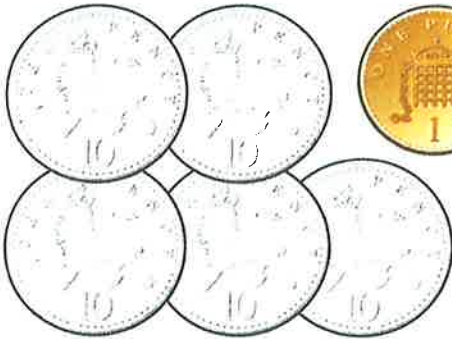
Cia mheud sgillinn uile-gu-lèir?



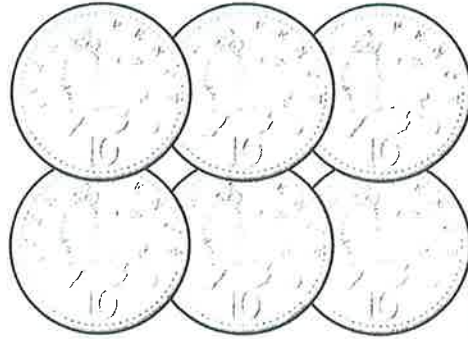
sg



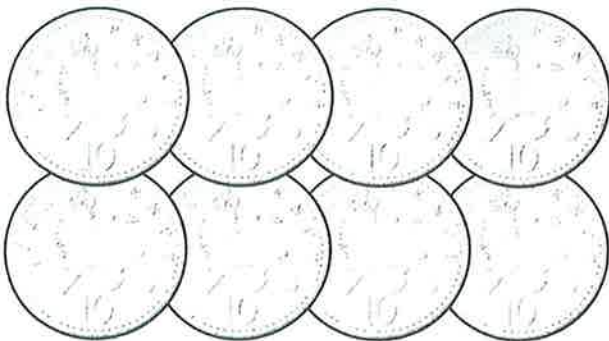
sg




sg



sg



sg



sg


Cleachd buinn 10sg agus 1sg. Cuir crìoch.




60sg agus 8sg



agus



agus



agus



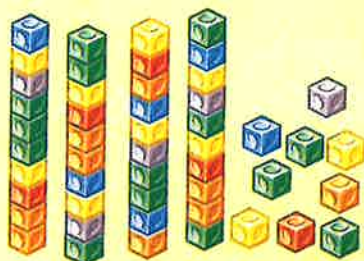


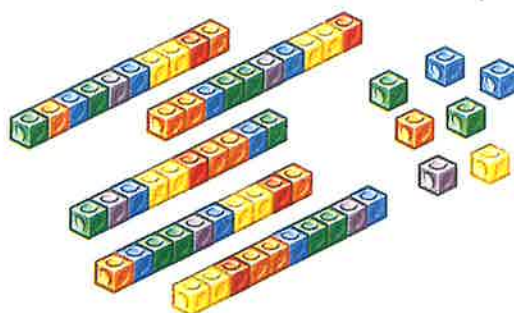
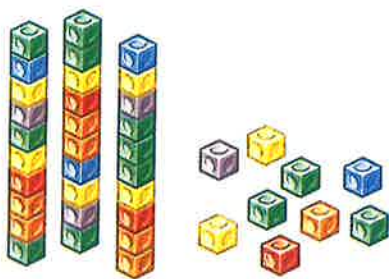
13sg

39sg

65sg

90sg

Cia mheud uile-gu lèir?



ceathrad
's a naoi

$$49 = 40 + 9$$

$$25 = \quad +$$

$$58 = \quad +$$

$$74 = \quad +$$

$$86 = \quad +$$

$$23 = \quad +$$

$$41 = \quad +$$

$$33 = \quad +$$

$$72 = \quad +$$

$$97 = \quad +$$

Maids agus cuir dath.

80 agus 4

62

46

60 + 2

99

40 agus 6

90 + 9

84

31	32	33	34	35	36	37	38	39	40
41	42	43	44	45	46	47	48	49	50
51	52	53	54	55	56	57	58	59	60
61	62	63	64	65	66	67	68	69	70

Cuir dath dearg air 10 nas motha na

35 58 44 60 36 53 47 51

Cuir dath buidhe air 10 nas lugha na

65 42 48 57 43 66 54 49

Cuir crìoch.

20	agus 10 nas motha		agus 10 nas motha	
46	+10		+10	
77	agus 10 nas lugha		agus 10 nas lugha	
69	-10		-10	
22	32	42		
15	25	35		
96	86	76		
81	71	61		


Cuir dath dearg air an àireimh **as motha**.




Cuir dath gorm air an àireimh **as lugha**.



Sgrìobh àireamh a tha **nas motha** na



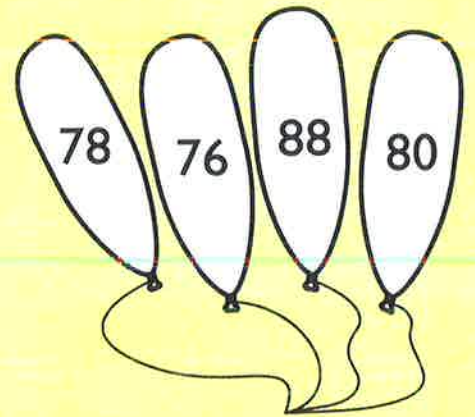
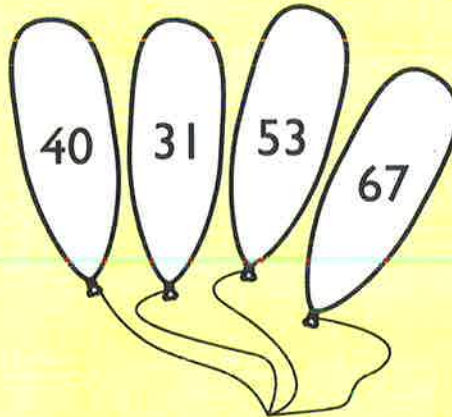
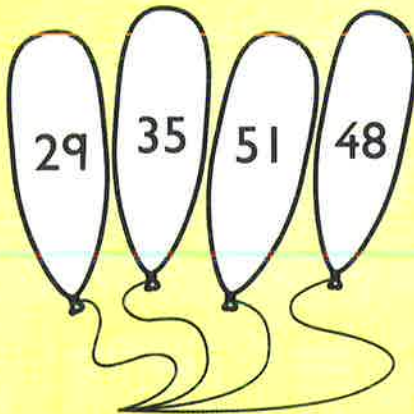

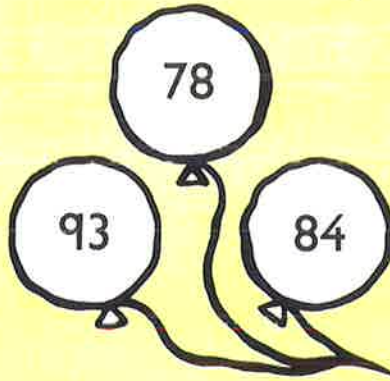

Sgrìobh àireamh a tha **nas lugha** na



Cleachd agus . Sgrìobh àireamh


nas motha na 60 **nas lugha** na 60.

Cuir dath dearg air an àireimh **as motha**.
Cuir dath gorm air an àireimh **as lugha**.




Sgrìobh tuilleadh àireamhan.


'S e 40 an àireamh sa mheadhan.




'S e 55 an àireamh as motha.



'S e 31 an àireamh as lugha.



'S e 76 an àireamh sa mheadhan.



Sgriobh ann an òrdugh.



42			
----	--	--	--




13			
----	--	--	--




66			
----	--	--	--



100			
-----	--	--	--



59				
----	--	--	--	--




76				
----	--	--	--	--




35				
----	--	--	--	--


Sgrìobh ann an òrdugh.



Tòisich leis an àireimh **as motha**.



Tòisich leis an àireimh **as motha**.



Tòisich leis an àireimh **as lugha**.



Tòisich leis an àireimh **as lugha**.

as lugha as motha

Tha an àireamh as motha **5 nas motha** na 80.

Tha an àireamh as lugha **5 nas lugha** na 80.

Tagh àireamh airson gach bogsa falamh.


as motha as lugha

Tha an àireamh as motha **10 nas motha** na 65.

Tha an àireamh as lugha **10 nas lugha** na 50.

Tagh àireamh airson gach bogsa falamh.

Sgrìobh na h-àireamhan a tha a dhìth.



Cunnt a h-uile dhà. Cia mheud pàiste? _____



Cuir dath ■ air
na h-àireamhan cothromach.

1	2	3	4	5
6	7	8	9	10
11	12	13	14	15
16	17	18	19	20
21	22	23	24	25
26	27	28	29	30

Cuir dath ■ air
na h-àireamhan corra.

9	10	11	12
13	14	15	16
17	18	19	20
21	22	23	24
25	26	27	28
29	30	31	32

Sgrìobh na h-àireamhan a tha a dhìth.

4	6	8			14	
7	9	11				
18	16	14		10		
29	27	25				



Cuir cearcall timcheall na h-àireamhan corra.

35

22

18

25

13

7

29

36

41

Cunnt gach trì. Cuir dath.

0	1	2	3	4	5	6	7	8	9	10
										11
22	21	20	19	18	17	16	15	14	13	12
23										
24	25	26	27	28	29	30	31	32	33	

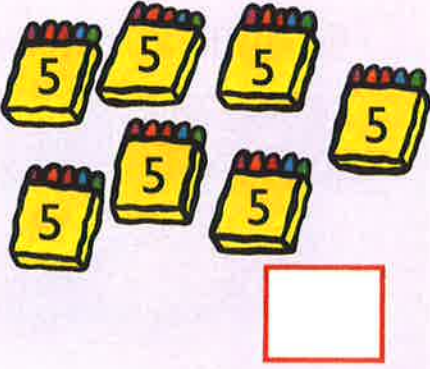

Cunnt gach ceithir. Cuir dath.

0	1	2	3	4	5	6	7	8	9
10	11	12	13	14	15	16	17	18	19
20	21	22	23	24	25	26	27	28	29
30	31	32	33	34	35	36	37	38	39

Sgrìobh na h-àireamhan a tha a dhìth.

<u>0</u>	<u>5</u>	<u>10</u>	<u> </u>	<u> </u>	<u> </u>
<u>25</u>	<u>30</u>	<u>35</u>	<u> </u>	<u> </u>	<u> </u>
<u>3</u>	<u>6</u>	<u>9</u>	<u> </u>	<u> </u>	<u> </u>
<u>0</u>	<u>4</u>	<u>8</u>	<u> </u>	<u>16</u>	<u> </u>
<u>21</u>	<u>18</u>	<u>15</u>	<u>12</u>	<u> </u>	<u> </u>
<u>28</u>	<u>24</u>	<u>20</u>	<u> </u>	<u> </u>	<u> </u>


Cia mheud?



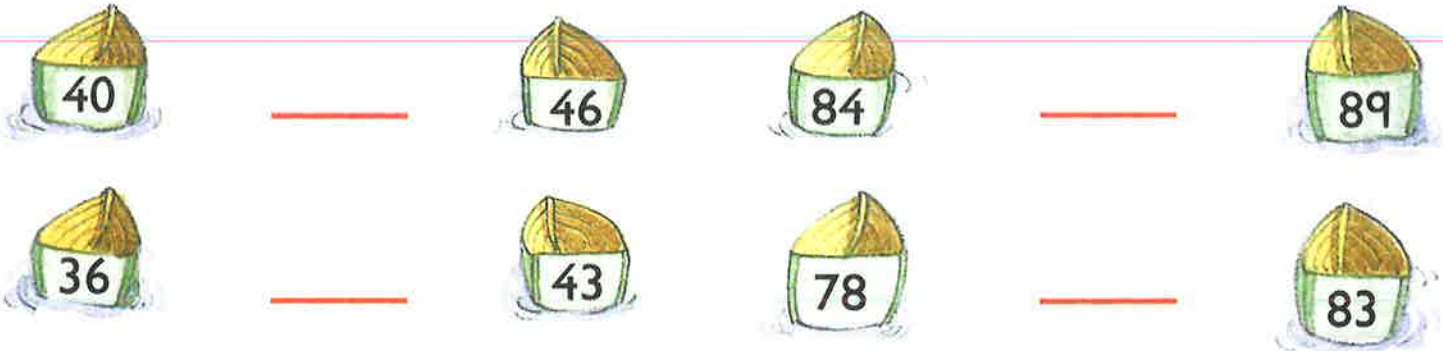
Sgrìobh na h-àireamhan **cothromach** eadar




Sgrìobh na h-àireamhan **corra** eadar



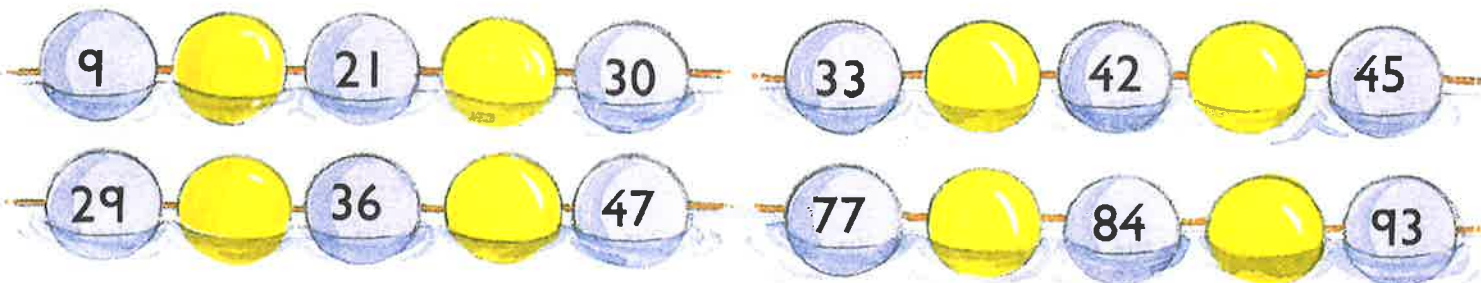
Sgrìobh **aon** àireamh eadar



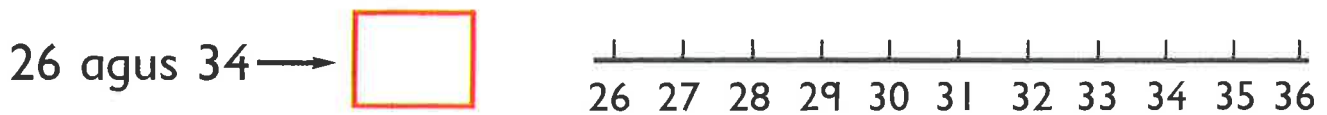

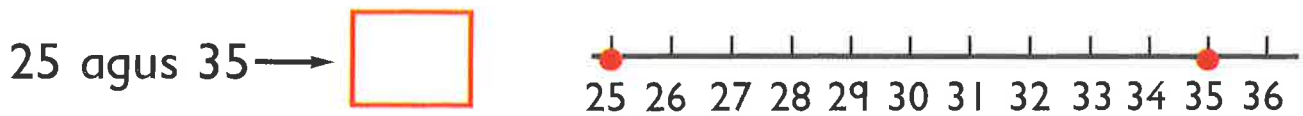
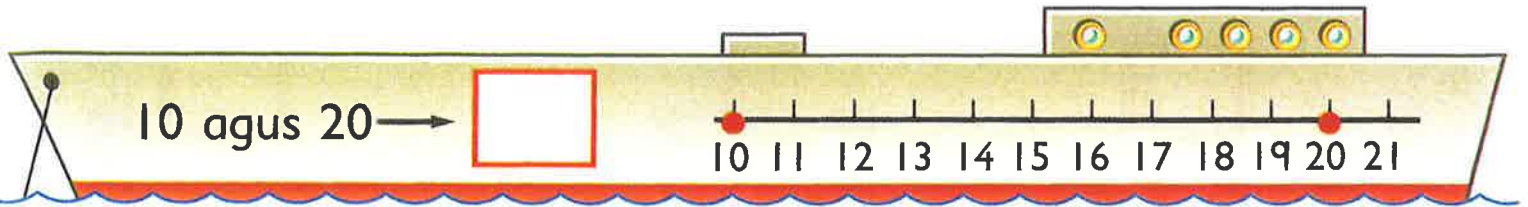
Sgrìobh **dà** àireimh eadar



Sgrìobh àireamhan eadar



Sgrìobh an àireamh a tha letheach eadar



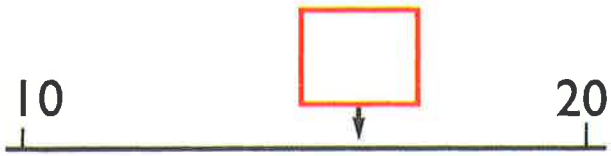
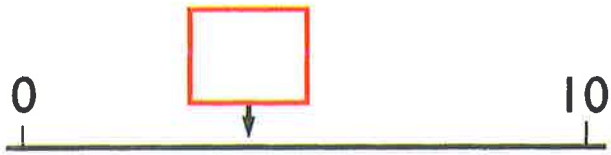
60 agus 70 →

45 agus 55 →

72 agus 78 →

37 agus 45 →

Dèan tuairmse air na h-àireamhan.



Sgrìobh àireamhan air na



Sgrìobh chun an deich as fhaisge:

53 →

57 →

44 →

66 →

48 →

62 →



sg



sg



sg

1 Sgrìobh na h-àireamhan a tha a dhìth.

41	42	43							50
			54	55			58	59	
		63			66	67			

2 Sgrìobh an àireamh

an dèidh 89

ro 30

eadar 73 agus 75

1 nas motha na 25

2 nas motha na 39

2 nas lugha na 100

3 Cia mheud uile-gu-lèir? sg



$$64 = 60 +$$

$$38 = +$$

$$52 = +$$

4 Cuir crìoch.

10 nas motha na 74

10 nas lugha na 46

23 — 33 — 43 — — —

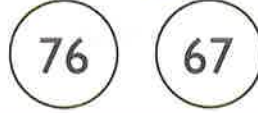
97 — 87 — 77 — — —

1 Cuir ✓ air an àireimh


as motha



as lugha



as motha



2 Sgrìobh na h-àireamhan ann an òrdugh.


Tòisich leis an àireimh
as lugha.



Tòisich leis an àireimh
as motha.



3 Sgrìobh na h-àireamhan a tha a dhìth.



Cuir ✓ air na h-àireamhan **cothromach**.



Sgrìobh chun an deich as fhaisge.



Àireamhan gu 100: measadh