




**M H A**

**I**

Matamataig Heinemann Alba

# Duilleagan-sgrùdaidh




Ainm \_\_\_\_\_

Cuir dath dearg air

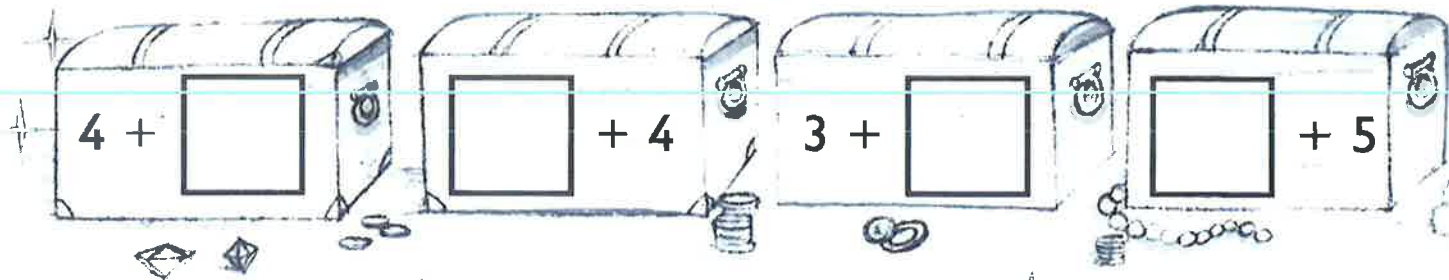
3

Cuir dath gorm air

2



Dèan 5.



3 agus 1 =

1 cuir-ris 0 =

2 cuir-ris 2 =

5 + 0 =

1 + 3 =

0 + 1 =

3 +  = 5

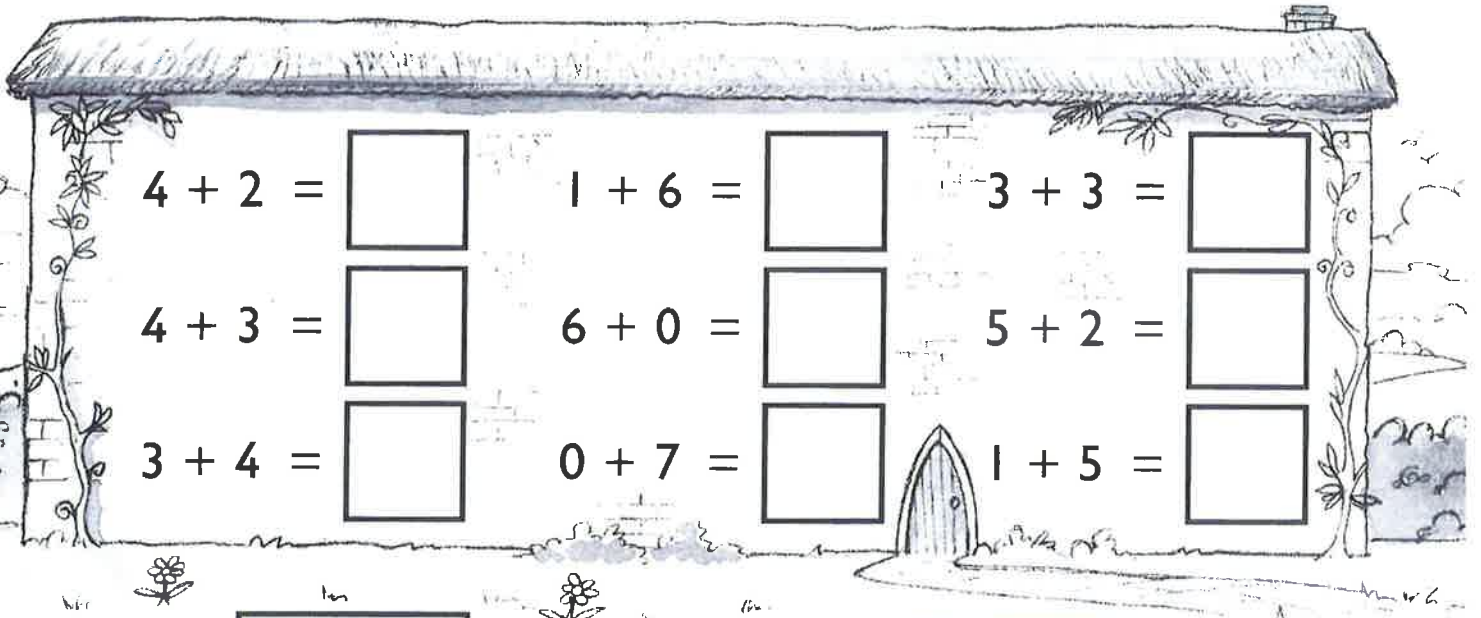
+ 0 = 4

0 +  = 2

3 + 2 + 0 =

1 + 1 + 2 =

1 + 3 + 1 =



Dèan 6.

5 +

2 +

+ 6

Dèan 7.

7 +

+ 1

+ 5

Cuir dath dearg air . Cuir dath gorm air .

3 cuir-ris 4

1 cuir-ris 6

4 agus 2

0 agus 7

4 + 3

1 agus 5

5 agus 2

0 + 6

1 + 2 + 3

2 cuir-ris 4

5 + 1

3 + 3 + 1

Cuir (✓) air trì  agus dèan 6. Cuir (✓) air trì  agus dèan 7.

1  4  2  3

1  5  3  1  2

$6 + 2 =$	$2 + 7 =$	$8 + 1 =$
$9 + 0 =$	$4 + 4 =$	$1 + 7 =$
$5 + 2 =$	$6 + 3 =$	$0 + 8 =$
$2 + 6 =$	$4 + 5 =$	$3 + 3 =$



3	cuir-ris	
	+	1
	cuir-ris	

7	+	
	cuir-ris	4
	cuir-ris	

$1 + 2 + 6 =$

$1 + 7 + 0 =$

$1 + 4 + 3 =$

$0 + 1 + 8 =$

$9 + 1 = \square$

$6 \text{ cuir-ris } 2 = \square$

$5 + 5 = \square$

$2 + 7 = \square$


$10 \text{ cuir-ris } 0 = \square$

$7 + 3 = \square$

8 +  $\square$  = 10

3 +  $\square$  = 9

0 +  $\square$  = 10



$\square$  + 9 = 10

$\square$  + 4 = 10

Cuir dath air 10.

3 cuir-ris 7

4 + 6

2 + 4 + 3

1 + 8

3 + 4 + 1

2 cuir-ris 8

Cuir (✓) air dà  agus dèan 10.



Cuir (✓) air trì  agus dèan 10.



Sgrìobh na h-àireamhan a tha a dhìth.

16	17		
----	----	--	--

		14	15
--	--	----	----

Sgrìobh an àireamh

ro 11

an dèidh 19

ro 16

an dèidh 18

ro 14

an dèidh 17

an àireamh




Maid




an àireamh




Sgrìobh an àireamh eadar

12 agus 14

13 agus 15

20 agus 18

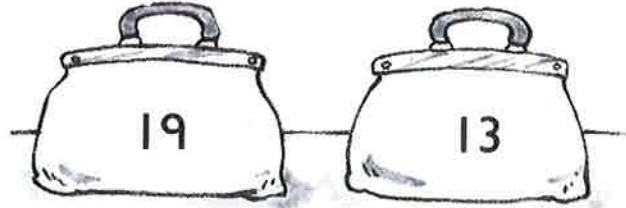
16 agus 14

Sgrìobh **aon** àireamh eadar 12 agus 17.

Cuir (✓) air an àireamh as motha.



Cuir (✓) air an àireamh as lugha.



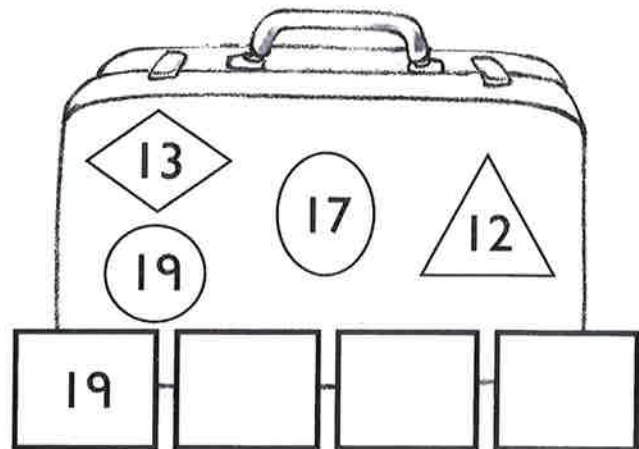

Cuir dath air an àireamh as motha.



Cuir dath air an àireamh as lugha.



Sgrìobh na h-àireamhan ann an òrdugh.



1 nas motha na 14 →

2 nas lugha na 19 →

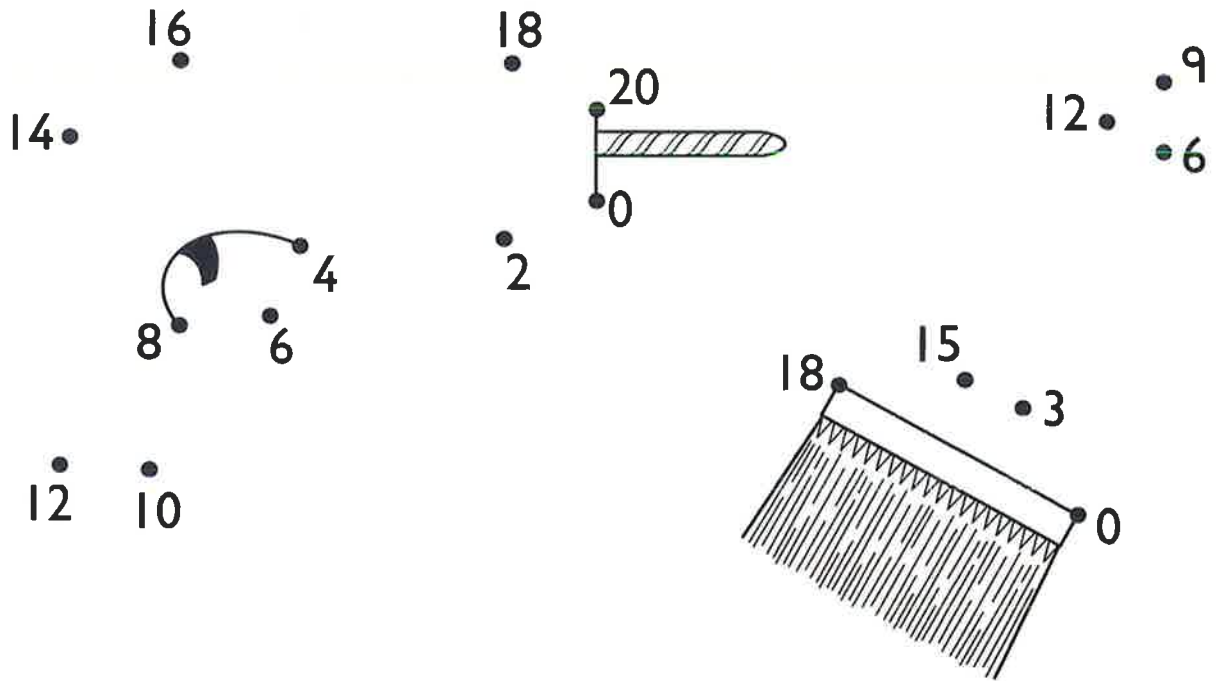
2 nas lugha na 13 →

2 nas motha na 10 →

2 nas motha na 18 →

1 nas lugha na 15 →

Ceangail ann an òrdugh. Cuir dath.



Sgrìobh na h-àireamhan a tha a dhìth.

2	4	6		
---	---	---	--	--

18	16	14		
----	----	----	--	--

1	3	5		
---	---	---	--	--

17	15	13		
----	----	----	--	--

0	3	6		
---	---	---	--	--

15	12	9		
----	----	---	--	--

Cuir (✓) air na h-àireamhan cothrom.



Cuir (✓) air na h-àireamhan corra.





Sgrìobh na h-àireamhan.

naoi-deug

aon-deug

trì-deug

còig-deug

fichead

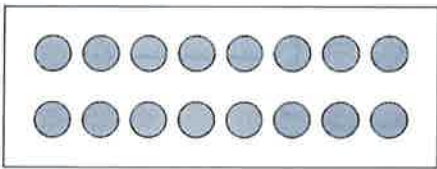
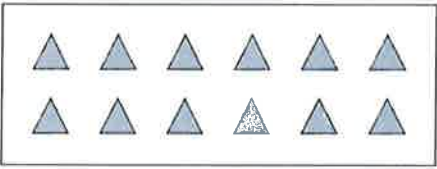

ceithir-deug

Maids.

17

sia-deug

12






dhà-dheug

16

seachd-deug

Cuir dath air an t-seachdamh an treas a' chiad an 9mh .



$2 - 1 = \square$

$4 - 4 = \square$

$5 - 1 = \square$

$4 - 3 = \square$

$2 - 0 = \square$

$5 - 5 = \square$

$3 - 0 = \square$

$3 - 2 = \square$

$4 - 0 = \square$



Falaich 2.

Falaich 3.

Cia mheud a tha air fhàgail? \_\_\_\_\_ Cia mheud a tha air fhàgail? \_\_\_\_\_

$4 \text{ nas lugha na } 5 = \square$

$5 \text{ thoir-air-falbh } 0 = \square$

$\text{Thoir-air-falbh } 1 \text{ bho } 3. \square$

$\text{Thoir } 2 \text{ bho } 2. \square$



$2 + 3 = \square$

$3 + 2 = \square$

$5 - 3 = \square$

$5 - 2 = \square$

$8 - 7 = \square$

$8 - 2 = \square$

$8 - 0 = \square$

$7 - 1 = \square$

$7 - 0 = \square$

$7 - 3 = \square$

$6 - 4 = \square$

$6 - 1 = \square$

$6 - 6 = \square$

$8 - 3 = \square$

$7 - 4 = \square$

$6 - 5 = \square$

Maids.



8 thoir-air-falbh 5 =

7 thoir-air-falbh 6 =

Thoir-air-falbh 1 bho 8.

Thoir-air-falbh 2 bho 6.

Thoir-air-falbh 5 bho 7.

Thoir-air-falbh 5 bho 6.

$9 - 5 = \square$

$10 - 0 = \square$

$9 - 8 = \square$

$10 - 9 = \square$

$9 - 7 = \square$

$10 - 6 = \square$

$9 - 0 = \square$

$10 - 4 = \square$

$9 - 9 = \square$

Muids.

$9 - 7$

$10 - 8$

$10 - 5$

$9 - 9$

$9 - 2$

$2$

$8$

$0$

$5$

$7$


$10 - 2$

$10 - 10$

$9 - 1$

$10 - 3$

$9 - 4$



3 a' falbh.

Cia mhead a tha air fhàgail?



6 air an reic.


Cia mhead a tha air fhàgail?

10 thoir- air-falbh 7 =

9 thoir- air-falbh 8 =

6 nas lugha na 9 =

Thoir- air-falbh 4 bho 10.



Cia mheud  a bharrachd? \_\_\_\_\_


$$\square - \square = \square$$

Lorg an diofar eadar  
 2 agus 8 \_\_\_\_\_      10 agus 5 \_\_\_\_\_

Cuir crìoch.

$$\square - \square = 4$$

$$\square - \square = 0$$




$$3 + 6 = \square$$

$$6 + 3 = \square$$

$$9 - 3 = \square$$

$$9 - 6 = \square$$



$$5 + 2 = 7$$

$$\square + 5 = 7$$

$$\square - 5 = 2$$

$$7 - \square = 5$$

$$6 - \square = 5$$

$$\square - 2 = 7$$

$$10 - \square = 8$$

$$\square - 4 = 4$$

1 Sgrìobh an àireamh

an dèidh 13

ro 16

eadar 17 agus 19

2 Sgrìobh na h-àireamhan ann an òrdugh.

(15) (9) (20) (12) (16)

9    \_\_\_\_\_    \_\_\_\_\_    \_\_\_\_\_    \_\_\_\_\_

3

$2 + 5 = \square$

$4 + 4 = \square$

$5 + 3 = \square$

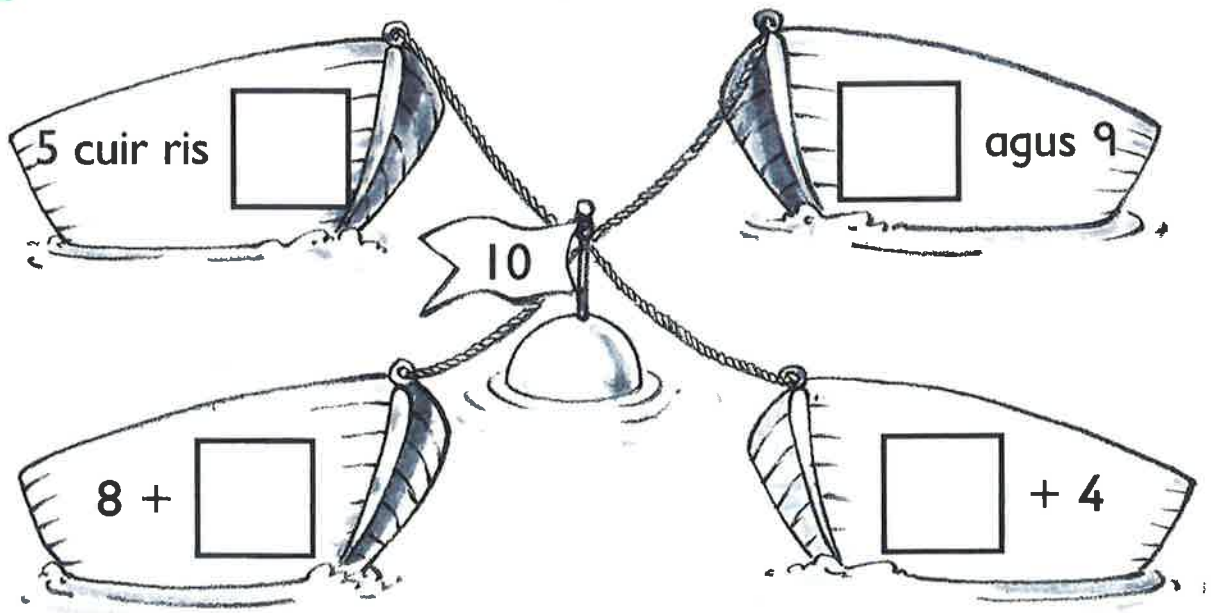
$6 + 0 = \square$

$2 + 3 = \square$

$8 + 1 = \square$

4

Dèan 10.



5 Cia mheud uile-gu-lèir?



6

$7 - 3 = \square$

$10 - 5 = \square$

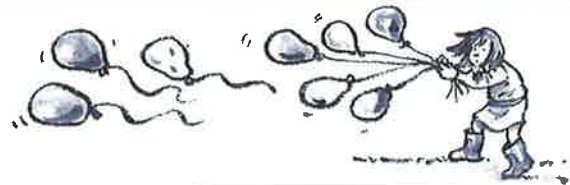
$9 - 8 = \square$

$5 - 2 = \square$

$6 - 4 = \square$

$8 - 5 = \square$

7



\_\_\_\_\_ bailiùnaichean.

3 a' falbh leis a' ghaoith.

Cia mheud a tha air fhàgail? \_\_\_\_\_

$$\square - \square = \square$$


8



Cia mheud a bharrachd de \_\_\_\_\_?

$$\square - \square = \square$$

9



$7 + 2 = 9$

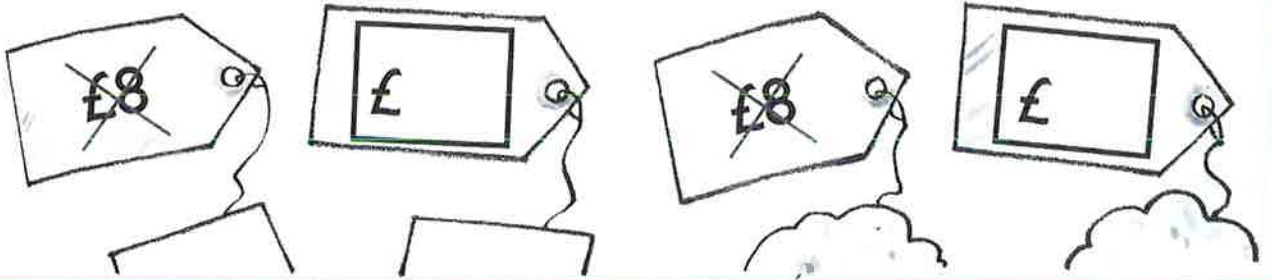
$\square + 7 = 9$

$\square - 2 = 7$


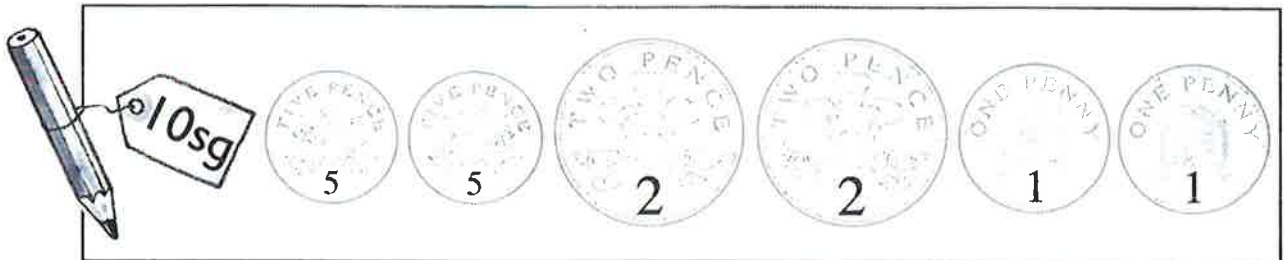
$9 - \square = 2$

10 Dèan £1 nas lugha.


Dèan £2 a bharrachd.



11 Seall na buinn (✓).



12 Maids.



ceàrnag



cearcall



triantan





13

Dèan àrd.



Dèan goirid.



14

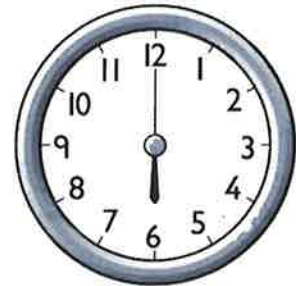
Mairs.



6 uairean

uair

aon uair deug



15

Seòrsaich na h-àireamhan.

<del>9</del>	<del>8</del>	10	2	6	8	7
--------------	--------------	----	---	---	---	---

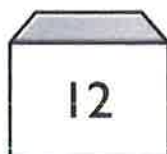
nas lugha na 7

~~nas lugha na 7~~

5

9

## 1 Maids.



## 2 Cuir (✓) air an dara fear agus air an fhear mu dheireadh.



## 3

$$7 + 3 = \square \quad 6 + 2 = \square \quad 1 + 8 = \square$$

$$3 + 4 + 2 = \square \quad 1 + 5 + 4 = \square$$

## 4

$$3 + \square = 8$$

$$\square \text{ cuir ris } 2 = 9$$

$$5 + \square = 5$$

$$\square \text{ cuir ris } 7 = 8$$

**5** Dèan 6.

agus

Dèan 7.

+  +

**6**

7 thoir-air-falbh 6 =

2 nas lugha na 8 =

Thoir-air-falbh 0 bho 9.

Thoir-air-falbh 4 bho 10.

**7**

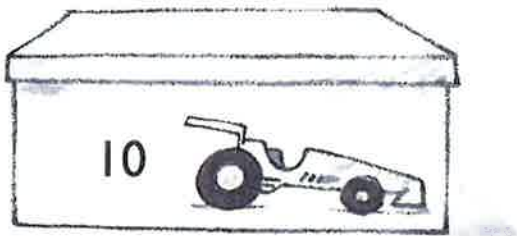
Lorg an diofar eadar

2 agus 10

5 agus 6

8 agus 1

**8**



7 air an reic.

Cia mheud a tha air fhàgail? \_\_\_\_\_

-  =

**9**

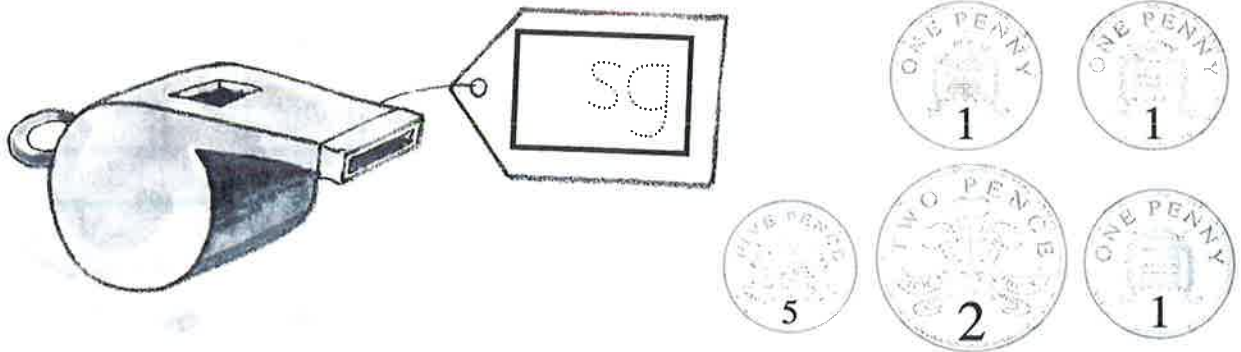
9 -  = 3

- 5 = 0

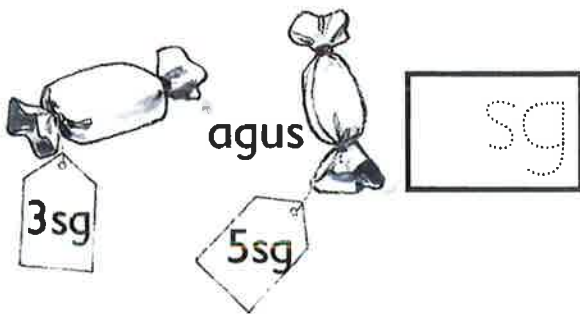
10 -  = 10

- 3 = 1

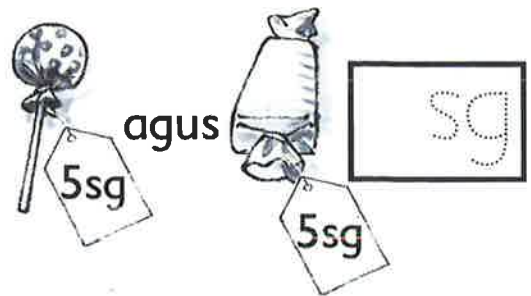
10 Dè na tha ann?



11 Dè na tha ann uile-gu-lèir?



$$2p + 4p = \boxed{\text{sg}}$$




$$6p + 3p = \boxed{\text{sg}}$$

12



Ceannaich



Dè na tha air fhàgail? £

£

$$£8 - £6 =$$

£

$$£10 - £7 =$$

£

## A' seòrsachadh agus a' maidseadh

A' seòrsachadh	PS 1	PS 2	PS 3	PS 4	PS 5	PS 6	PS 7	PS 8

A' maidseadh	
--------------	--

## Àireamhan gu 10

Aon agus dhà	PS 9

Trì	PS 10	AB 1	AB 2	PS 11	AB 3

Ceithir	PS 11	AB 4	AB 5	AB 6

Còig	PS 12	AB 7	AB 8	AB 9

A' cur an òrdugh gu 5	PS 13	AB 10	AB 11	AB 12

Sia agus seachd	PS 14	PS 15	AB 13	AB 14	AB 15	AB 16

Ochd agus naoi	PS 16	AB 17	AB 18	AB 19	AB 20

Deich	PS 17	AB 21	AB 22	AB 23

A' cur an òrdugh gu 10	PS 17	AB 24	AB 25	PS 18	AB 26	PS 19	AB 27	PS 19	AB 28	AB 29

Àireamhan gu 20	
-----------------	--

Pàtrain	AB 30	AB 31

# Clàr Obrach: MHA 1

## A' cur-ris gu 10

Bun bheachd cur-ris	PS 20	AB 1	AB 2	PS 21	AB 3	AB 4

A' clàradh cur-ris	AB 5	PS 22	AB 6	AB 7

A' cur 1 agus 2 ris	AB 8	AB 9

Stòiridhean cur-ris gu 5	AB 10	AB 11	AB 12

A' daingneachadh cur-ris gu 5	PS 22	AB 13

Measadh	AB 14

Cur-ris gu 5: daingeachadh	PS 23	PS 24	PS 25	AB 15	AB 16	HA 1	CU 1

Àireamhan dùbailte	PS 26	AB 17	PS 27	AB 18

Stòiridhean cur-ris 6 agus 7	AB 19	AB 20	HA 2	AB 21	AB 22	PS 28	PS 29	PS 30	CU 2

Stòiridhean cur-ris 8 agus 9	PS 30	AB 23	AB 24	HA 3	PS 30	PS 31	AB 25	AB 26	CU 3

Stòiridhean cur-ris gu 10	PS 32	AB 27	AB 28	AB 29	HA 4	CU 4

Measadh	AB 30	AB 31

## Àireamhan gu 20

Òrdugh àireimh gu 20	AB 1	AB 2	AB 3	AB 4	AB 5	AB 6	HA 5	CU 5

A' cùntadh gu 20	PS 33	AB 7	AB 8	AB 9	PS 34	AB 10	HA 6

A' coimeas àireamhan agus a' cur an òrdugh	PS 35	PS 36	AB 11	AB 12	PS 37	AB 13	HA 7	AB 14	HA 8	CU 6

Àireamhan cothrom agus corra	PS 38	PS 39	AB 15	PS 38	PS 39	AB 16	PS 38	AB 17	HA 9	CU 7

Ainmean àireamhan	AB 18	AB 19	AB 20	HA 10	CU 8

Àireamhan òrdail	

Measadh	AB 21	AB 22	AB 23

## A' toirt-air-falbh gu 10

Bun bheachd toirt-air-falbh	AB 1	PS 40	AB 2					
A' toirt-air-falbh le 1, 2 agus 0	AB 3	HA 11	AB 4					
Stòiridhean toirt-air-falbh gu 5	AB 5	PS 41	AB 6	PS 42	AB 7	HA 12		
Cànan airson toirt-air-falbh	AB 8	HA 13	AB 9	AB 10	HA 14	AB 11	CU 9	
Measadh	AB 12							
A' toirt-air-falbh fo 10	AB 13	HA 15	AB 14	AB 15	PS 43	AB 16	AB 17	
Stòiridhean 6 agus 7	AB 18	HA 16	AB 19	AB 20	HA 17			
Stòiridhean 8 agus 9	AB 21	AB 22	HA 18	CU 10	AB 23	AB 24	HA 19	
Stòiridhean gu 10	AB 25	AB 26	PS 44	HA 20	HA 21	AB 27	PS 45	CU 11
Toirt-air-falbh: coimeas	AB 28	AB 29	HA 22	PS 46	AB 30	PS 47		
A' ceangal le + agus - airson 6 gu 10	AB 31	AB 32	AB 33	AB 34	AB 35			
A' toirt-air-falbh gu 10	AB 36	AB 37	CU 12					
Measadh	AB 38	AB 39						

## Airgead

Ag aithneachadh bhonn	PS 48							
Cur ris gu 10sg/£10	AB 1	PS 49	PS 50	AB 2	AB 3			
Toirt-air-falbh fo 10sg/£10	AB 4	AB 5	AB 6					
A' cleachdadh bhonn 1sg, 2sg agus 5sg	PS 51	PS 52	PS 53	AB 7	AB 8	AB 9	AB 10	HA 22
Measadh	AB 11	AB 12						

# Clàr Obrach: MHA 1

## Cumadh

Cumadh 3T	PS 54	PS 55

Àite agus gluasad	
-------------------	--

Cumadh 2T	PS 56	PS 57

## Tomhas

Faid	PS 58	PS 59

Cuideam	
---------	--

Tomhas-lionaidh	
-----------------	--

An uair: làithean na seachdain	
--------------------------------	--

An uair: ag innse na h-uarach	PS 60	AB 13	AB 14	AB 15

## Làimhseachadh dàta

Seòrsachadh, maidseadh, ceanglaichean	PS 5	PS 6	PS 7	AB 16	PS 61	AB 17	AB 18	PS 62	PS 63	PS 64

Grafan bann	PS 65	AB 19	AB 20	PS 66	AB 21	AB 22	AB 23

## Ath Obair 1

1	2	3	4	5	6	7	8	9	10	11	12	13	14	15

## Ath Obair 2

1	2	3	4	5	6	7	8	9	10	11	12

Foillsichearan Foghlaim Heinemann, Halley Court, Jordan Hill, Oxford OX2 8EJ

© Scottish Primary Mathematics Group

a' chiad fhoillseachadh 2000

A' chiad fhoillseachadh anns a' Ghàidhlig le Stòrlann Nàiseanta na Gàidhlig às leth Riaghaltas na h-Alba.

Air ath-fhoillseachadh ann an 2005, 2012.

© na Gàidhlig Stòrlann Nàiseanta na Gàidhlig

Na còraichean uile glèidhte. Chan fhaodar pàirt sam bith dhen leabhar seo ath-riochdachadh ann an cruth

sam bith gun chead ro-làmh ann an sgrìobhadh bho Stòrlann Nàiseanta na Gàidhlig.

Tha Stòrlann Nàiseanta na Gàidhlig a' faighinn taic bho Bhòrd na Gàidhlig.



ISBN: 978-1-907054-56-3