




M H A

2

Matamataig Heinemann Alba

Leabhar Leudachaidh Àireamh



Ainm _____

Cuir crìoch.

97 98 99

700 701 702

346 347 349

595 596 597

105 104 103

474 473 471

800 797 796

513 512 511

Sgrìobh an àireamh

an dèidh 222

an dèidh 300

an dèidh 109

an dèidh 199

ro 306

ro 440

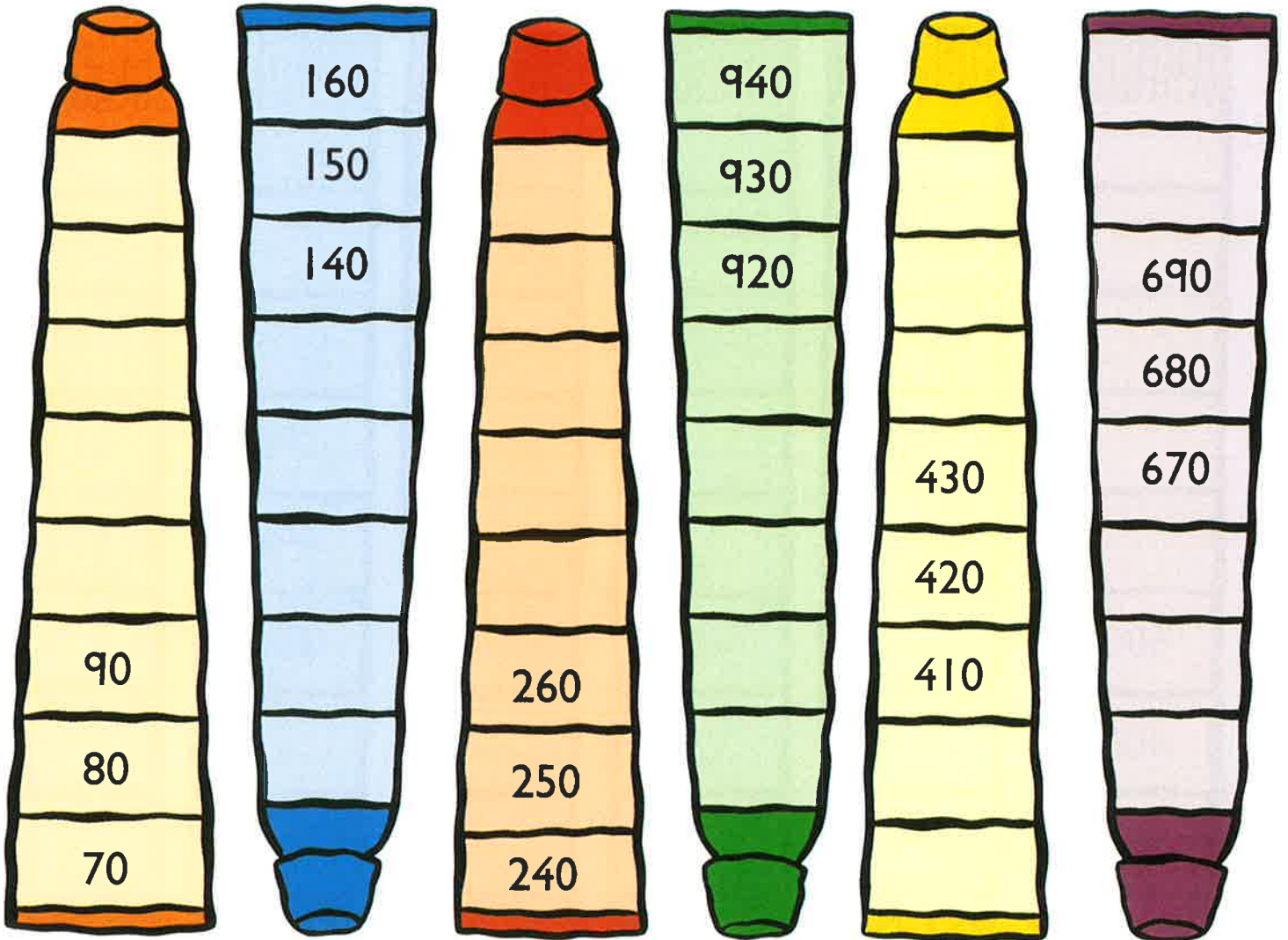
ro 501

ro 900

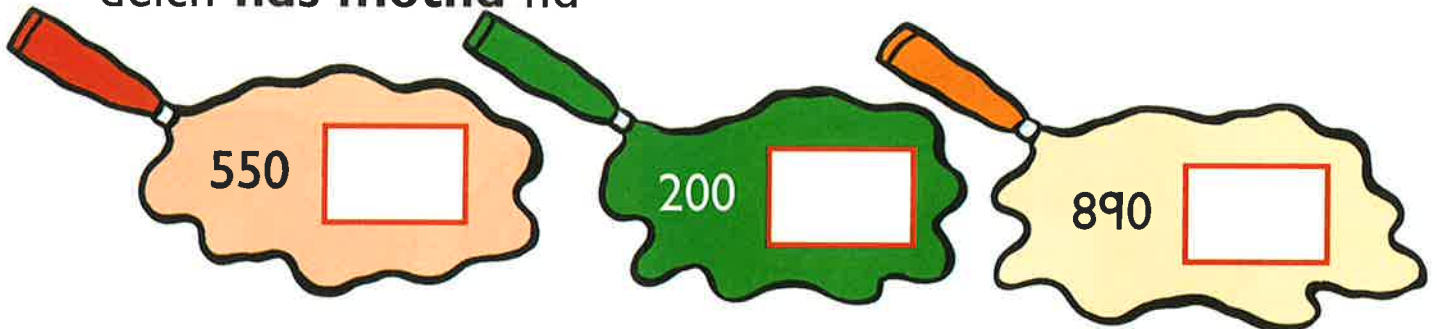
eadar 639 agus 641

eadar 299 agus 301

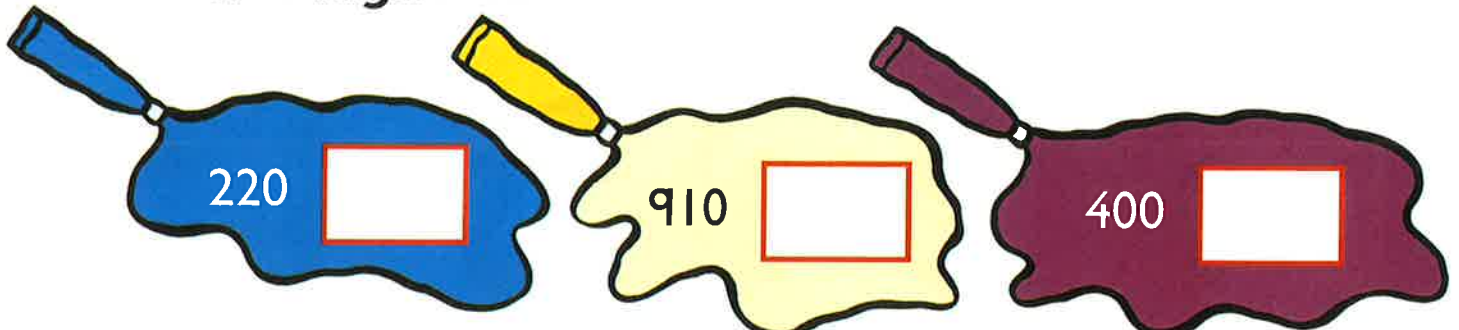
Cuir crìoch.

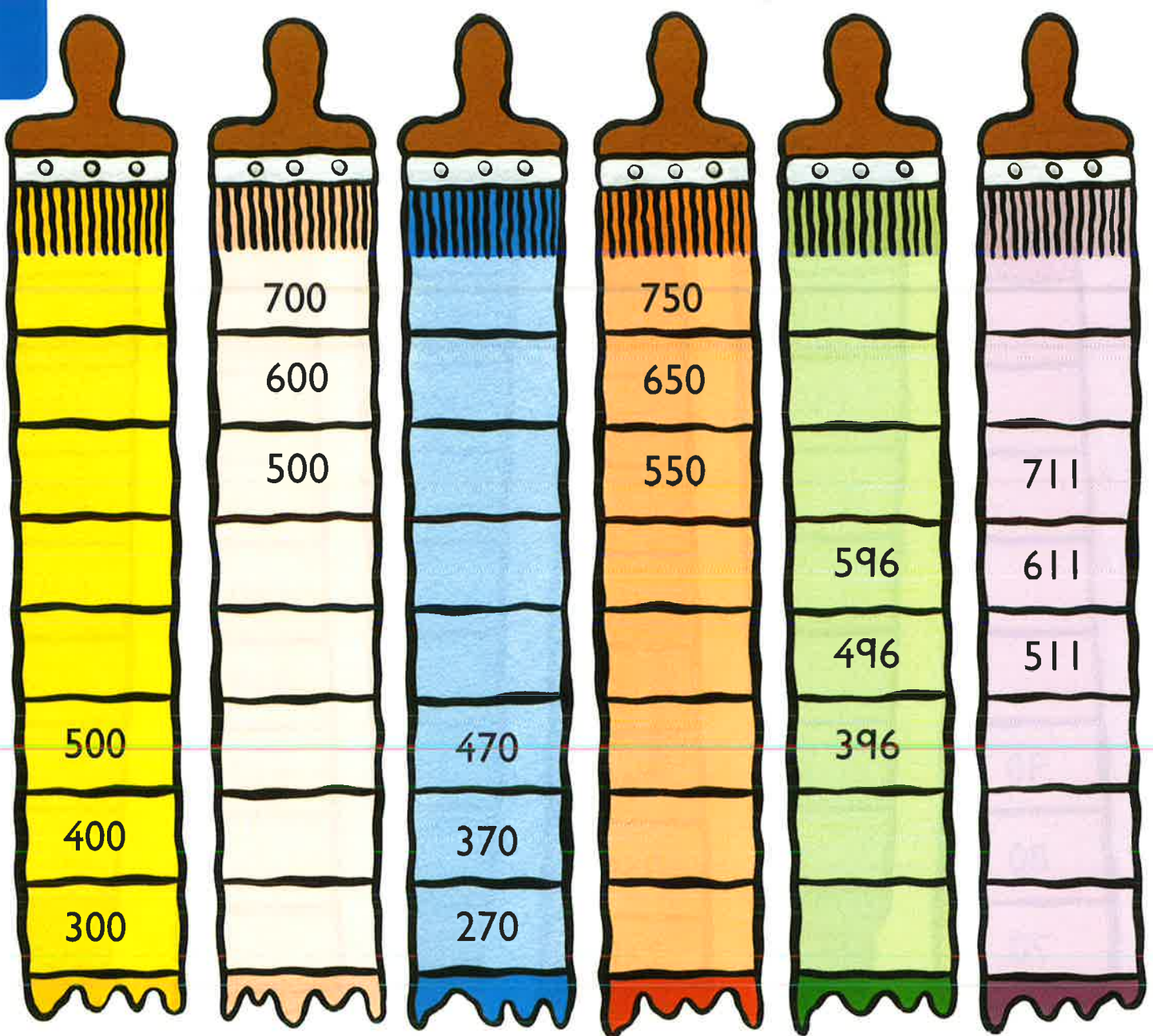


Sgrìobh an àireamh a tha
deich **nas motha** na



deich **nas lugha** na






Sgrìobh an àireamh a tha
ceud **nas motha** na



ceud **nas lugha** na



Maidis agus cuir dath.

1 nas lugha
na 336

335

1 nas motha
na 69

1 nas motha
na 334

70

100 nas
lugha na 170

100 nas motha
na 530

700


100 nas lugha
na 435

10 nas motha
na 690

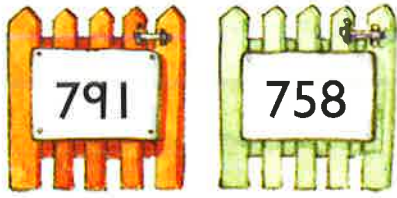
630

10 nas lugha
na 640

Maidis.



Cuir dath dearg air an àireimh **as lugha**.
Cuir dath uaine air an àireimh **as motha**.



Cleachd **5** **4** **6**. Sgrìobh àireamh

nas motha na 600 _____ **nas lugha** na 460. _____

Cuir dath dearg air an àireimh **as lugha**.
Cuir dath uaine air an àireimh **as motha**.




Cò aig a tha an àireamh **as motha**? _____

Cò aig a tha an àireamh **as lugha**? _____



Sgrìobh na h-àireamhan ann an òrdugh. Tòisich leis an àireimh



Cleachd agus dèan àireamhan le 3 figearan.

Sgrìobh na h-àireamhan ann an òrdugh. Tòisich leis an tè **as lugha**.



Sgrìobh **dà** àireamh eadar

920 _____ 930

570 _____ 600

740 _____ 760

305 _____ 315



Sgrìobh **an** àireamh a tha letheach eadar

300 agus 400

100 agus 200

600 agus 700

900 agus 1000

450 agus 550

850 agus 950



$$34\text{sg} + 3\text{sg} = \boxed{} \text{sg}$$

$$25 + 3 = \boxed{}$$

$$42 + 4 = \boxed{}$$

$$50 + 5 = \boxed{}$$

$$37 + 2 = \boxed{}$$

$$7 + 60 = \boxed{}$$

$$21 + 2 = \boxed{}$$

$$80 + 6 = \boxed{}$$

$$33 + 3 = \boxed{}$$

$$5 + 41 = \boxed{}$$

$$3 + 5 = \boxed{}$$

$$2 + 7 = \boxed{}$$

$$4 + 4 = \boxed{}$$

$$13 + 5 = \boxed{}$$

$$12 + 7 = \boxed{}$$

$$4 + 14 = \boxed{}$$

$$23 + 5 = \boxed{}$$

$$22 + 7 = \boxed{}$$

$$4 + 24 = \boxed{}$$

$$33 + 5 = \boxed{}$$

$$32 + 7 = \boxed{}$$

$$4 + 34 = \boxed{}$$

$$43 + 5 = \boxed{}$$

$$52 + 7 = \boxed{}$$

$$4 + 64 = \boxed{}$$

$$83 + 5 = \boxed{}$$

$$72 + 7 = \boxed{}$$

$$4 + 94 = \boxed{}$$

$2 + 3 = \square$

$6 + 2 = \square$

$4 + 3 = \square$

$32 + 3 = \square$

$36 + 2 = \square$

$54 + 3 = \square$

$64 + 5 = \square$

$76 + 3 = \square$

$91 + 7 = \square$

$71 + 6 = \square$

$55 + 4 = \square$


$73 + 2 = \square$

$85 + 2 = \square$

$33 + 6 = \square$

$8 + 81 = \square$

Thoir 4 a bharrachd do gach sgoilear.



23 sgoilearan san talla.
4 a' tighinn a-steach.
Cia mheud a-nis? _____

$30 + \square = 38$

$22 + \square = 27$

$63 + \square = 69$

$\square + 2 = 92$

$\square + 4 = 55$

$\square + 6 = 78$



$$30\text{sg} + 10\text{sg} = \boxed{} \text{sg}$$



$$20\text{sg} + 10\text{sg} = \boxed{} \text{sg}$$



$$40\text{sg} + 10\text{sg} = \boxed{} \text{sg}$$

$$10\text{sg} + 10\text{sg} = \boxed{} \text{sg}$$

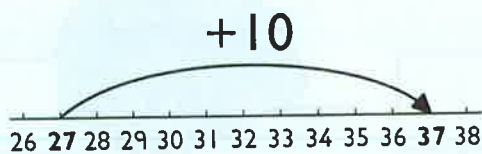
$$60\text{sg} + 10\text{sg} = \boxed{} \text{sg}$$

$$10\text{sg} + 80\text{sg} = \boxed{} \text{sg}$$

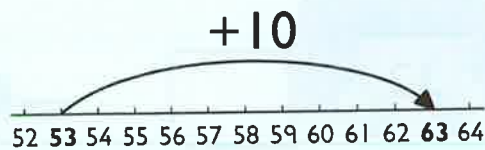
$$50 + 10 = \boxed{}$$

$$10 + 70 = \boxed{}$$

$$90 + 10 = \boxed{}$$



$$27 + 10 = \boxed{}$$



$$53 + 10 = \boxed{}$$

$$32 + 10 = \boxed{}$$

$$39 + 10 = \boxed{}$$

$$51 + 10 = \boxed{}$$

$$58 + 10 = \boxed{}$$

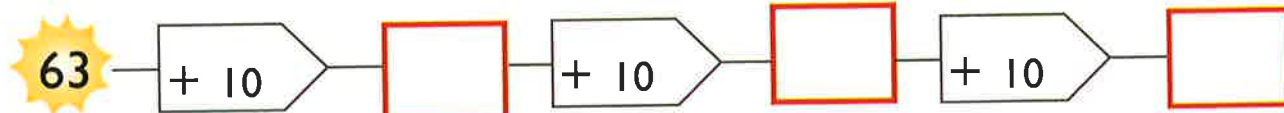
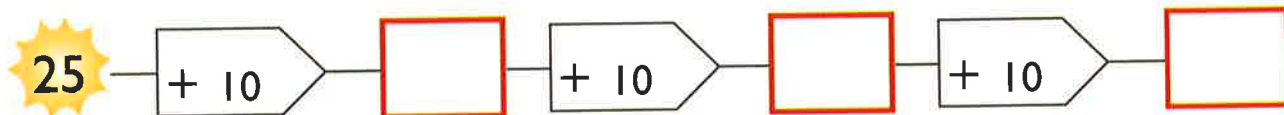
$$10 + 44 = \boxed{}$$


$$75 + 10 = \boxed{}$$

$$\boxed{} + 10 = 89$$

$$\boxed{} + 10 = 67$$

$$10 + \boxed{} = 48$$





$$40 + 30 = \square$$



$$60 + 20 = \square$$



$$20 + 50 = \square$$



$$3 + 6 = \underline{\quad}$$

$$5 + 3 = \underline{\quad}$$

$$30 + 60 = \underline{\quad}$$

$$50 + 30 = \underline{\quad}$$

$$10 + 10 = \square$$

$$30 + 50 = \square$$

$$20 + 20 = \square$$

$$30 + 20 = \square$$

$$20 + 40 = \square$$


$$30 + 30 = \square$$

$$50 + 40 = \square$$

$$40 + 40 = \square$$

$$70 + 20 = \square$$

Maidis gus 100 a dhèanamh.



$$52 + 20 = \square$$



$$28 + 40 = \square$$



$$35 + 50 = \square$$



$$40 + 47 = \square$$



$$64 + 30 = \square$$



$$50 + 46 = \square$$



$$34 + 30 = \square$$



$$71 + 20 = \square$$

$$19 + 60 = \square$$

$$58 + 20 = \square$$

$$30 + 52 = \square$$

$$33 + 60 = \square$$

$$16 + 80 = \square$$

$$29 + 70 = \square$$

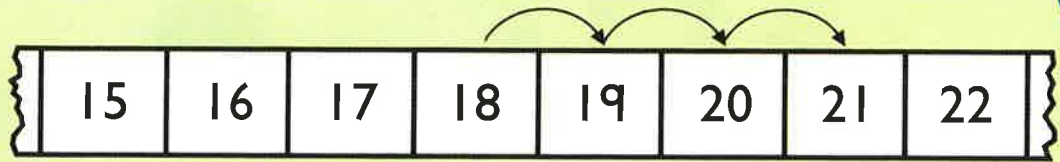
$$50 + 23 = \square$$

$$62 + 30 = \square$$

$$45 + \square = 65$$

$$14 + \square = 84$$

$$37 + \square = 77$$



18 cuir-ris 3

$$18 + 3 = \square$$

$$17 + 4 = \square$$

$$19 + 3 = \square$$

$$18 + 4 = \square$$

$$16 + 5 = \square$$

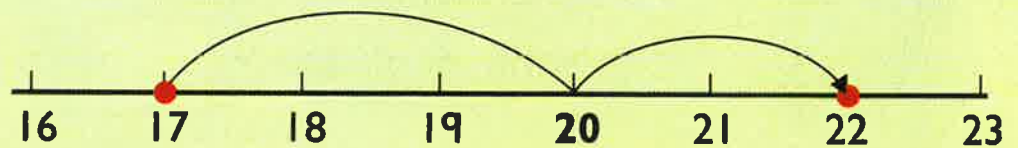
$$15 + 6 = \square$$

$$18 + 5 = \square$$

$$19 + 2 = \square$$

$$17 + 5 = \square$$

$$19 + 4 = \square$$



17 cuir-ris 5

$$17 + 5 = \square$$

$$16 + 8 = \square$$

$$18 + 7 = \square$$

$$16 + 9 = \square$$

$$15 + 8 = \square$$

$$12 + 9 = \square$$

$$14 + 8 = \square$$

$$17 + 7 = \square$$

$$19 + 6 = \square$$

$$18 + 8 = \square$$

$$9 + 13 = \square$$

$$7 + 16 = \square$$

$$9 + 15 = \square$$

$$19 + \square = 27$$

$$15 + \square = 22$$

$$18 + \square = 24$$

$8 + 6 = \square$
 $18 + 6 = \square$

$4 + 7 = \square$
 $14 + 7 = \square$

$13 + 8 = \square$ $19 + 5 = \square$ $14 + 9 = \square$
 $16 + 6 = \square$ $8 + 17 = \square$ $9 + 19 = \square$

19  agus 7  .
 Cia mheud gu lèir?



$28 + 3 = \square$

$69 + 3 = \square$



$47 + 5 = \square$

$4 + 58 = \square$



$4 + 39 = \square$

$76 + 5 = \square$



$$2 + 15 + 3 = \underline{\quad}$$

$$4 + 12 + 2 = \underline{\quad}$$

$$5 + 2 + 22 = \underline{\quad}$$

$$21 + 1 + 7 = \underline{\quad}$$

$$3 + 33 + 3 = \underline{\quad}$$

$$13 + 5 + \square = 19$$

$$5 + 5 + \square = 30$$



$$2 + \square + 20 = 28$$

$$\square + 14 + 3 = 20$$

Cuir dath air trì  gus 29 a dhèanamh.



Dèan 100.



1

$30 + 7 = \square$

$80 + 5 = \square$

$3 + 60 = \square$

$46 + 3 = \square$

$4 + 54 = \square$

$81 + 6 = \square$

$40 + \square = 46$

$32 + \square = 39$

$65 + \square = 68$

2 Maids gus 80 a dhèanamh.



$38 + 10 = \square$

$43 + 10 = \square$

$10 + 86 = \square$

$29 + 30 = \square$

$40 + 46 = \square$

$50 + 23 = \square$

3

$14 + 7 = \square$

$8 + 15 = \square$

$19 + 5 = \square$

$16 + \square = 22$

$13 + \square = 21$


$17 + \square = 23$

4

$2 + 32 + 3 = \square$

$5 + 22 + 1 = \square$

Cuir dath air trì àireamhan gus 100 a dhèanamh.





41	42	43	44	45	46	47	48	49	50
51	52	53	54	55	56	57	58	59	60
61	62	63	64	65	66	67	68	69	70
71	72	73	74	75	76	77	78	79	80



$76 - 3 = \square$

$64 - 2 = \square$

$49 - 8 = \square$

$60 - 3 = \square$

$75 - 4 = \square$

$59 - 8 = \square$

$36 - 2 = \square$

$98 - 4 = \square$

$27 - 5 = \square$

$87 - 5 = \square$

$28 - 6 = \square$

$94 - 4 = \square$

$68 \text{ thoir air falbh } 7 = \square$

$37 \text{ thoir air falbh } 4 = \square$

$\text{Thoir } 9 \text{ bho } 80. \square$

$\text{Thoir air falbh } 3 \text{ bho } 79. \square$

Maids.



23



33



45





$8 - 3 =$

$6 - 5 =$

$10 - 6 =$

$18 - 3 =$

$16 - 5 =$

$20 - 6 =$

$28 - 3 =$

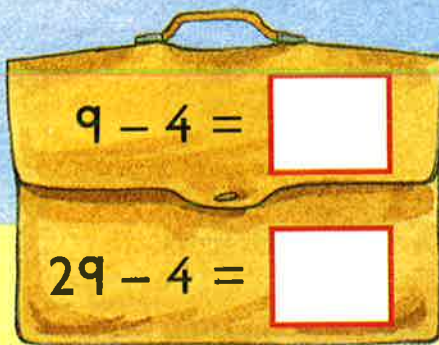
$26 - 5 =$

$30 - 6 =$

$68 - 3 =$

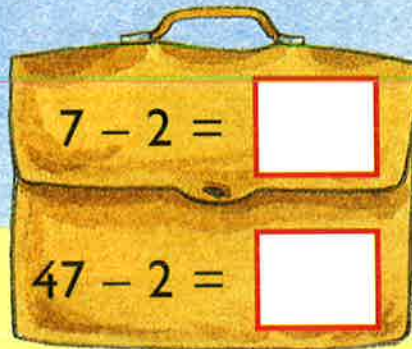
$56 - 5 =$

$70 - 6 =$



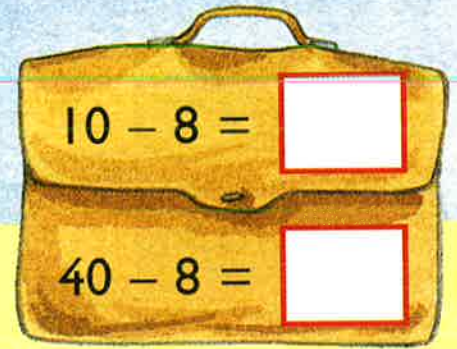
$9 - 4 =$

$29 - 4 =$



$7 - 2 =$

$47 - 2 =$



$10 - 8 =$

$40 - 8 =$

$65 - 3 =$

$88 - 6 =$

$74 - 2 =$

$97 - 3 =$

$69 - 9 =$

$85 - 4 =$

$78 - 7 =$

$96 - 5 =$

$50 - 2 =$

$39 - 8 =$

$67 - 4 =$

$86 - 5 =$

$95 - \square = 93$

$58 - \square = 54$

$\square - 1 = 33$

$\square - 4 = 56$



Thoir air falbh 10sg.



$$30\text{sg} - 10\text{sg} = \boxed{} \text{sg}$$



$$50\text{sg} - 10\text{sg} = \boxed{} \text{sg}$$



$$33\text{sg} - 10\text{sg} = \boxed{} \text{sg}$$

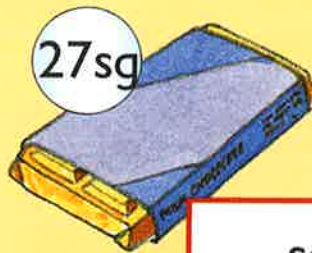


$$41\text{sg} - 10\text{sg} = \boxed{} \text{sg}$$

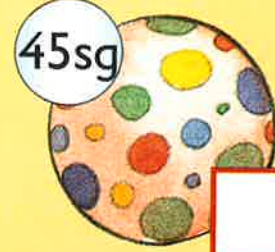
Thoir 10sg dheth.



sg



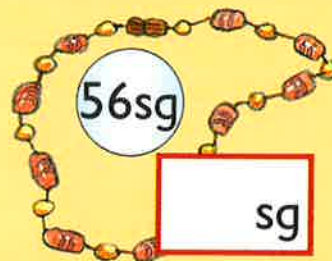
sg



sg



sg



sg



sg

$$40 - 10 = \boxed{}$$

$$59 - 10 = \boxed{}$$

$$100 - 10 = \boxed{}$$

$$66 - 10 = \boxed{}$$

$$95 - 10 = \boxed{}$$


$$71 - 10 = \boxed{}$$

$$\boxed{} - 10 = 68$$


$$\boxed{} - 10 = 80$$

$$36 - \boxed{} = 26$$

$90 - 40 = \square$



$70 - 30 = \square$



$80 - 20 = \square$

$50 - 40 = \square$

$90 - 50 = \square$

$8 - 4 = \underline{\quad}$

$6 - 5 = \underline{\quad}$

$7 - 2 = \underline{\quad}$

$80 - 40 = \underline{\quad}$

$60 - 50 = \underline{\quad}$

$70 - 20 = \underline{\quad}$

$40 - 20 = \underline{\quad}$

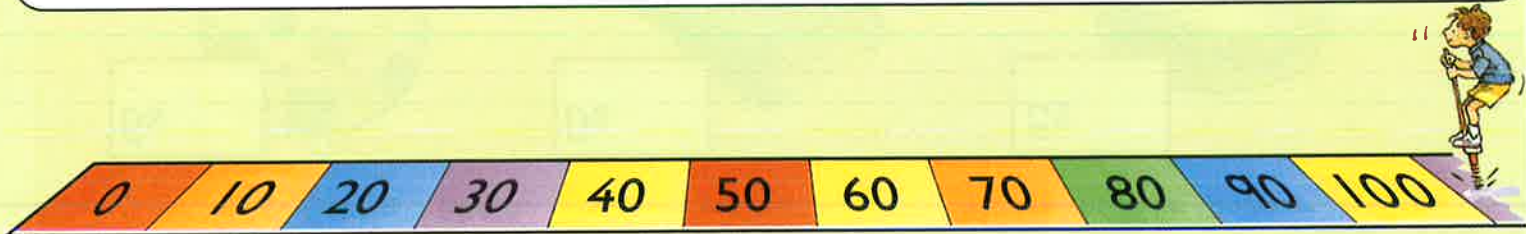
$70 - 40 = \underline{\quad}$

$90 - 30 = \underline{\quad}$

$70 - 50 = \underline{\quad}$

$60 - 40 = \underline{\quad}$

$80 - 70 = \underline{\quad}$



$100 - 20 = \square$

$100 - 90 = \square$

$100 - \square = 50$

$100 - 60 = \square$

$100 - 40 = \square$

$100 - \square = 70$

Dèan 30.

$80 - \square$

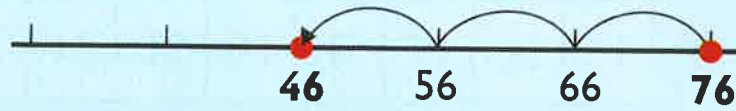
$50 - \square$

$\square - 30$

$\square - 60$



$76 - 30 = \square$



$85 - 50 = \square$



$64 - 40 = \square$



Thoir air falbh 20 bho gach . Cuir dath air do fhreagairt.

11	12	13	14	15	16	17	18	19	20
21	22	23	24	25	26	27	28	29	30
31	32	33	34	35	36	37	38	39	40
41	42	43	44	45	46	47	48	49	50
51	52	53	54	55	56	57	58	59	60

$72 - 50 = \square$

$84 - 70 = \square$

$93 - 60 = \square$

$79 - 40 = \square$

$99 - 50 = \square$

$67 - 50 = \square$

$88 - \square = 48$

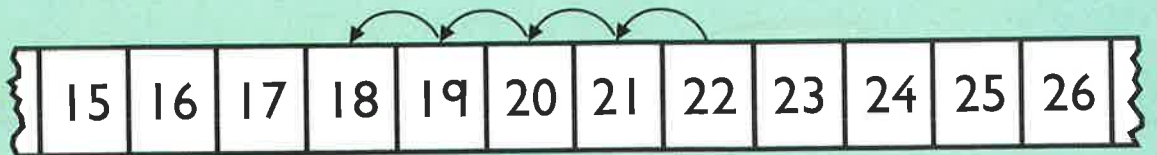
$66 - \square = 36$

$95 - \square = 65$

$\square - 50 = 15$

$\square - 60 = 21$

$\square - 40 = 18$



22 thoir air falbh 4.

$$22 - 4 = \square$$

$$21 - 2 = \square$$

$$23 - 4 = \square$$

$$22 - 5 = \square$$

$$21 - 4 = \square$$

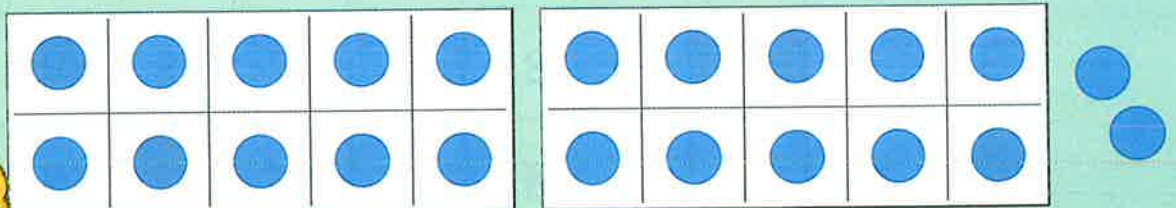
$$24 - 5 = \square$$

$$21 - 3 = \square$$

$$22 - 3 = \square$$

$$23 - 5 = \square$$

$$23 - 6 = \square$$



22 thoir air falbh 6.

$$22 - 6 = \square$$

$$25 - 7 = \square$$

$$21 - 8 = \square$$

$$26 - 9 = \square$$

$$22 - 8 = \square$$

$$25 - 6 = \square$$

$$27 - 8 = \square$$

$$24 - 6 = \square$$

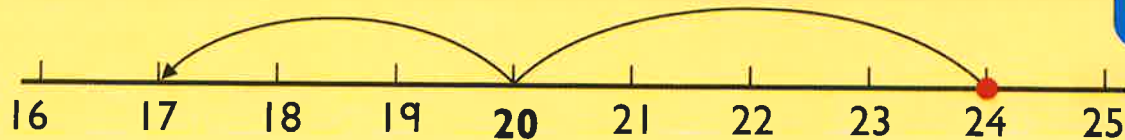
$$28 - 9 = \square$$

$$21 - 9 = \square$$

$$23 - 9 = \square$$

$$26 - 7 = \square$$

$$24 - 8 = \square$$



24 thoir air falbh 7.

$$24 - 7 = \square$$

$$25 - 9 = \square$$

$$21 - 6 = \square$$

$$23 - 8 = \square$$

$$23 - 7 = \square$$

$$26 - 8 = \square$$

$$22 - 7 = \square$$

$$24 - 9 = \square$$

$$21 - 7 = \square$$

$$23 - 9 = \square$$

$$25 - \square = 17$$

$$21 - \square = 16$$

$$27 - \square = 18$$

Tha 22 bailiùnaichean aig Anna.
Tha 9 air spreadhadh!
Cia mhead a tha air fhàgail? _____



Thoir 6 biastagan bho gach duilleag.



Tha 26sg aig Sol.
Cheannaich e ubhal.
Dè na tha aige air fhàgail? _____



1 Maids.

$48 - 4$

$77 - 2$

$86 - 4$

42

44

64

75

82

$45 - 3$

$50 - 6$

$69 - 5$

2

$70 - 10 = \square$

$64 - 10 = \square$

$93 - 10 = \square$

$57 - \square = 47$

$76 - \square = 66$

$\square - 10 = 25$

3

$60 - 20 = \square$

$90 - 40 = \square$

$50 - 30 = \square$

$84 - 30 = \square$

$71 - 50 = \square$

$99 - 60 = \square$

4

$21 - 4 = \square$

$23 - 5 = \square$

$22 - 3 = \square$

Thoir 7 bho 24. \square

Thoir 6 air falbh bho 25. \square

Toirt air falbh: a' measadh

