

Cunnt ann an trithean.
Cuir dath.

1	2	3	4	5	6	7	8	9	10	11	12
											13
29	30	31	32	33	34	35	36				14
28											15
27	26	25	24	23	22	21	20	19	18	17	16

Cuir dearg air na h-àireamhan corra.

1	2	3	4	5	6
16	17	18	19	20	7
15	24	23	22	21	8
14	13	12	11	10	9

Cuir dearg air na h-àireamhan cothromach.

20	25	30	35	40	45
21	26	31	36	41	46
22	27	32	37	42	47
23	28	33	38	43	48
24	29	34	39	44	49

Cia mhead a tha ann gu lèir?

miotagan

flùraichean

Cunnt ann an dhàthan bho


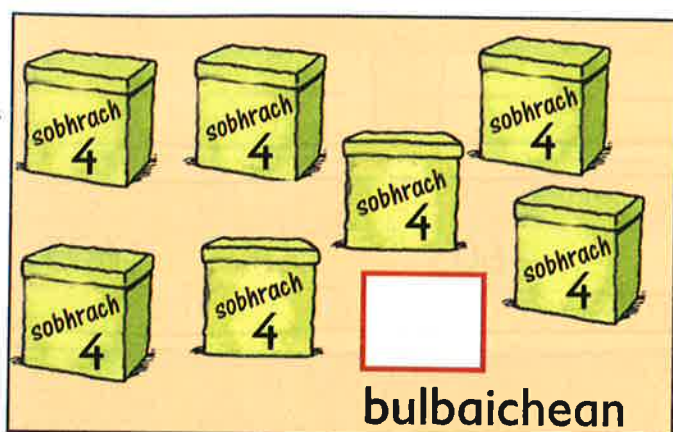


- 20 gu 36 25 gu 43 50 gu 30

Cunnt ann an trithean bho

- 0 gu 24 15 gu 36 21 gu 0



Cia mhead a tha ann gu lèir?



Crìochnaich seo.

0	5	10			25		35			
0	4			16					36	
	45				25	20	15			
			28	24	20			8		



Cunnt ann an còigean bho

0 gu 30

25 gu 50

50 gu 30

35 gu 10

Cunnt ann an ceithirean bho

0 gu 30

16 gu 40

48 gu 32

36 gu 8

Sgrìobh na h-àireamhan tha a dhith.

500

501

502

395

396

397

197

198

199

603

604

605

811

812

813

101

102

103

302

301

802


801

179

178

997

996



Cuir dath dearg air an àireamh

an dèidh 364

an dèidh 270

an dèidh 499

an dèidh 550

Cuir dath buidhe air an àireamh

ro 693

ro 950

ro 716

ro 500

Cuir dath gorm air an àireamh

an dèidh 823

ro 100

an dèidh 866

ro 1000

Sgrìobh an àireamh an dèidh

657 _____

291 _____

804 _____

699 _____

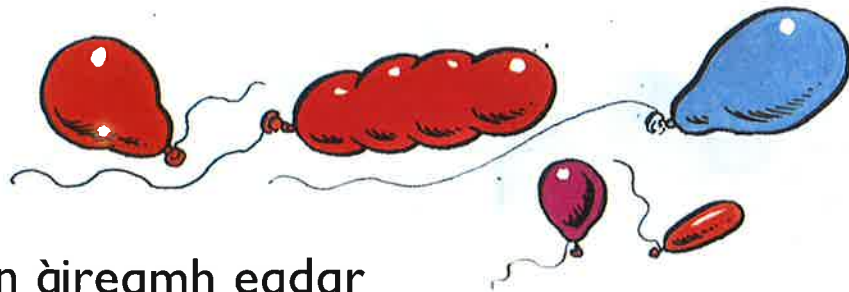

Sgrìobh an àireamh ro

514 _____

327 _____

800 _____

311 _____



Sgrìobh an àireamh eadar

156 agus 158 _____

732 agus 734 _____

981 agus 983 _____

218 agus 220 _____

847 agus 845 _____

470 agus 468 _____

527 agus 529 _____

801 agus 799 _____

111 agus 109 _____

749 agus 751 _____

299 agus 301 _____

1000 agus 998 _____

Sgrìobh an h-àireamhan eadar

198 _____ 201

402 _____ 398

Maids.

àireamh eadar
498 agus 501

an àireamh
ro 813

àireamh eadar
156 agus 160

an àireamh
an dèidh 949







an àireamh
an dèidh 157

àireamh eadar
815 agus 805

an àireamh
ro 501

àireamh eadar
960 agus 940

Sgrìobh an àireamh a tha:

 1 a bharrachd air	 2 a bharrachd air	 aon nas lugha na	 dhà nas lugha na
173	508	236	702
284	614	653	657
389	998	440	901
499	899	800	1000



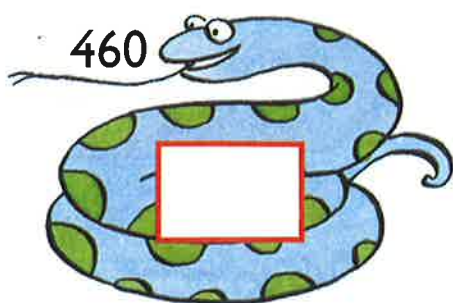
Maid.

aon a bharrachd air 754	900	2 a bharrachd air 588
dhà a bharrachd air 898	755	1 a bharrachd air 309
aon nas lugha na 311	590	2 nas lugha na 757
dhà nas lugha na 592	310	1 nas lugha na 901




Crìochnaich seo.

		650		743	
		640		733	
		630		723	882
					872
90	320		267		862
80	310		257		
70	300		247		

Sgrìobh an àireamh a tha 10 a bharrachd air:



Sgrìobh an àireamh a tha deich nas lugha na:



Crìochnaich seo.

400	500	600				
-----	-----	-----	--	--	--	--

				400	500	600
--	--	--	--	-----	-----	-----

260	360	460				
-----	-----	-----	--	--	--	--



					530	630	730
--	--	--	--	--	-----	-----	-----

		543	643	743		
--	--	-----	-----	-----	--	--

		255	355	455		
--	--	-----	-----	-----	--	--

650	700	750				
-----	-----	-----	--	--	--	--

				250	300	350
--	--	--	--	-----	-----	-----



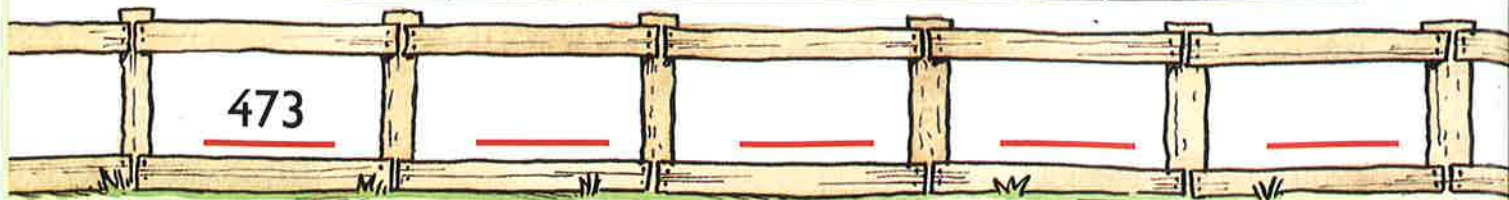
Sgrìobh an àireamh a tha
ceud a bharrachd air

807	→	
478	→	
900	→	

100 nas lugha na

606	→	
165	→	
1000	→	

Cuir-ris 10 Cuir-ris 10 Cuir-ris 10 Cuir-ris 10

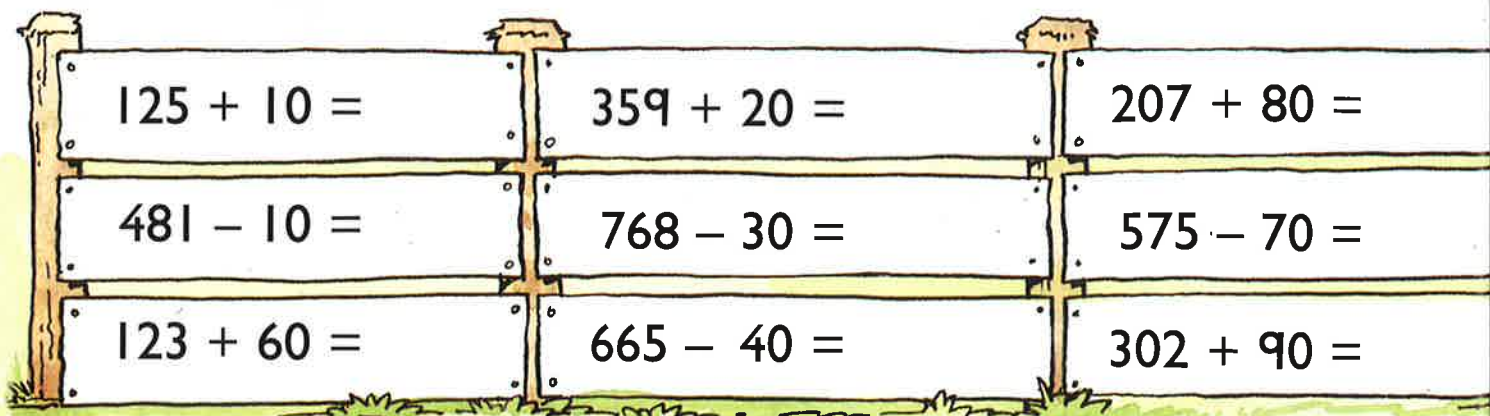

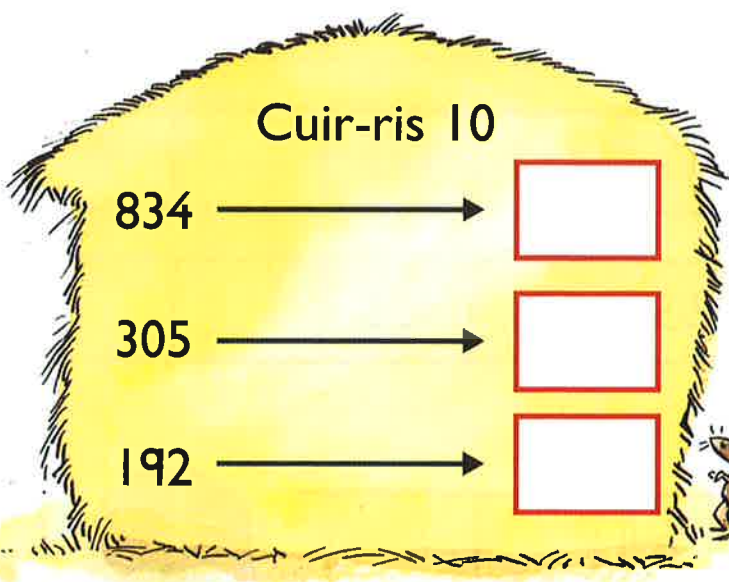
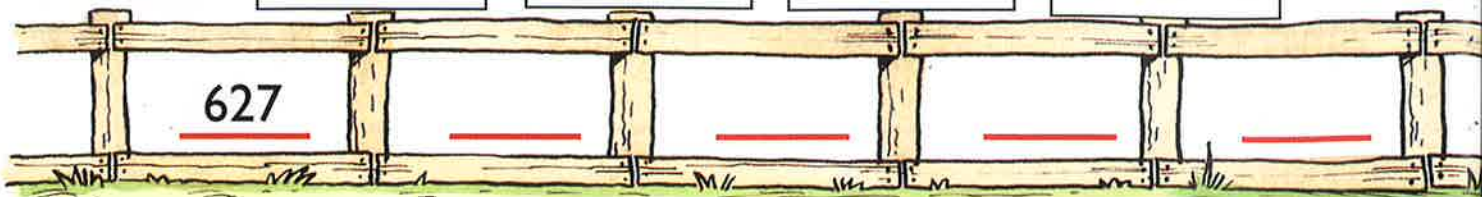


Thoir air
falbh 10

Thoir air
falbh 10

Thoir air
falbh 10

Thoir air
falbh 10



$$658 - \square = 648$$

$$419 - \square = 469$$

$$804 - \square = 8$$

$$775 - \square = 705$$

$$362 - \square = 322$$

$$991 - \square = 9$$

Cuir-ris 100 Cuir-ris 100 Cuir-ris 100 Cuir-ris 100

543

Thoir air
falbh 100

Thoir air
falbh 100

Thoir air
falbh 100

Thoir air
falbh 100

508

Cuir-ris 100

582



195



803



Thoir air falbh 100

444



901



590



$537 + 300 = \square$

$672 - 200 = \square$

$187 + 600 = \square$

$263 + 400 = \square$

$504 - 300 = \square$

$490 - 400 = \square$

$527 + \square = 727$

$309 + \square = 409$

$746 - \square = 146$

$605 - \square = 505$

$258 - \square = 958$

$999 - \square = 199$

Cia mheud?

100 100 100 100

10 10 10 10

10 10 10

☆☆

100 100 100 100

100 100 100 100

10 10 10 10 10

☆☆☆



100 10 10 10 10

100 10 10 10 10


Christmas trees

100 100 100

100 100 100

10 10 10 10 10 10

Holly leaves



100 100 100 100

100 100 100

10 10 10

Bells

100 100



100 100

100

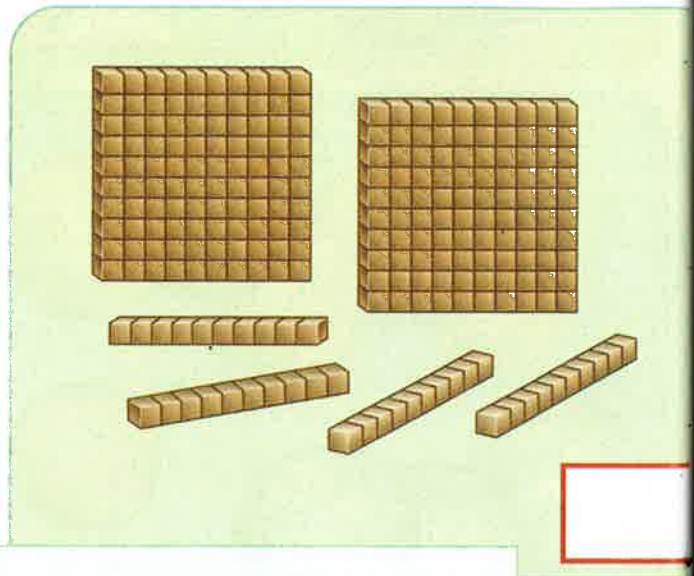
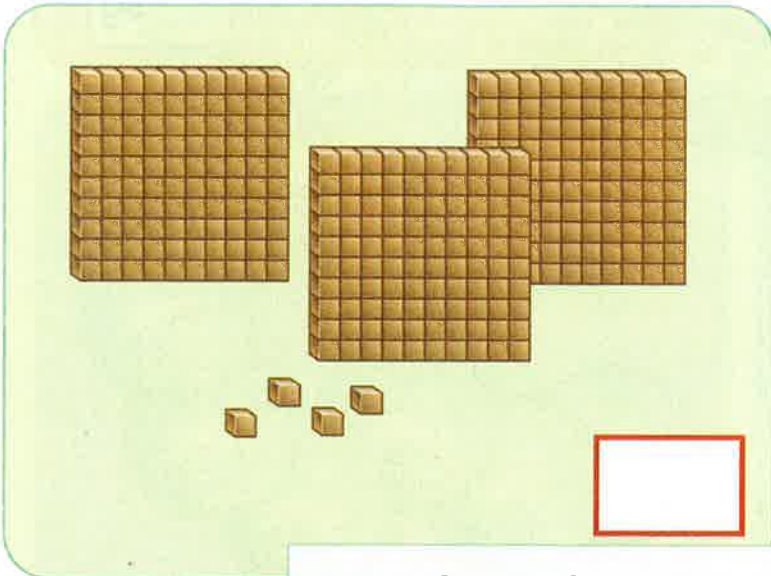


10 10 10 10

Bells



Cia mheud sgillinn?



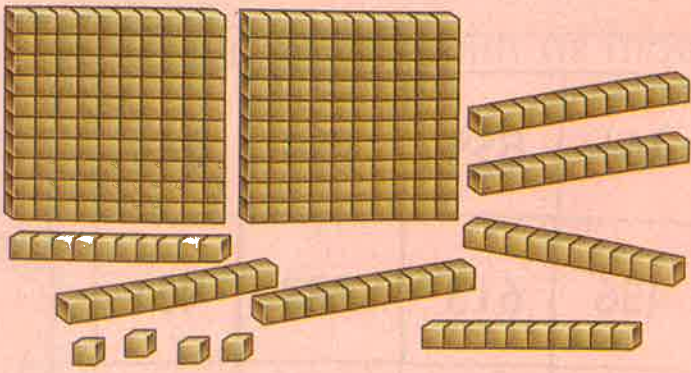
Cia mheud a tha ann?



Cuir ✓ air an àireamh as motha.




Cuir ✓ air an àireamh as lugha.



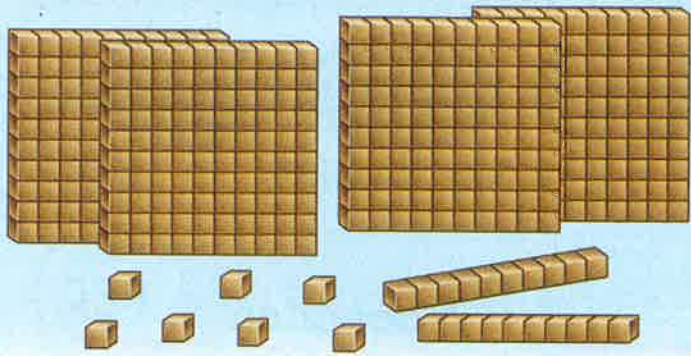
2 ceudan, 7 deicean agus 4 aonadan

$$200 + 70 + \quad = \underline{\quad}$$




3 ceudan _____ deicean
agus _____ aonadan

$$+ \quad + \quad = \underline{\quad}$$



_____ ceudan _____ deicean
agus _____ aonadan

$$+ \quad + \quad = \underline{\quad}$$



_____ ceudan _____ deicean
agus _____ aonadan

$$+ \quad + \quad = \underline{\quad}$$

$$500 + 30 + 5 = \underline{\quad}$$

$$900 + 20 + 9 = \underline{\quad}$$

$$700 + 0 + 3 = \underline{\quad}$$

$$157 = \underline{\quad} + \underline{\quad} + \underline{\quad}$$

$$481 = \underline{\quad} + \underline{\quad} + \underline{\quad}$$

$$690 = \underline{\quad} + \underline{\quad} + \underline{\quad}$$

$$427 = 400 + \underline{\quad} + 7$$

$$293 = \underline{\quad} + 90 + 3$$

$$651 = 600 + 50 + \underline{\quad}$$

$$865 = \underline{\quad} + 60 + 5$$

$$349 = 300 + \underline{\quad} + 9$$

$$702 = 700 + \underline{\quad} + \underline{\quad}$$

Air na h-àireamhan le:

- 2 cheud – cuir dath gorm
- 5 deichean – cuir dath uaine
- 3 aonadan – cuir dath dearg.

261	859	150	244
456	613	793	951
773	208	217	683

755

879

583

300

797

938

Sgrìobh an àireamh le

5 deichean _____

8 ceudan _____

7 aonadan _____

3 aonadan _____

0 deichean _____

9 ceudan _____

Air na h-àireamhan le:

- 7 ceudan agus 5 aonadan – cuir dath buidhe
- 6 deichean agus 3 aonadan – cuir dath dearg
- 2 cheud agus 8 deichean – cuir dath donn.

563

673

735

567

286


825

287

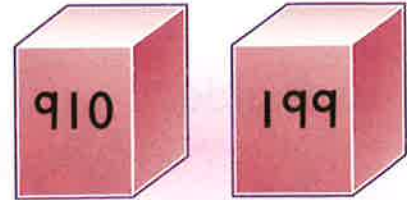
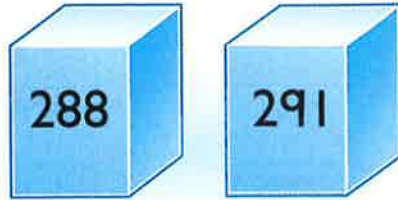

863

725

Cuir ✓ air an àireamh as motha.


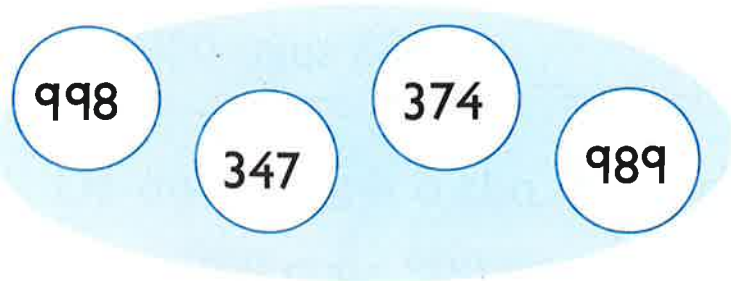

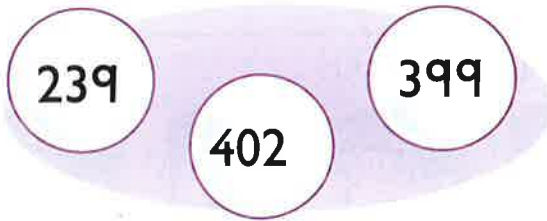


Cuir ✓ air an àireamh as lugha.



Cuir dath: • dearg air an àireamh as motha.

• uaine air an àireamh as lugha.



Sgrìobh:

an àireamh as motha _____

an àireamh as lugha _____

Sgrìobh: an àireamh eadar:

438 agus 583

583 agus 925.

Sgrìobh iad seo ann an òrdugh.
Tòisich leis an tè


as lugha



as motha



as fhaide



143 cm 121 cm 132 cm

as giorra



683 cm 386 cm 638 cm 368 cm

as aotruime



as truime



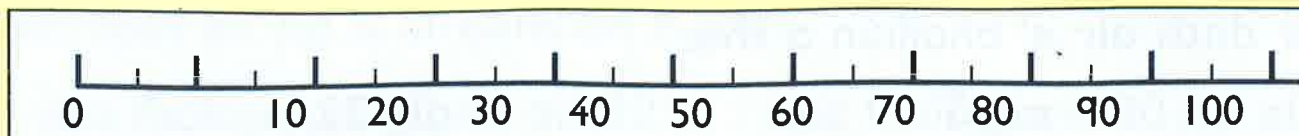
as lugha.



Cleachd **3 7 4** gus diofar àireamhan 3-figear a dhèanamh.

Sgrìobh na h-àireamhan agad ann an òrdugh.

Tòisich leis an tè as motha.



Dè an àireamh a tha letheach slighe eadar

20 agus 30 _____

70 agus 80 _____

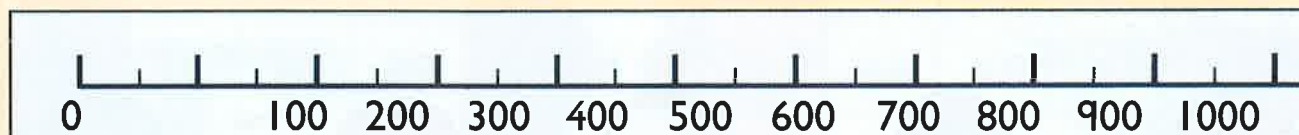

0 agus 10 _____

100 agus 90? _____

Dè an àireamh a tha letheach slighe eadar

30 agus 50 _____

80 agus 100? _____



Dè an àireamh a tha letheach slighe eadar

400 agus 500 _____

100 agus 200 _____

900 agus 800 _____

0 agus 100? _____

Dè an àireamh a tha letheach slighe eadar

700 agus 900 _____

600 agus 800 _____



Dè an àireamh a tha letheach slighe eadar

40 agus 60 _____

600 agus 700 _____

50 agus 60 _____


400 agus 200 _____

10 agus 30 _____


900 agus 1000? _____

Cuir dath air a' bhailiùn a tha:


aig 5




aig 22



aig 46




aig 78.



Muids.



Sgrìobh an àireamh air gach bailiùn.



30

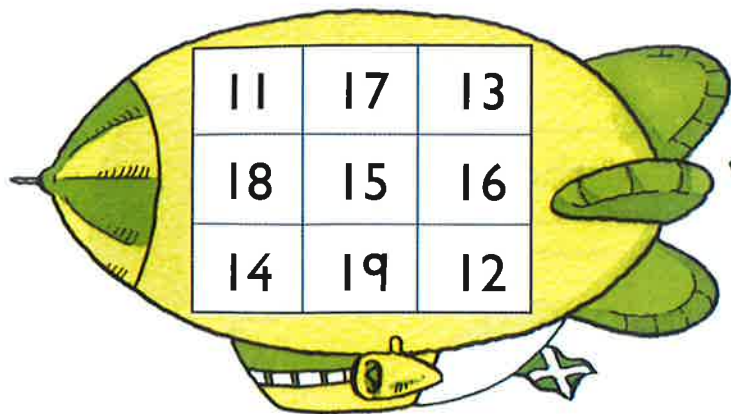
40

50

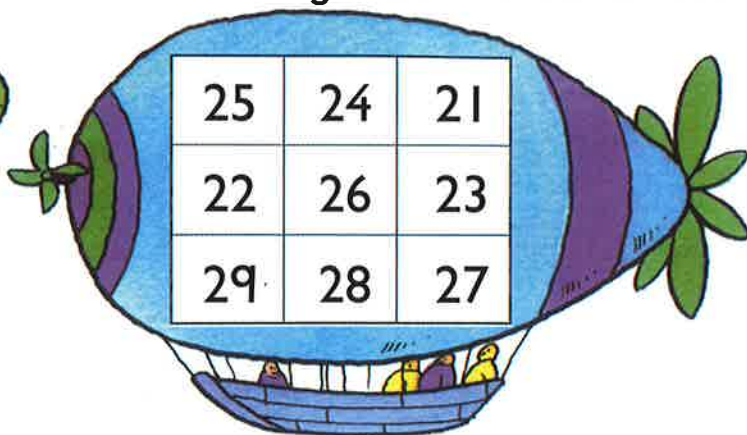
60

Cuir dath air na h-àireamhan a tha:

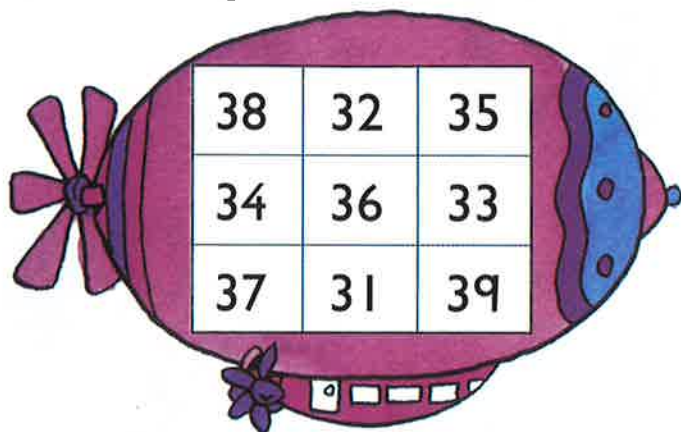
nas fhaise air 10 na air 20



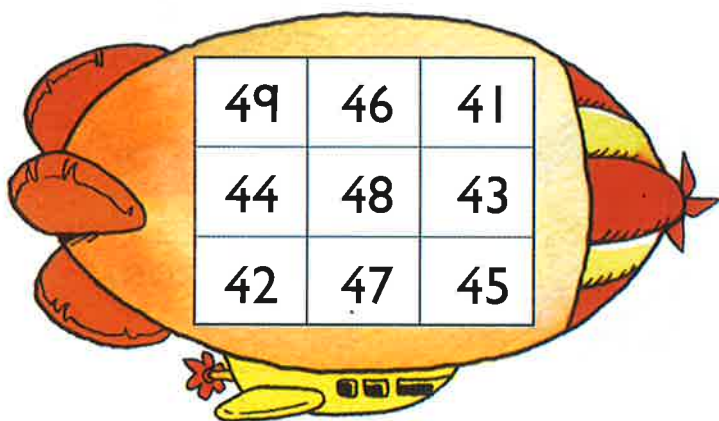
nas fhaise air 30 na air 20



nas fhaise air 30 na air 40



nas fhaise air 40 na air 50



60 70 80 90

Sgrìobh na h-àireamhan chun an deich as fhaise.

72 →

77 →

64 →

86 →

68 →

83 →

59 →

91 →

52 →

27 →

34 →

65 →

Sgrìobh gach àireamh.




Fichead




Seachdad



Ceud



Ceithir cheud




Ceathrad



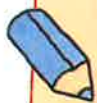
Ochdad



Trì cheud



Sia ceud



Sgrìobh iad seo ann am facail.



Sgrìobh gach àireamh sa bhogsa.



Dà cheud
's a trì

Ceithir cheud,
caogad 's a còig



Sia ceud
's a trì



Naoi ceud
's a naoi-deug



Seachd ceud 's
a ceithir-deug

Trì cheud,
seasgad 's a sia



Ochd ceud
's a h-aon



Còig cheud,
caogad 's a còig

Sgrìobh na h-àireamhan ann am facail.





Maidis iad seo le dath.

a' chiad

ceathramh

dàrna

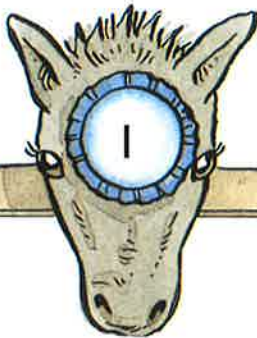


còigeamh


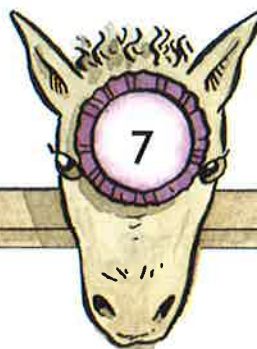
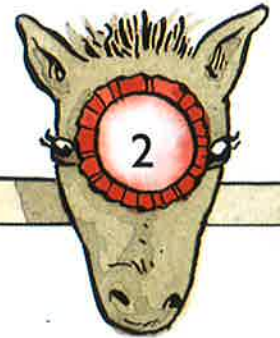
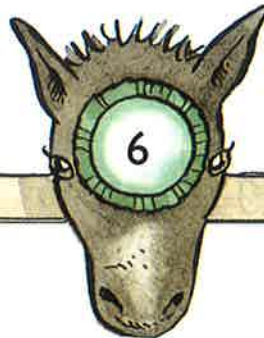
treas

deicheamh

Crìochnaich iad seo.



a' chiad



Sgrìobh iad seo ann am facail.

14mh

15mh

18mh

11mh

20mh

Cleachd **10** **70** **60** **30** **20**

Dèan 100 ann an trì dòighean eadar-dhealaichte.




Cuir dathan:

- agus gus dèanamh 50
- agus gus dèanamh 63
- agus gus dèanamh 23
- agus gus dèanamh 49.

40	2	11
38	10	33
15	30	8

Crìochnaich seo.



15	25
9	10
34	18

60	3
13	40
69	6

4	50
7	30
13	8

11	50
20	24
47	5

8	+	6
14		

	+	
100		

	+	
21		

	+	
70		

	+	
64		

	+	
26		

	+	
89		

	+	
39		

	+	
33		

	+	
57		

	+	
22		

	+	
36		



Crìochnaich seo.

 shuas staidhre	 shìos staidhre	 gu lèir
23	15	
30		64
	14	56

Chaidh 6 air.

48

54



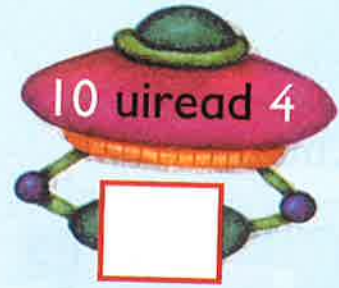

Thàinig 30 dheth

Chaidh 13 air

Thàinig 10 dheth

Thàinig 8 dheth

Chaidh 6 air



Maidis agus cuir dath...

50

90

60

2×5




10 siathan

10×9

10×5

10×1



20



$10 \times 8 =$	<input type="text"/>	$8 \times 10 =$	<input type="text"/>	$6 \times 10 =$	<input type="text"/>
$9 \times 10 =$	<input type="text"/>	$10 \times 7 =$	<input type="text"/>	$10 \times 10 =$	<input type="text"/>
$3 \times 10 =$	<input type="text"/>	$0 \times 10 =$	<input type="text"/>	$5 \times 10 =$	<input type="text"/>
$10 \times 1 =$	<input type="text"/>	$10 \times 6 =$	<input type="text"/>	$10 \times 4 =$	<input type="text"/>

Ceangail iad ann an òrdugh.

10×0 20 50 6 deichean
 1×10 3 deichean 4×10 80 7×10



$10 \times$	<input type="text"/>	$= 70$	<input type="text"/>	$\times 10 = 80$	<input type="text"/>	\times	<input type="text"/>	$= 10$
$3 \times$	<input type="text"/>	$= 30$	<input type="text"/>	$\times 10 = 20$	<input type="text"/>	\times	<input type="text"/>	$= 40$
$10 \times$	<input type="text"/>	$= 90$	<input type="text"/>	$\times 1 = 10$	<input type="text"/>	\times	<input type="text"/>	$= 100$
$5 \times$	<input type="text"/>	$= 50$	<input type="text"/>	$\times 6 = 60$	<input type="text"/>	\times	<input type="text"/>	$= 0$

$5 \times 0 =$ _____

$5 \times 1 =$ _____

$5 \times 2 =$ _____

$5 \times 3 =$ _____

$5 \times 4 =$ _____

$5 \times 5 =$ _____

$5 \times 6 =$ _____

$5 \times 7 =$ _____

$5 \times 8 =$ _____

$5 \times 9 =$ _____

$5 \times 10 =$ _____

5 siathan = _____

5 uiread 8 = _____

1 chòig = _____

5 uiread 3 = _____

$2 \times 5 =$ _____

5 ceithirean = _____

$10 \times 5 =$ _____

5 neonithean = _____

7 air iomadachadh le 5 = _____

9 air iomadachadh le 5 = _____

45

40

35









20



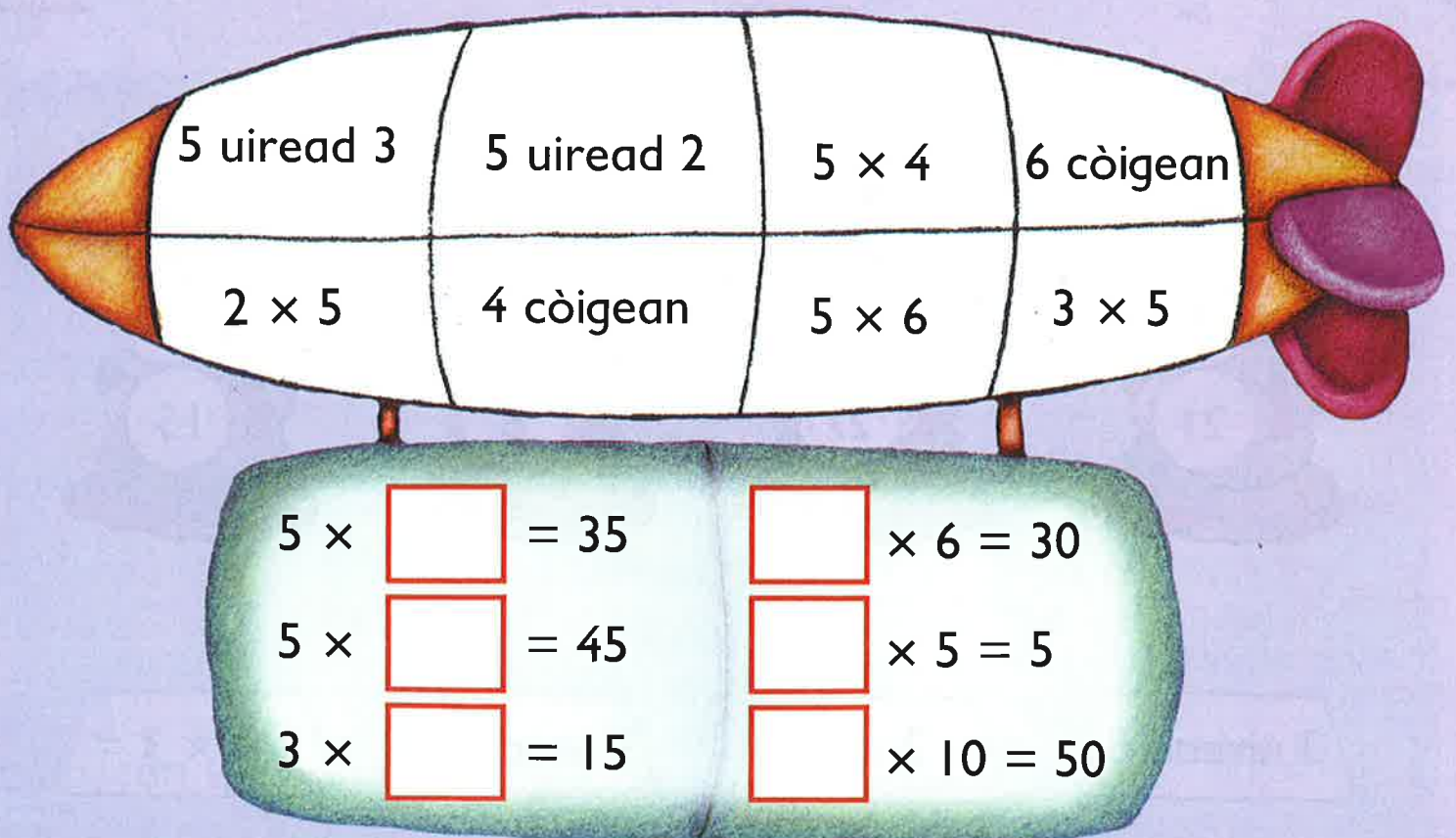
Muids.



Iomadaich iad seo.



Cuir dath **10** **15** **20** **30**.





$3 \times 0 = \square$

$3 \times 1 = \square$

$3 \times 2 = \square$

$3 \times 3 = \square$

$3 \times 4 = \square$

$3 \times 6 = \square$

$3 \times 5 = \square$

$3 \times 7 = \square$

$3 \times 8 = \square$

$3 \times 9 = \square$

$3 \times 10 = \square$

$3 \text{ trithean} = \underline{\hspace{2cm}}$

$3 \text{ deichean} = \underline{\hspace{2cm}}$

$3 \text{ uiread } 4 = \underline{\hspace{2cm}}$

$3 \text{ uiread } 6 = \underline{\hspace{2cm}}$

$3 \times 5 = \underline{\hspace{2cm}}$

$2 \times 3 = \underline{\hspace{2cm}}$

$0 \text{ trithean} = \underline{\hspace{2cm}}$

$10 \text{ trithean} = \underline{\hspace{2cm}}$

$8 \text{ air iomadachadh le } 3 = \underline{\hspace{2cm}}$

$1 \text{ air iomadachadh le } 3 = \underline{\hspace{2cm}}$

Maidis iad seo le dathan.




3 uiread 5

2 thrì

3 seachdan

$9 \times 3 =$



$4 \times 0 =$

$4 \times 1 =$

$4 \times 2 =$

$4 \times 3 =$

$4 \times 4 =$

$4 \times 6 =$

$4 \times 7 =$

$4 \times 8 =$

$4 \times 9 =$

$4 \times 10 =$

Ceangail iad ann an òrdugh.

4×0

4 dhàthan

4 ceithirean

20

40

9 ceithirean

4

3×4

4×6

28

4 ochdan

$4 \text{ deichean} =$

$4 \text{ uiread } 4 =$

$4 \text{ còigean} =$

$4 \text{ trìthean} =$

$4 \text{ uiread } 0 =$

$4 \text{ ochdan} =$

$7 \times 4 =$

$3 \text{ air iomadachadh le } 4 =$

$1 \times 4 =$

$2 \text{ ceithirean} =$

$9 \text{ air iomadachadh le } 4 =$

$6 \text{ ceithirean} =$



$$2 \times 5 = \underline{\quad}$$

$$10 \div 2 = \underline{\quad}$$

$$2 \times 8 = \underline{\quad}$$

$$16 \div 2 = \underline{\quad}$$

$$2 \times 2 = \underline{\quad}$$

$$4 \div 2 = \underline{\quad}$$

$$2 \times 4 = \underline{\quad}$$


$$8 \div 2 = \underline{\quad}$$

$$2 \times 1 = \underline{\quad}$$

$$2 \div 2 = \underline{\quad}$$

$$2 \times 6 = \underline{\quad}$$

$$12 \div 2 = \underline{\quad}$$



$$10 \div 2 = \underline{\quad}$$

$$14 \div 2 = \underline{\quad}$$


$$2 \div 2 = \underline{\quad}$$

$$18 \div 2 = \underline{\quad}$$

$$6 \div 2 = \underline{\quad}$$

$$20 \div 2 = \underline{\quad}$$

Roinn le 2.



12 air a roinn le 2 = 10 air a roinn le 2 =

6 air a roinn le 2 = 20 air a roinn le 2 =

Roinn 4 le 2.

Roinn 14 le 2.

Roinn 8 le 2.

Roinn 2 le 2.

$$\square \div 2 = 3$$

$$\square \div 2 = 1$$

$$\square \div 2 = 5$$

$$\square \div 2 = 8$$

$$\square \div 2 = 10$$

$$\square \div 2 = 7$$



$10 \div 2 = \underline{\quad}$

$\text{leth de } 10 = \underline{\quad}$

$12 \div 2 = \underline{\quad}$

$\text{leth de } 12 = \underline{\quad}$

$18 \div 2 = \underline{\quad}$

$\text{leth de } 18 = \underline{\quad}$

Maid.



8

20

15

7

30

25



$\text{Tha leth de } 20 = \square$

$\text{leth de } 80 = \square$

$\text{leth de } 10 = \square$

$\text{leth de } 70 = \square$

$\text{leth de } 90 = \square$

$$10 \div 10 = 1$$

$$20 \div 10 = 2$$

$$30 \div 10 =$$

$$40 \div \quad = 4$$

$$\div 10 = 5$$

$$\div \quad = 6$$

$$70 \div 10$$

$$40 \div 10$$

$$60 \div 10$$

$$10 \div 10$$

$$0 \div 10$$

Moids.

$$50 \div 10$$

$$4 \div 2$$

leth de 10

$$10 \div 1$$

$$10 \div 2$$

$$100 \div 10$$

$$20 \div 10$$

$$20 \div 2$$

$60 \div 10 = \square$

$90 \div 10 = \square$

$50 \div 10 = \square$

$10 \div 10 = \square$

$30 \div 10 = \square$

$0 \div 10 = \square$

$20 \div 10 = \square$




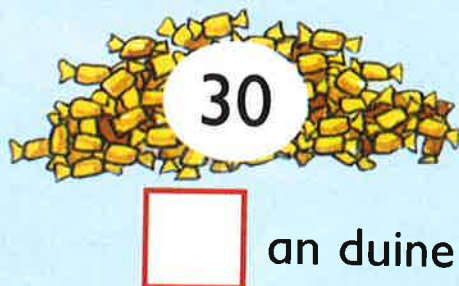
$40 \div 10 = \square$

$80 \div 10 = \square$

Cia mheud sgioba de 10 a tha ann?




Roinn iad gu cothromach eadar 10.




Cleachd ciùban.

Cuir cearcall mu bhuidhnean de 2.




$13 \div 2 = \underline{\quad} \text{ c } \underline{\quad}$

Cuir cearcall mu bhuidhnean de 3.



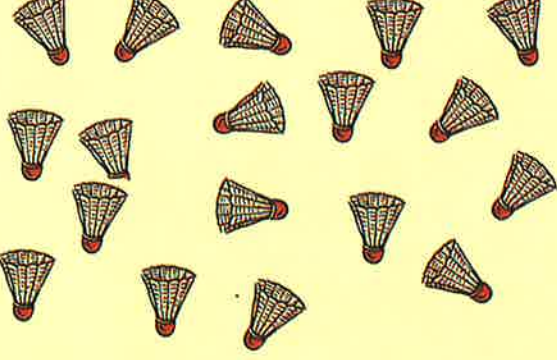
$16 \div 3 = \underline{\quad} \text{ c } \underline{\quad}$

Cuir cearcall mu bhuidhnean de 4.



$14 \div 4 = \underline{\quad} \text{ c } \underline{\quad}$

Cuir cearcall mu bhuidhnean de 5.



$18 \div 5 = \underline{\quad} \text{ c } \underline{\quad}$

$36 \div 10 = \underline{\quad} \text{ c } \underline{\quad}$

$19 \div 2 = \underline{\quad} \text{ c } \underline{\quad}$

Roinn 29 le 3 = $\underline{\quad} \text{ c } \underline{\quad}$

17 air a roinn le 4 = $\underline{\quad} \text{ c } \underline{\quad}$

Cia mheud còig a tha a' dèanamh 33? $\underline{\quad} \text{ c } \underline{\quad}$

Cia mheud buidheann de 10 a tha ann an 85? $\underline{\quad} \text{ c } \underline{\quad}$

Cleachd ciùban. Roinn iad gu cothromach.



$$15 \div 2 = \underline{\quad} c \underline{\quad}$$



$$23 \div 3 = \underline{\quad} c \underline{\quad}$$



$$23 \div \underline{\quad} = \underline{\quad} c \underline{\quad}$$



$$\underline{\quad} \div 5 = \underline{\quad} c \underline{\quad}$$



$$\underline{\quad} \div \underline{\quad} = \underline{\quad} c \underline{\quad}$$

$$45 \div 10 = \underline{\quad} c \underline{\quad}$$

$$25 \div 2 = \underline{\quad} c \underline{\quad}$$

$$\text{Roinn 22 le 5. } \underline{\quad} c \underline{\quad}$$

$$7 \text{ air a roinn le 2} = \underline{\quad} c \underline{\quad}$$

$$\text{Roinn 35 gu cothromach eadar 4. } \underline{\quad} c \underline{\quad}$$

$$\text{Roinn 20 gu cothromach eadar 3. } \underline{\quad} c \underline{\quad}$$

Roinneadh: a' riarachadh le corran



LEABHAR-TEACS
t.d. 59

