




M H A

2

Matamataig Heinemann Alba

Duilleagan-sgrùdaidh



Ainm _____

Sgrìobh na h-àireamhan a tha a dhìth.

83	84			
----	----	--	--	--

27		29		
----	--	----	--	--

			78	79
--	--	--	----	----

		41		43
--	--	----	--	----

Sgrìobh an àireamh

an dèidh 55 ro 70 an dèidh 89

eadar 33 agus 35 eadar 49 agus 51

Sgrìobh an àireamh a tha

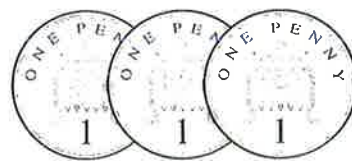
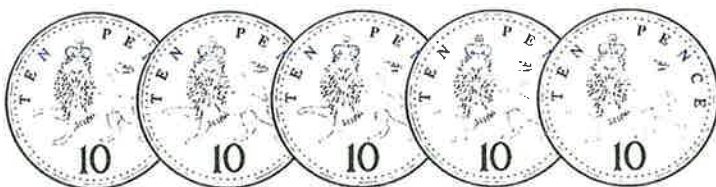
1 nas motha na 27	<input type="text"/>
-------------------	----------------------

1 nas lugha na 40	<input type="text"/>
-------------------	----------------------

2 nas lugha na 62	<input type="text"/>
-------------------	----------------------

2 nas motha na 98	<input type="text"/>
-------------------	----------------------

Cia mheud uile-gu-lèir?



sg

Maid le dathan.



Sgrìobh an àireamh a tha

10 nas motha na _____

36 → _____ 28 → _____

52 → _____ 74 → _____

10 nas lugha na _____


99 → _____ 67 → _____

32 → _____ 55 → _____

Cuir crìoch.

25	35	45					
93	83	73					

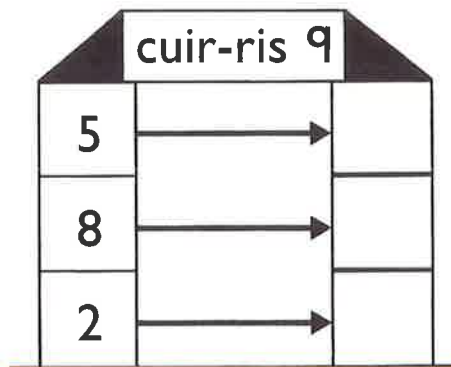
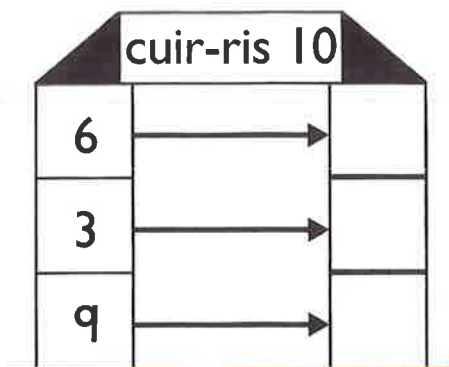
Cuir dath gorm air an àireimh **as motha**, agus dath dearg air an àireimh **as lugha**.



Sgrìobh na h-àireamhan ann an òrdugh.

54				96			

Tòisich leis an tè **as motha**.



$13 + 4 = \square$

$7 + 12 = \square$

$3 + 13 = \square$

$18 + 2 = \square$

$15 + 3 = \square$

$11 + 5 = \square$

Muids.

$7 + 7$

$8 + 3$

$8 + 8$

$5 + 8$

$6 + 6$

11

14

13

12

16

$5 + 6$

$6 + 8$

$7 + 6$

$9 + 7$

$7 + 5$

$8 + 6 = \square$

$4 + 7 = \square$

$7 + 8 = \square$

$8 + 4 = \square$

$9 + 4 = \square$

$6 + 5 = \square$

$2 + 9 = \square$

$5 + 7 = \square$

$9 + 6 = \square$

Dèan 12.

$$\begin{array}{l} \square \text{ cuir-} \square \\ \text{ris} \square \\ \square + \square \\ \text{8} \\ \square \text{ agus } \square \end{array}$$

Dèan 14.

$$\begin{array}{l} \square + \square \\ \text{8} \\ \square \text{ agus } \square \\ \square \text{ cuir-} \square \\ \text{ris} \square \end{array}$$

Cuir dath air dhà gus 13 a dhèanamh.



Cuir dath air dhà gus 15 a dhèanamh.

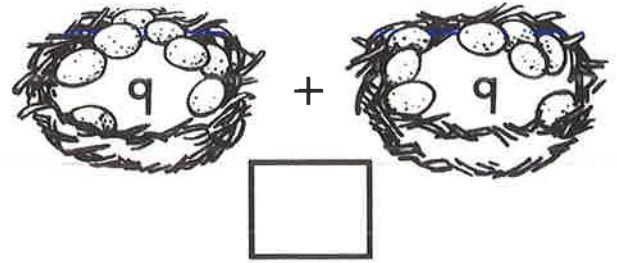
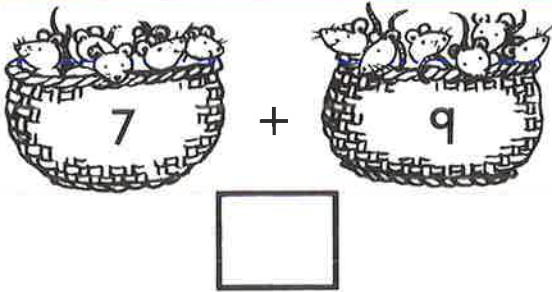


$8 + \square = 11$

$\square + 8 = 13$

$6 + \square = 12$

$\square + 5 = 14$

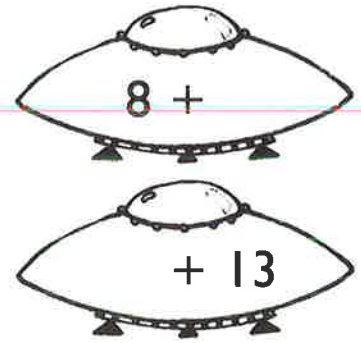
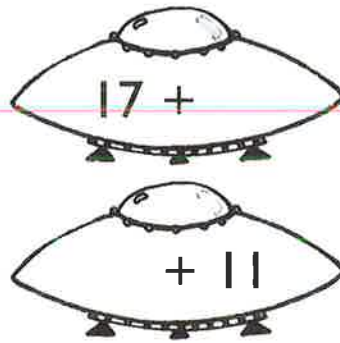
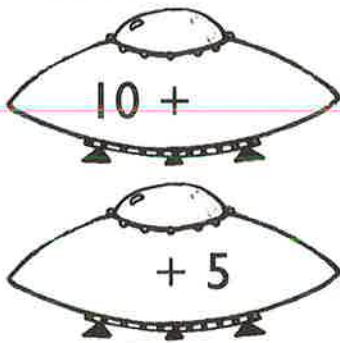


9 + = 17

8 + = 16

+ 9 = 19

Dèan 20.



8 + 7 =

5 + 8 =

9 + 3 =

8 + 3 =

4 + 7 =

6 + 8 =

4 + 5 + 7 =

7 + 8 + 3 =

8 + 4 + = 18

1 + + 9 = 14

Cuir ✓ air trì gus 20 a dhèanamh.



$11 - 3 = \square$

$13 - 4 = \square$

$12 - 6 = \square$

$13 - 6 = \square$

$12 - 7 = \square$

$11 - 2 = \square$

$12 - 4 = \square$

$11 - 9 = \square$

$13 - 8 = \square$

$11 - 5 = \square$

$12 - 3 = \square$

$13 - 5 = \square$

13 thoir-air-falbh 7 =

Thoir 8 bho 12.

11 thoir-air-falbh 8 =

6 nas lugha na 11

12 thoir-air-falbh 5 =

Thoir-air-falbh 9 bho 13

12 

9 air chall.

Cia mheud a tha air fhàgail?

11 

4 air chall.

Cia mheud a tha air fhàgail?

$11 - \square = 4$

$13 - \square = 10$

$12 - \square = 8$

$14 - 6 = \square$

$15 - 9 = \square$

$17 - 8 = \square$

$19 - 9 = \square$

$16 - 8 = \square$

$18 - 9 = \square$

$14 - 7 = \square$

$17 - 9 = \square$

$14 - 9 = \square$

Thoir 7 air falbh
bho 16.

15 thoir-air-falbh 7 =


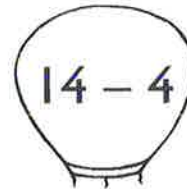

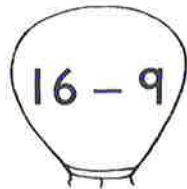

14 thoir-air-falbh 5 =

10 nas lugha
na 19 =

18 thoir-air-falbh 8 =

Thoir-air-falbh
7 bho 17.

Maids.

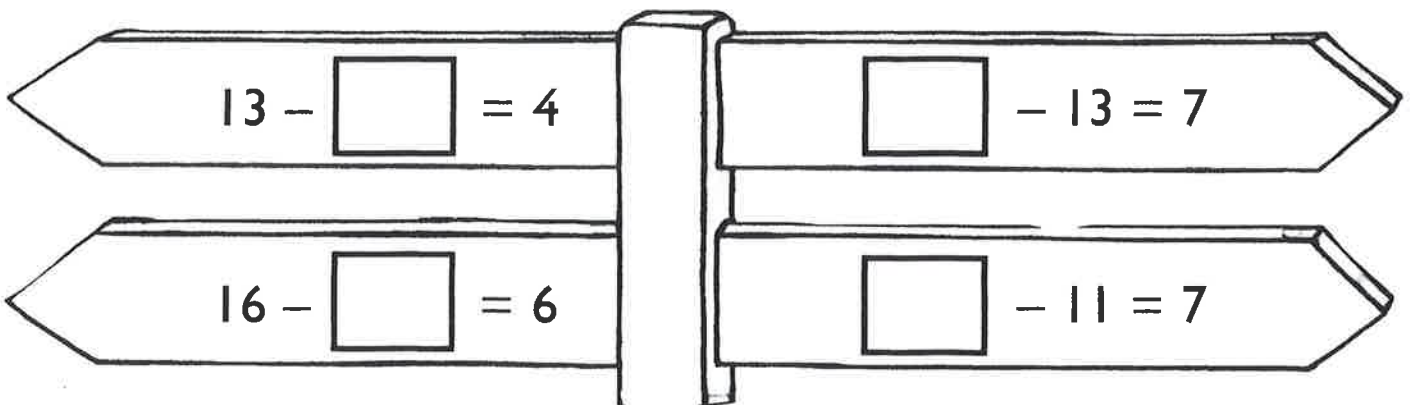
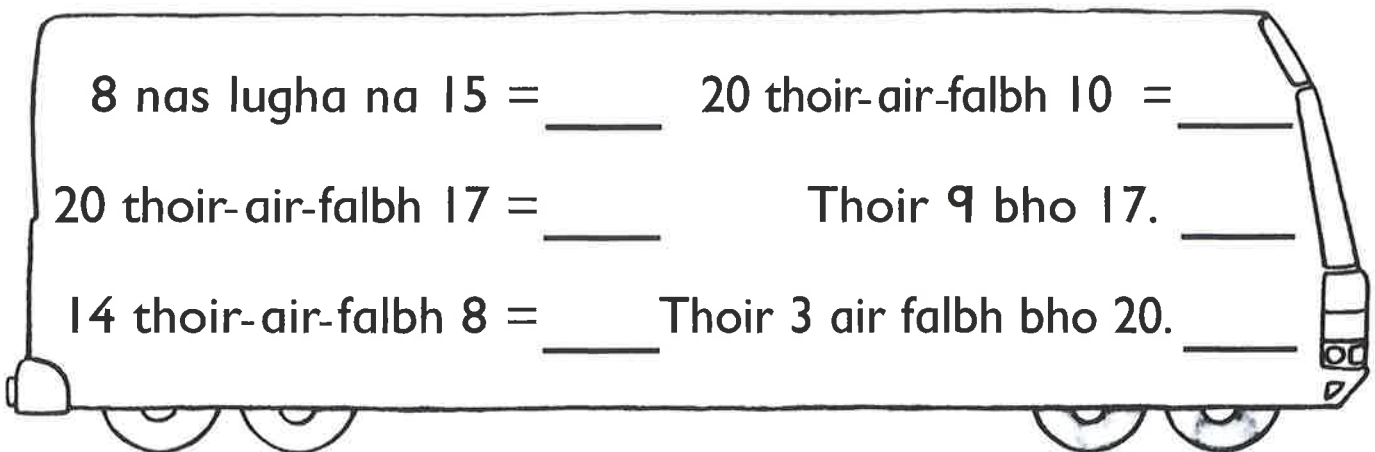
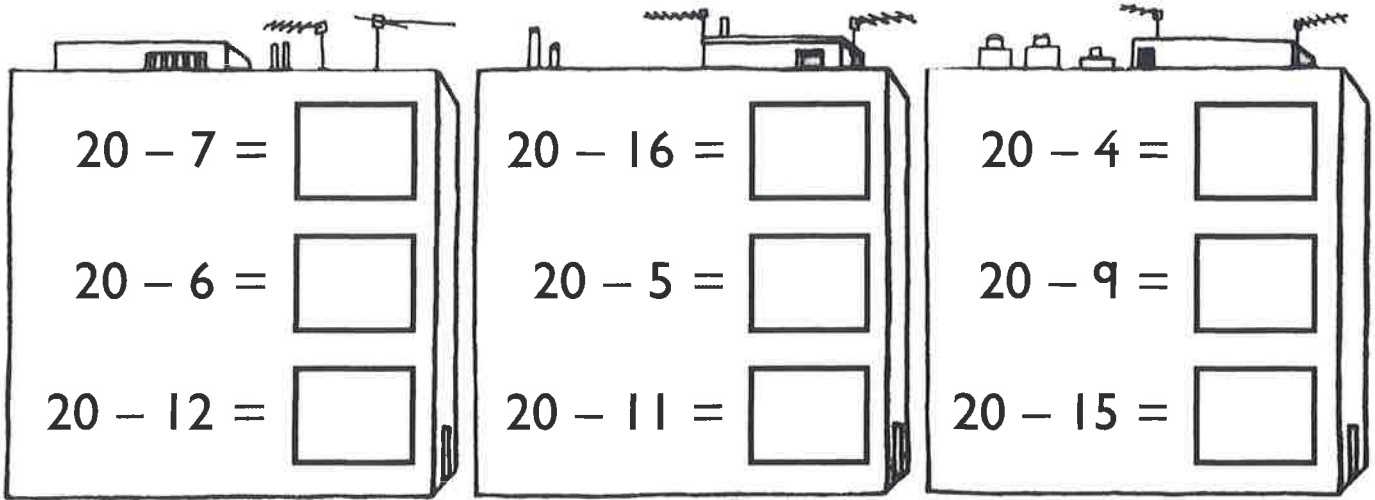


$15 - \square = 9$

$16 - \square = 10$

$\square - 7 = 7$

$\square - 10 = 8$



$8 + 6 =$

 $6 + 8 =$

 $14 - 6 =$

 $14 - 8 =$

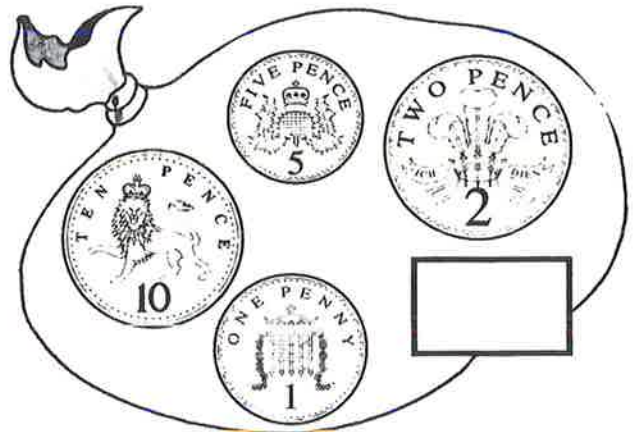
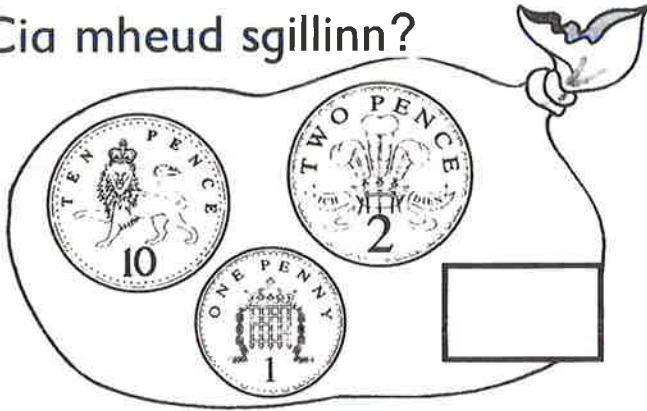
$10 + 7 = 17$

 $+ 10 =$

 $17 - =$

 $- =$

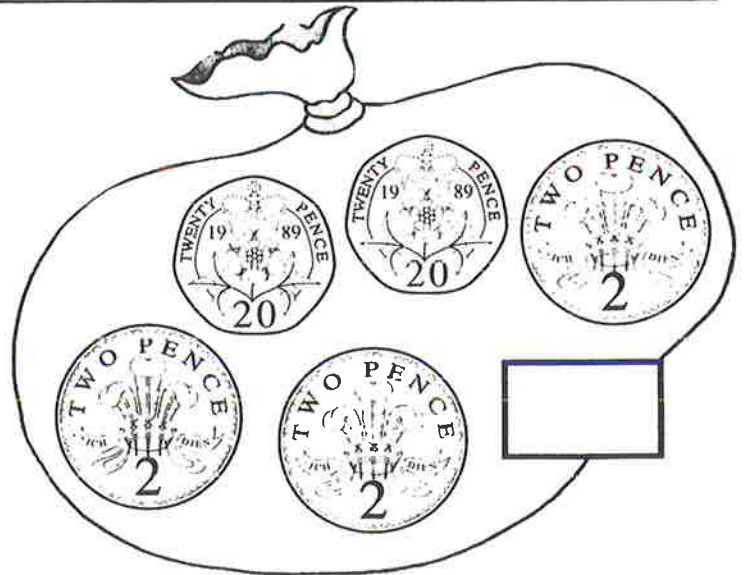
Cia mheud sgillinn?



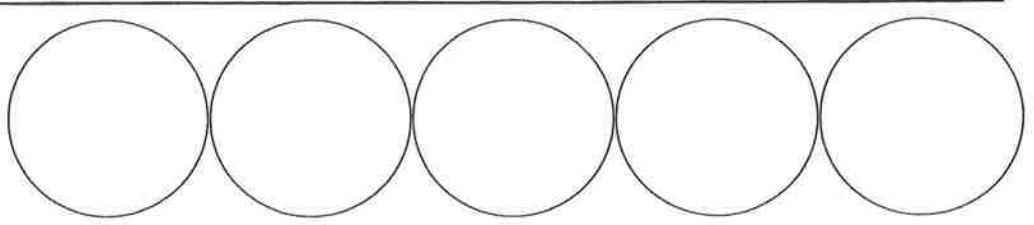

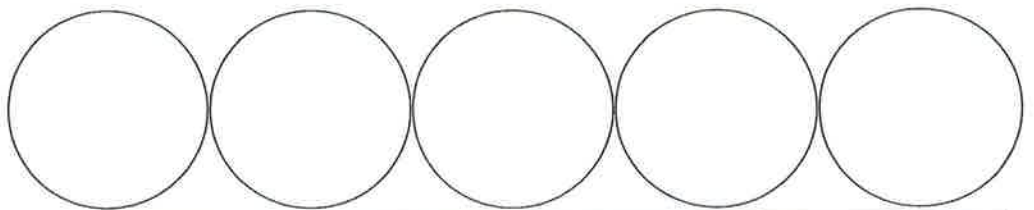
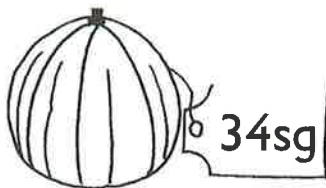
Cuir ✓ air na buinn.



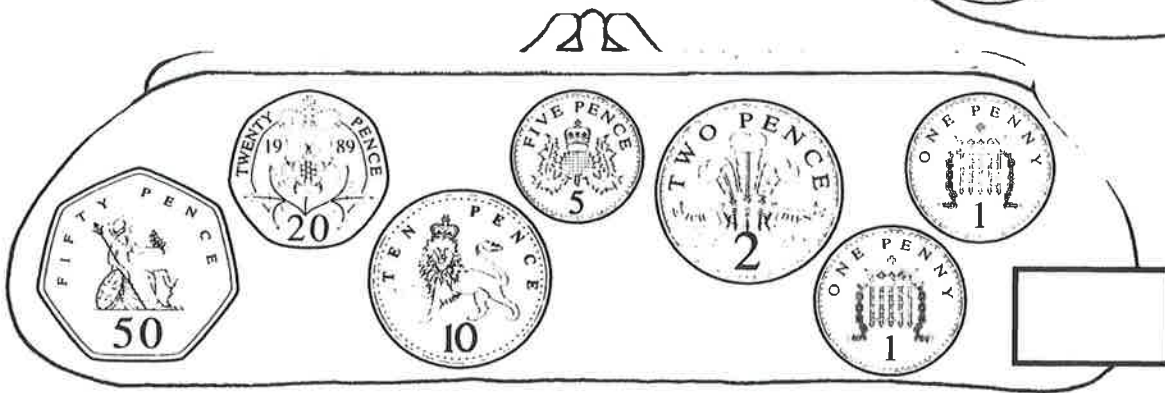
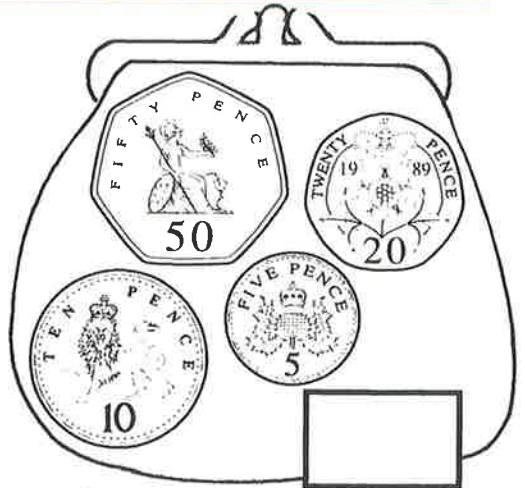
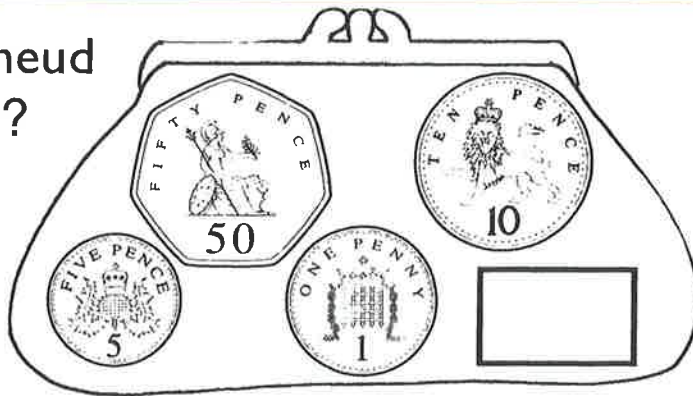
Cia mheud sgillinn?




Seall na buinn a tha a dhìth ort.



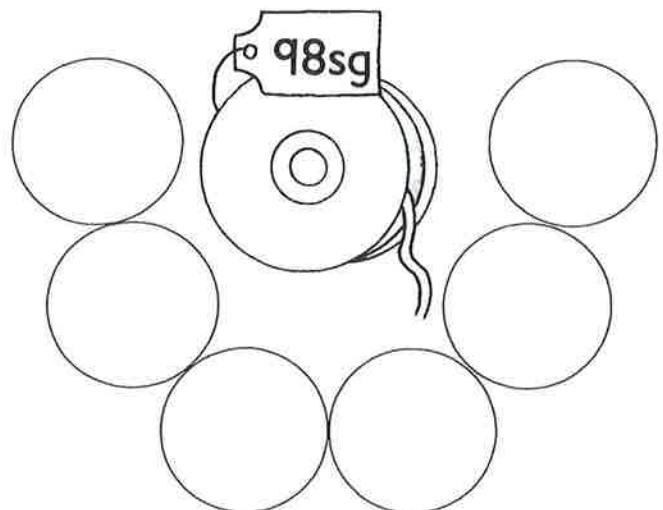
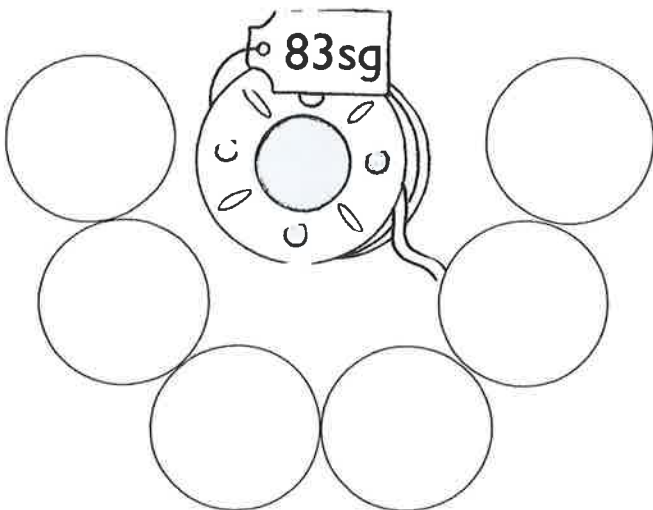
Cia mheud sgillinn?



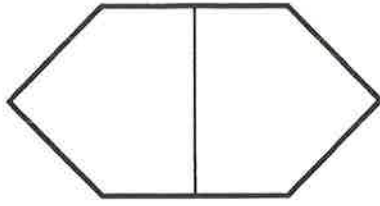
Cuir ✓ air na buinn.



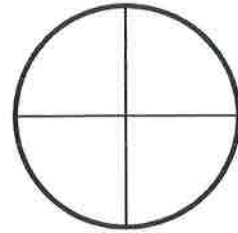
Seall na buinn a tha a dhìth ort.



Cuir dath.


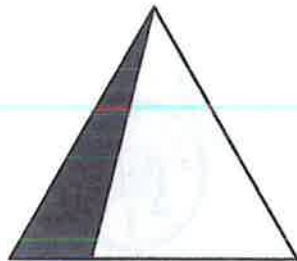


aon leth






aon chairteal

Cuir ✓ air na cumaidhean a tha a' sealltainn lethean.



Cuir ✓ air na cumaidhean a tha a' sealltainn chairtealan.



Cleachd ciùban.

$$\frac{1}{2} \text{ de } 4 = \underline{\quad}$$

$$\frac{1}{2} \text{ de } 12 = \underline{\quad}$$

$$\frac{1}{2} \text{ de } 20 = \underline{\quad}$$

$$\frac{1}{2} \text{ de } 8 = \underline{\quad}$$

$$\frac{1}{2} \text{ de } 16 = \underline{\quad}$$

$$\frac{1}{2} \text{ de } 10 = \underline{\quad}$$



4 trithean a' dèanamh _____



5 dhàthan a' dèanamh _____



3 còigean a' dèanamh _____

Cleachd ciùban.

3 uiread 7 =

2 uiread 3 =

5 uiread 4 =

7 uiread 2 =

8 uiread 3 =

4 uiread 4 =

Iomadaich.

$3 \times 3 =$

$6 \times 1 =$

$2 \times 10 =$

$4 \times 0 =$

$9 \times 2 =$

$1 \times 8 =$

$6 \times 4 =$

$2 \times 8 =$

$3 \times 6 =$

Cuir crìoch.

$2 \times 6 = 6 \times$

$7 \times 4 =$ $\times 7$

$\times 3 = 3 \times 10$


$1 \times$ $= 9 \times 1$

Cleachd ciùban.

Riaraich iad seo gu cothromach.



18




$$18 \div 2 =$$



30

Cia mheud buidheann le 5? _____



15

Cia mheud buidheann le 3? _____



20

Cia mheud buidheann le 4? _____

Roinn.

$$12 \div 2 = \underline{\quad}$$

$$18 \div 3 = \underline{\quad}$$

$$16 \div 4 = \underline{\quad}$$

$$21 \div 3 = \underline{\quad}$$

$$24 \div 4 = \underline{\quad}$$

$$20 \div 5 = \underline{\quad}$$

15 air an riarachadh gu cothromach eadar 5.



$$15 \div 5 = \underline{\quad}$$

Roinn.

$$30 \div 10 = \underline{\quad}$$

$$16 \div 2 = \underline{\quad}$$

$$7 \div 1 = \underline{\quad}$$

$$20 \div 10 = \underline{\quad}$$

$$8 \div 2 = \underline{\quad}$$

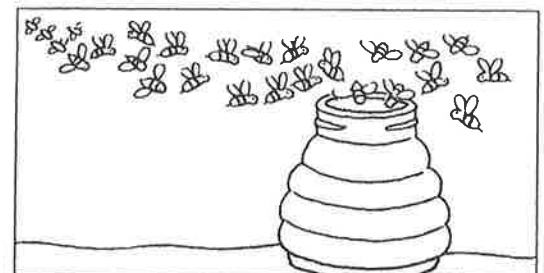
$$20 \div 2 = \underline{\quad}$$

$21 \text{ cuir-ris } 4 = \square$ $46 \text{ cuir-ris } 3 = \square$ $7 \text{ cuir-ris } 82 = \square$
 $70 + \square = 78$ $35 + \square = 39$ $\square + 53 = 56$

$62\text{sg} + 10\text{sg} = \square \text{ sg}$ $53\text{sg} + 10\text{sg} = \square \text{ sg}$ $10\text{sg} + 39\text{sg} = \square \text{ sg}$
 $10 + \square = 24$ $10 + \square = 71$ $\square + 10 = 85$

Dèan 60		Dèan 90	
$30 + \square$	$\square + 40$	$70 + \square$	$\square + 80$

$49 + 20 = \square$ $24 + 40 = \square$ $30 + 63 = \square$
 $80 + \square = 96$ $50 + \square = 85$ $\square + 10 = 98$



57 mathain aig picnig.
 30 eile a' tighinn.
 Cia mheud a-nis? _____

60 seillean aig a' mhill.
 32 eile a' tighinn.
 Cia mheud a-nis? _____

$19 + 3 = \square$

$17 + 4 = \square$

$18 + 5 = \square$

$18 + 7 = \square$

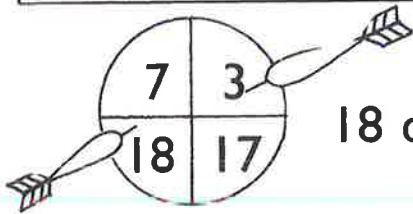
$6 + 19 = \square$

$16 + 8 = \square$

$19 + \square = 23$

$16 + \square = 22$

$18 + \square = 26$



18 agus 3

Cia mheud uile-gu-lèir?



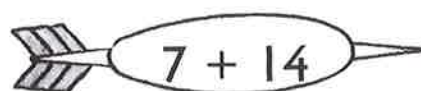
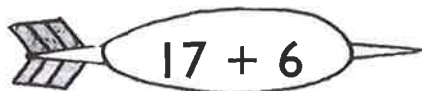
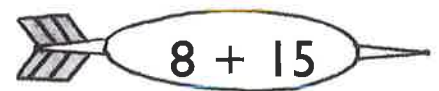
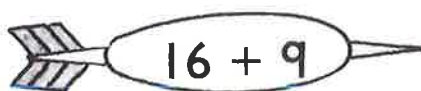
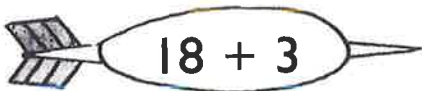
agus 15

Cia mheud uile-gu-lèir?

$38 + 4 = \square$

$59 + 3 = \square$

Maids.



$49 + 5 =$

$66 + 6 =$

$8 + 39 =$

$57 - 5 = \square$

$63 - 3 = \square$


$78 - 4 = \square$


$40 - 6 = \square$


$39 - 7 = \square$

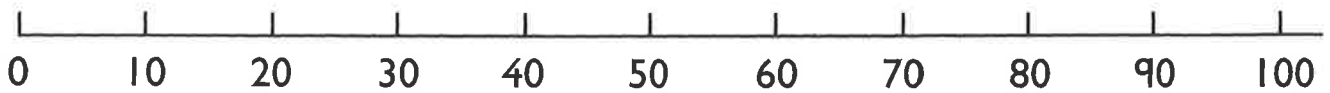
$80 - 8 = \square$

Thoir-air-falbh 10. Cia mheud a tha air fhàgail?









$70 - 60 = \square$

$80 - 30 = \square$

$40 - 20 = \square$

$100 - 70 = \square$

$100 - \square = 60$

$\square - 50 = 40$

$63 \xrightarrow{\text{thoir-air-falbh } 30} \square$

$38 \xrightarrow{\text{thoir-air-falbh } 20} \square$

$86 \longrightarrow \square$

$52 \longrightarrow \square$

$65 - 40 = \square$

$73 - \square = 23$

$\square - 60 = 17$

1 Lìon na beàrnan.

6	7	8		
---	---	---	--	--

11		13		15
----	--	----	--	----

		18	19	20
--	--	----	----	----

		2		4
--	--	---	--	---

Sgrìobh an àireamh a tha

an dèidh 5

ro 12

an dèidh 14

eadar 6 agus 8

eadar 19 agus 17

1 nas motha na 19

2 nas lugha na 13

2 Cuir ✓ air

an àireamh as motha

16	14
----	----

an àireamh as lugha

13	11	9
----	----	---


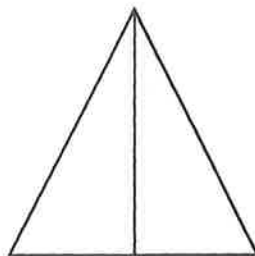
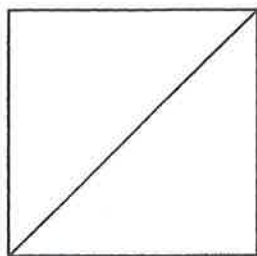

an àireamh as lugha

15	12
----	----

an àireamh as motha

8	14	12
---	----	----

3 Cuir ✓ air na cumaidhean a tha a' sealltainn leth.



4

$3 + 6 = \square$

$4 + 3 = \square$

$7 + 0 = \square$

$1 + 5 = \square$

$3 + 3 = \square$

$8 + 1 = \square$

$2 + 3 = \square$

$0 + 6 = \square$

$4 + 4 = \square$

5

$5 + \square = 8$

$\square + 2 = 4$

$3 + \square = 3$

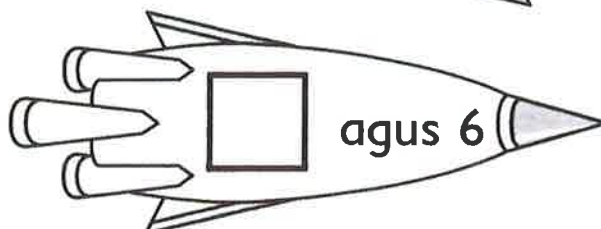
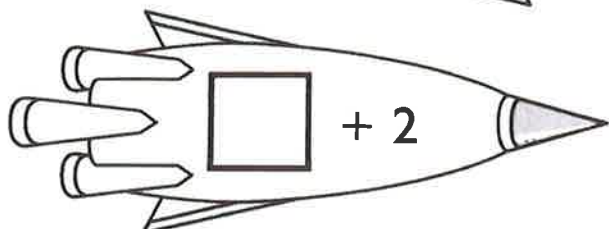
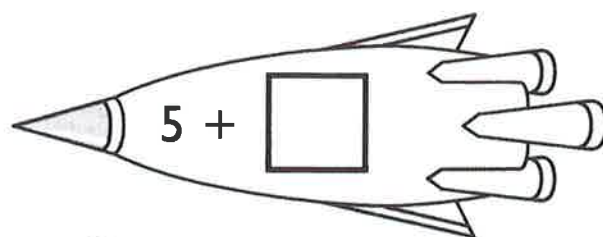

$\square + 4 = 9$

$1 + \square = 8$


$\square + 6 = 7$

6

Dèan 10.



7 Cia mheud uile-gu-lèir?



8

$$2 + 5 + 3 = \square$$

$$4 + 2 + 3 = \square$$

9

$$8 - 2 = \square$$

$$5 - 5 = \square$$

$$10 - 5 = \square$$

$$7 - 4 = \square$$

$$6 - 2 = \square$$

$$9 - 7 = \square$$

$$4 - 3 = \square$$

$$8 - 7 = \square$$

$$6 - 5 = \square$$

10

$$9 - \square = 4$$

$$\square - 1 = 2$$

$$6 - \square = 0$$

$$\square - 2 = 5$$

$$10 - \square = 6$$

$$\square - 7 = 2$$

11

10 thoir-air-falbh 3

4 nas lugha na 9

Thoir-air-falbh 8 bho 10.

Thoir 0 bho 4.

6 nas lugha na 7

5 thoir-air-falbh 2

12

Lorg an diofar a tha eadar

9 agus 3

5 agus 7

10 agus 1


13



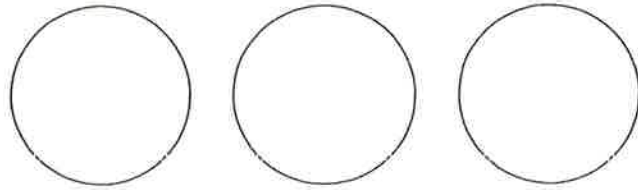

Cia mheud  a bharrachd a tha ann?

14


Cia mheud uile-gu-lèir?

sg

15 Seall a' phrìs. Cleachd buinn.

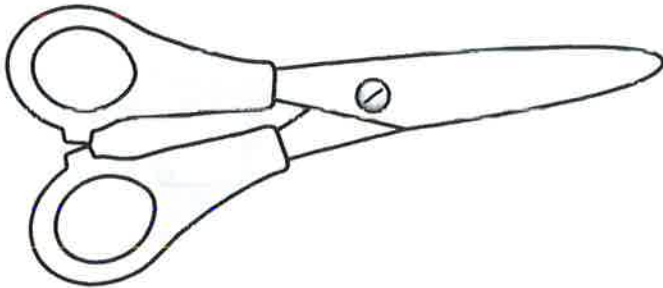


16 Tomhais an fhaid.



mu ciùban

17 Tomhais an cuideam.




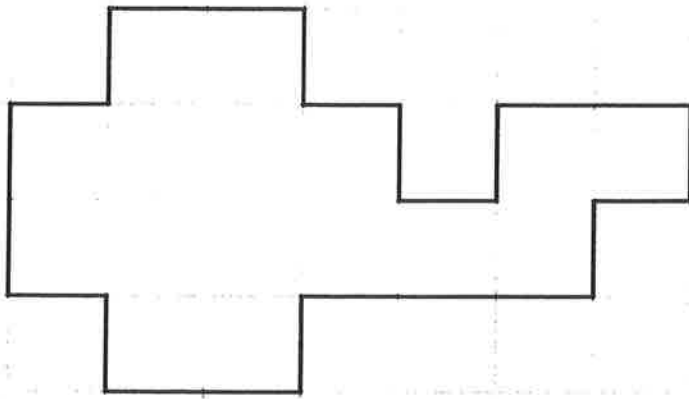
mu ciùban

18 Cia mheud  ?



mu 

19 Lorg farsaingeachd a' chumaidh seo.



ceàrnagan

20 Cuir crìoch.

Dimàirt

Diardaoin


Diciadain

Diluain

Disathairne

Dimàirt

21 Maids le dathan.



6 uairean

9:00



4 uairean

6:00

9 uairean

4:00



22 Maids



cruinne

siolandair

còn

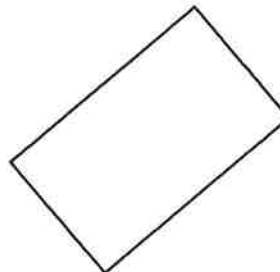

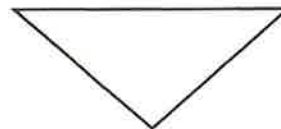

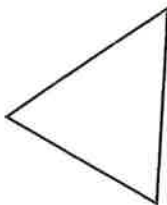
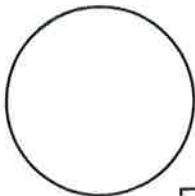

ciùbaid

ciùb




23 Dèan

- na triantain dearg
- na ceàrnagan gorm
- na cearcaill uaine

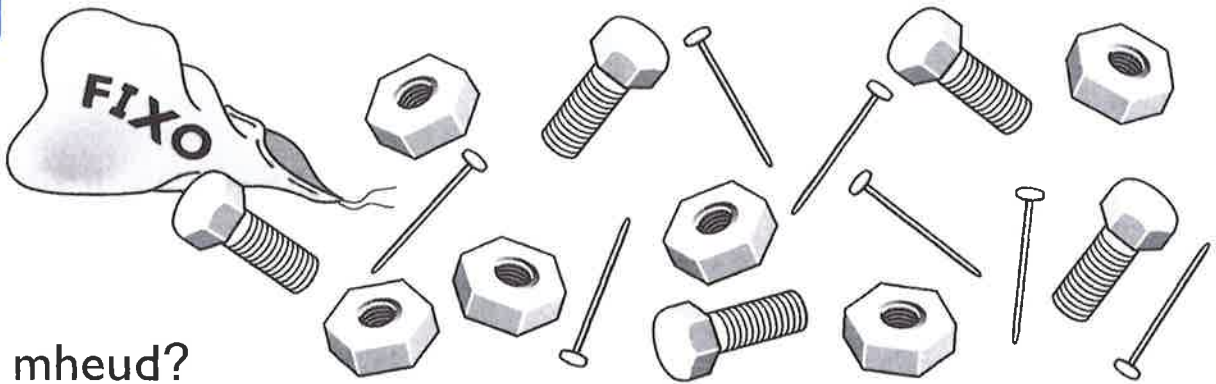


Dèan ceart-cheàrnach fon cheàrnaig mhòir.


24 Cuir crìoch.



25






Cia mheud?



Cia mheud  a bharrachd air  ? _____

Cuir crìoch.

1 Sgrìobh an àireamh a tha

an dèidh 43

ro 89

2 nas motha na 68

2 nas lugha na 41

2 Cuir ✓ air

an àireamh as motha

(84) (59)

an àireamh as lugha

(38) (71)

an àireamh as lugha

47 25 90

an àireamh as motha

63 76 82

3

$6 + 5 = \square$

$9 + 4 = \square$

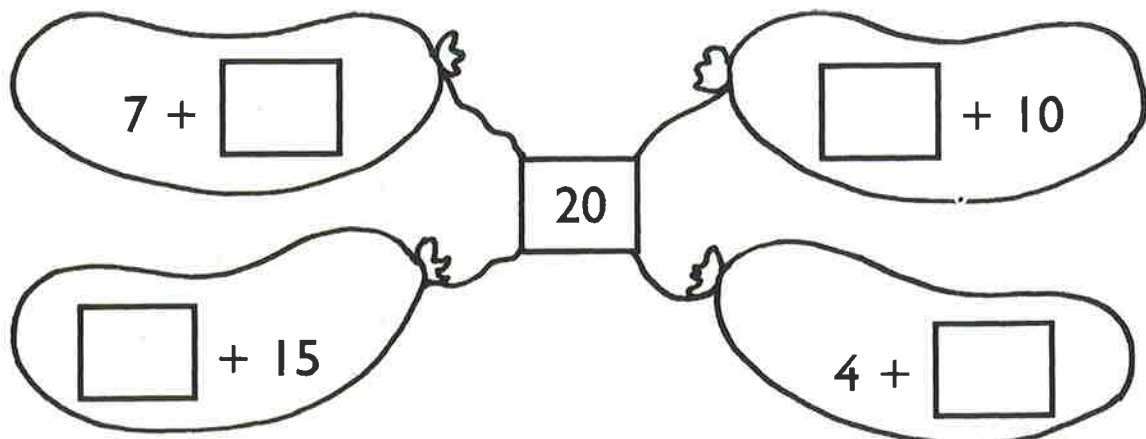
$5 + 7 = \square$

$7 + 7 = \square$

$6 + 9 = \square$

$9 + 8 = \square$

Dèan 20.



4

$18 - 5 = \square$

$17 - 6 = \square$

$16 - 4 = \square$




$15 - 9 = \square$

$12 - 5 = \square$


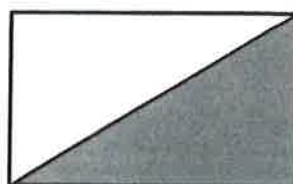


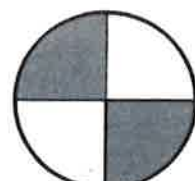


$13 - 7 = \square$

5

Cuir ✓ air buinn airson gach prìs.



6

Cuir ✓ air na cumaidhean a tha a' sealltainn **lethean**.Cuir ✓ air na cumaidhean a tha a' sealltainn **chairtealan**.

7 Cuir crìoch.

$$\boxed{2 \times 5} = \boxed{\quad} \times 2$$

$$\boxed{7 \times 6} = \boxed{\quad} \times 2$$

8 Maids.

$$\boxed{2 \times 3}$$

2 dheich

$$\boxed{2 \times 1}$$

6

14

10

20

16


2

$$\boxed{2 \times 5}$$


2 uiread 7

2 uiread ochd

9

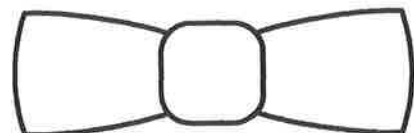




$$\frac{1}{2} \text{ de } 12 = \underline{\quad}$$



$$\frac{1}{2} \text{ de } 20 = \underline{\quad}$$

10 Cuir ✓ air na dealbhan a tha co-chothromach.




II Maids



leth uair an dèidh 5



leth uair an dèidh 10



leth uair an dèidh 2



12

Measan



--	--	--	--	--	--



--

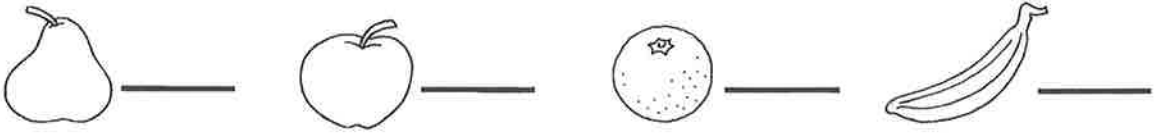


--	--	--	--	--	--	--	--



--	--	--

Cia mheud



Cia mheud agus ? _____

Cia mheud a bharrachd na ? _____

Airgead agus bloighean

A' cleachdadh bonn 10sg	AB 1	AB 2	AB 3	AB 4

A' cleachdadh bonn 20sg	PS 19	PS 20	PS 21	AB 5	AB 6	HA 14	CU 9

A' cleachdadh bonn 50sg	PS 22	PS 23	AB 7	AB 8	PS 24	AB 9	PS 25	HA 15	CU 10

Measadh	AB 10	AB 11

Lethean agus cairtealan	AB 12	PS 26	AB 13	HA 16	AB 14	AB 15	CU 11

Iomadachadh agus roinneadh

Bun-bheachd iomadachaidh	AB 1	HA 17	AB 2	AB 3	AB 4	HA 18	PS 27	AB 5	AB 6	CU 12

Iomadachadh: clàr nan uireadan 2	AB 7	AB 8

Measadh	AB 9

Bun-bheachd roinnidh	AB 10	AB 11	HA 19	PS 28	AB 12	PS 29	AB 13	HA 20	AB 14	CU 13

Measadh	AB 15

Cumadh/Cruth

3sheallach (3sh):	PS 30	PS 31	AB 1	AB 2

2sheallach (2sh): ag aithneachadh agus ag innse mu chumaidhean	PS 32	AB 3	AB 4	AB 5	AB 6

Tomhas

Faid	AB 7	AB 8	AB 9	AB 10	AB 11	AB 12	AB 13

Cuideam	AB 14	AB 15	AB 16

Comas-lionaidh	AB 17	AB 18	AB 19	AB 20

Farsaingeachd	AB 21	AB 22

An Uair

An uair: mìosan na bliadhna	PS 33	PS 34

An uair: ag innse na h-uarach	PS 35	AB 23	AB 24

An uair: ùine	PS 36	AB 25	PS 37	AB 26	AB 27

Clàr-obrach: MHA 2

A' làimhseachadh dàta

Grafaichean-colbh	PS 38	AB 28	PS 39	AB 29	AB 30

Diagraman Venn agus Carroll	AB 31

Leudachadh

Òrdugh àireimh gu 1000	AB 1	PS 40	AB 2	AB 3	AB 4

A' colmeas agus a' cur an òrdugh	AB 5	AB 6

A' cur àireamh aon-fhigear ri àireamh dà-fhigear	PS 41	PS 42	AB 7	AB 8	HA 21

Cur-ris le iomad de dheich agus àireamh dà-fhigear	AB 9	PS 43	PS 44	AB 10	HA 22	AB 11	PS 45	CU 14

Cur-ris àireamh le aon-fhigear agus àireamh le dà-fhigear, le bhith a' dol thairis	PS 46	PS 47	AB 12	PS 48	AB 13	CU 15

Cur-ris trì àireamhan	AB 14

Measadh	AB 15

A' toirt-air-falbh le àireamh aon-fhigear	AB 16	PS 49	AB 17	HA 23

A' toirt dheichean air falbh	AB 18	PS 50	AB 19	AB 20	HA 24	CU 18	PS 51

A' toirt-air-falbh àireamh aon-fhigear, a' dol thairis : air 20	AB 21	AB 22	HA 25

Measadh	AB 23

Ath-obair 1 Ire A

1	2	3	4	5	6	7	8	9	10	11	12	13	14	15	16

17	18	19	20	21	22	23	24	25

Ath-obair 2

1	2	3	4	5	6	7	8	9	10	11	12

Foillsichearan Foghlaim Heinemann, Halley Court, Jordan Hill, Oxford OX2 8EJ

© Scottish Primary Mathematics Group

a' chiad fhoillseachadh 2000

A' chiad fhoillseachadh anns a' Ghàidhlig le Stòrlann Nàiseanta na Gàidhlig às leth Riaghaltas na h-Alba.

Air ath-fhoillseachadh ann an 2005, 2012.

© na Gàidhlig Stòrlann Nàiseanta na Gàidhlig

Na còraichean uile glèidhte. Chan fhaodar pàirt sam bith dhen leabhar seo ath-riochdachadh ann an cruth sam bith gun chead ro-làimh ann an sgrìobhadh bho Stòrlann Nàiseanta na Gàidhlig.

Tha Stòrlann Nàiseanta na Gàidhlig a' faighinn taic bho Bhòrd na Gàidhlig.



ISBN: 978-1-907054-5- 0